

Engineering Fluid Mechanics

Tarik Al-Shemmeri



T. Al-Shemmeri

Engineering Fluid Mechanics

Engineering Fluid Mechanics
© 2015 T. Al-Shemmeri & bookboon.com
ISBN 978-87-403-0114-4


Contents

| | | |
|----------|--|-----------|
| | Notation | 7 |
| 1 | Fluid Statics | 14 |
| 1.1 | Fluid Properties | 14 |
| 1.2 | Pascal's Law | 22 |
| 1.3 | Fluid-Static Law | 22 |
| 1.4 | Pressure Measurement | 26 |
| 1.5 | Centre of pressure & the Metacentre | 31 |
| 1.6 | Resultant Force and Centre of Pressure on a Curved Surface in a Static Fluid | 37 |
| 1.7 | Buoyancy | 40 |
| 1.8 | Stability of floating bodies | 43 |
| 1.9 | Tutorial problems | 49 |
| 2 | Internal Fluid Flow | 51 |
| 2.1 | Definitions | 52 |
| 2.2 | Conservation of Mass | 54 |
| 2.3 | Conservation of Energy | 56 |

Free eBook on Learning & Development

By the Chief Learning Officer of McKinsey

[Download Now](#)



[Click on the ad to read more](#)

| | | |
|----------|--|-----------|
| 2.4 | Flow Measurement | 59 |
| 2.5 | Flow Regimes | 63 |
| 2.6 | Darcy Formula | 64 |
| 2.7 | The Friction factor and Moody diagram | 65 |
| 2.8 | Flow Obstruction Losses | 69 |
| 2.9 | Fluid Power | 70 |
| 2.10 | Fluid Momentum | 73 |
| 2.11 | Tutorial Problems | 80 |
| 3 | External Fluid Flow | 82 |
| 3.1 | Regimes of External Flow | 82 |
| 3.2 | Drag Coefficient | 83 |
| 3.3 | The Boundary Layer | 85 |
| 3.4 | Worked Examples | 88 |
| 3.5 | Tutorial Problems | 97 |
| 4 | Compressible Fluid Dynamics | 99 |
| 4.1 | Compressible flow definitions | 99 |
| 4.2 | Derivation of the Speed of sound in fluids | 100 |
| 4.3 | The Mach number | 102 |



www.sylvania.com

We do not reinvent
the wheel we reinvent
light.

Fascinating lighting offers an infinite spectrum of possibilities: Innovative technologies and new markets provide both opportunities and challenges. An environment in which your expertise is in high demand. Enjoy the supportive working atmosphere within our global group and benefit from international career paths. Implement sustainable ideas in close cooperation with other specialists and contribute to influencing our future. Come and join us in reinventing light every day.

Light is OSRAM

OSRAM SYLVANIA 

| | | |
|----------|--|------------|
| 4.4 | Compressibility Factor | 105 |
| 4.5 | Energy equation for frictionless adiabatic gas processes | 109 |
| 4.6 | Stagnation properties of compressible flow | 113 |
| 4.7 | Worked Examples | 116 |
| 4.8 | Tutorial Problems – Compressible Flow | 121 |
| 5 | Hydroelectric Power | 123 |
| 5.1 | Introduction | 123 |
| 5.2 | Types of hydraulic turbines | 124 |
| 5.3 | Performance evaluation of Hydraulic Turbines | 127 |
| 5.4 | Pumped storage hydroelectricity | 130 |
| 5.5 | Worked Examples | 134 |
| 5.7 | Tutorial Problems | 137 |
| | Sample Examination paper | 138 |
| | Formulae Sheet | 146 |



Discover the truth at www.deloitte.ca/careers

Deloitte.

© Deloitte & Touche LLP and affiliated entities.



Click on the ad to read more

Notation

| Symbol | definition | units |
|------------|------------------------------|-----------------------|
| A | area | m^2 |
| D | diameter | m |
| F | force | N |
| g | gravitational acceleration | m/s^2 |
| h | head or height | m |
| L | length | m |
| m | mass | kg |
| P | pressure | Pa or N/m^2 |
| ΔP | pressure difference | Pa or N/m^2 |
| Q | volume flow rate | m^3/s |
| r | radius | m |
| t | time | s |
| V | velocity | m/s |
| z | height above arbitrary datum | m |

Subscripts

| | |
|---|-----------------|
| a | atmospheric |
| c | cross-sectional |
| f | pipe friction |
| o | obstruction |
| p | pump |
| r | relative |
| s | surface |
| t | turbine |
| x | x-direction |
| y | y-direction |
| z | elevation |

Dimensionless numbers

| | |
|-------|-------------------------------|
| C_d | discharge coefficient |
| f | friction factor (pipes) |
| K | obstruction loss factor |
| k | friction coefficient (blades) |
| Re | Reynolds number |

Greek symbols

| | | |
|------------------------|----------------------|-------------------|
| θ, α, ϕ | angle | degrees |
| μ | dynamic viscosity | kg/ms |
| ν | kinematics viscosity | m ² /s |
| ρ | density | kg/m ³ |
| τ | shear stress | N/m ² |
| η | efficiency | % |

Dimensions and Units

Any physical situation, whether it involves a single object or a complete system, can be described in terms of a number of recognisable properties which the object or system possesses. For example, a moving object could be described in terms of its mass, length, area or volume, velocity and acceleration. Its temperature or electrical properties might also be of interest, while other properties – such as density and viscosity of the medium through which it moves – would also be of importance, since they would affect its motion. These measurable properties used to describe the physical state of the body or system are known as its variables, some of which are basic such as length and time, others are derived such as velocity. Each variable has units to describe the magnitude of that quantity. Lengths in SI units are described in units of meters. The “Meter” is the unit of the dimension of length (L); hence the area will have dimension of L², and volume L³. Time will have units of seconds (T), hence velocity is a derived quantity with dimensions of (LT⁻¹) and units of meter per second. A list of some variables is given in Table 1 with their units and dimensions.

Definitions of Some Basic SI Units

Mass: The kilogram is the mass of a platinum-iridium cylinder kept at Sevres in France.

Length: The metre is now defined as being equal to 1 650 763.73 wavelengths in vacuum of the orange line emitted by the Krypton-86 atom.

Time: The second is defined as the fraction $1/31\,556\,925.975$ of the tropical year for 1900. The second is also declared to be the interval occupied by 9 192 631 770 cycles of the radiation of the caesium atom corresponding to the transition between two closely spaced ground state energy levels.

Temperature: The Kelvin is the degree interval on the thermodynamic scale on which the temperature of the triple point of water is 273.16 K exactly. (The temperature of the ice point is 273.15 K).

Definitions of Some Derived SI Units

Force:

The Newton is that force which, when acting on a mass of one kilogram gives it an acceleration of one metre per second per second.

Work Energy, and Heat:

The joule is the work done by a force of one Newton when its point of application is moved through a distance of one metre in the direction of the force. The same unit is used for the measurement of every kind of energy including quantity of heat.

The Newton metre, the joule and the watt second are identical in value. It is recommended that the Newton is kept for the measurement of torque or moment and the joule or watt second is used for quantities of work or energy.

| Quantity | Unit | Symbol |
|-------------------------|---------------|--------|
| Length [L] | Metre | m |
| Mass [m] | Kilogram | kg |
| Time [t] | Second | s |
| Electric current [I] | Ampere | A |
| Temperature [T] | degree Kelvin | K |
| Luminous intensity [Iv] | Candela | cd |

Table 1: Basic SI Units

| Quantity | Unit | Symbol | Derivation |
|--------------------|--------|--------|---------------------|
| Force [F] | Newton | N | kg-m/s ² |
| Work, energy [E] | joule | J | N-m |
| Power [P] | watt | W | J/s |
| Pressure [p] | Pascal | Pa | N/m ² |

Table 2: Derived Units with Special Names

| Quantity | Symbol |
|----------------------|-----------------------------------|
| Area | m ² |
| Volume | m ³ |
| Density | kg/m ³ |
| Angular acceleration | rad/s ² |
| Velocity | m/s |
| Pressure, stress | N/m ² |
| Kinematic viscosity | m ² /s |
| Dynamic viscosity | N-s/m ² |
| Momentum | kg-m/s |
| Kinetic energy | kg-m ² /s ² |
| Specific enthalpy | J/kg |
| Specific entropy | J/kg K |

Table 3: Some Examples of Other Derived SI Units

| Quantity | Unit | Symbol | Derivation |
|---------------------|-----------------------|---------|--|
| Time | minute | min | 60 s |
| Time | hour | h | 3.6 ks |
| Temperature | degree Celsius | °C | K – 273.15 |
| Angle | degree | ° | $\pi/180$ rad |
| Volume | litre | l | 10 ⁻³ m ³ or dm ³ |
| Speed | kilometre per hour | km/h | - |
| Angular speed | revolution per minute | rev/min | - |
| Frequency | hertz | Hz | cycle/s |
| Pressure | bar | b | 10 ² kN/m ² |
| Kinematic viscosity | stoke | St | 100 mm ² /s |
| Dynamic viscosity | poise | P | 100 mN-s/m ² |

Table 4: Non-SI Units

| Name | Symbol | Factor | Number |
|--------|--------|------------|---------------------------|
| exa | E | 10^{18} | 1,000,000,000,000,000,000 |
| Peta | P | 10^{15} | 1,000,000,000,000,000 |
| tera | T | 10^{12} | 1,000,000,000,000 |
| giga | G | 10^9 | 1,000,000,000 |
| mega | M | 10^6 | 1,000,000 |
| kilo | k | 10^3 | 1,000 |
| hecto | h | 10^2 | 100 |
| deca | da | 10 | 10 |
| deci | d | 10^{-1} | 0.1 |
| centi | c | 10^{-2} | 0.01 |
| milli | m | 10^{-3} | 0.001 |
| micro | μ | 10^{-6} | 0.000001 |
| nano | n | 10^{-9} | 0.000000001 |
| pico | p | 10^{-12} | 0.000000000001 |
| fempto | f | 10^{-15} | 0.000000000000001 |
| atto | a | 10^{-18} | 0.000000000000000001 |

Table 5: Multiples of Units

| item | conversion |
|---------------|---|
| Length | 1 in = 25.4 mm 1 ft = 0.3048 m 1 yd = 0.9144 m 1 mile = 1.609 km |
| Mass | 1 lb. = 0.4536 kg (0.453 592 37 exactly) |
| Area | 1 in ² = 645.2 mm ² 1 ft ² = 0.092 90 m ² 1 yd ² = 0.8361 m ² 1 acre = 4047 m ² |
| Volume | 1 in ³ = 16.39 cm ³ 1 ft ³ = 0.028 32 m ³ = 28.32 litre 1 yd ³ = 0.7646 m ³ = 764.6 litre 1 UK gallon = 4.546 litre 1 US gallon = 3.785 litre |
| Force, Weight | 1 lbf = 4.448 N |
| Density | 1 lb/ft ³ = 16.02 kg/m ³ |
| Velocity | 1 km/h = 0.2778 m/s 1 ft/s = 0.3048 m/s 1 mile/h = 0.4470 m/s = 1.609 km/h |

| | |
|---------------------|---|
| Pressure, Stress | 1000 Pa = 1000 N/m ² = 0.01 bar 1 in H ₂ O = 2.491 mb 1 lbf/in ² (Psi) = 68.95 mb or 1 bar = 14.7 Psi |
| Power | 1 horsepower = 745.7 W |
| Moment, Torque | 1 ft-pdl = 42.14 mN-m |
| Rates of Flow | 1 gal/h = 1.263 ml/s = 4.546 l/h 1 ft ³ /s = 28.32 l/s |
| Fuel Consumption | 1 mile/gal = 0.3540 km/l |
| Kinematic Viscosity | 1 ft ² /s = 929.0 cm ² /s = 929.0 St |
| Dynamic Viscosity | 1 lbf-s/ft ² = 47.88 N-s/m ² = 478.8 P 1 pdl-s/ft ² = 1.488 N-s/m ² = 14.88 P 1cP = 1 mN-s/m ² |
| Energy | 1 horsepower-h = 2.685 MJ 1 kW-h = 3.6 MJ 1 Btu = 1.055 kJ 1 therm = 105.5 MJ |

Table 6: Conversion Factors

SIMPLY CLEVER

ŠKODA



We will turn your CV into an opportunity of a lifetime



Do you like cars? Would you like to be a part of a successful brand? We will appreciate and reward both your enthusiasm and talent. Send us your CV. You will be surprised where it can take you.

Send us your CV on www.employerforlife.com




Click on the ad to read more

| | Unit | X Factor | = Unit | x Factor | = Unit |
|---------------------------------|-------------------------|----------|--------------------|----------|-------------------------|
| Length (L) | ins | 25.4 | mm | 0.0394 | ins |
| | ft | 0.305 | m | 3.281 | ft |
| Area (A) | in ² | 645.16 | mm ² | 0.0016 | in ² |
| | ft ² | 0.093 | m ² | 10.76 | ft ² |
| Volume (V) | in ³ | 16.387 | mm ³ | 0.000061 | in ³ |
| | ft ³ | 0.0283 | m ³ | 35.31 | ft ³ |
| | ft ³ | 28.32 | litre | 0.0353 | ft ³ |
| | pints | 0.5682 | litre | 1.7598 | pints |
| | Imp. gal | 4.546 | litre | 0.22 | Imp gal |
| | Imp. gal | 0.0045 | m ³ | 220 | Imp gal |
| Mass (M) | lb. | 0.4536 | kg | 2.2046 | lb. |
| | tonne | 1000 | kg | | |
| Force (F) | lb. | 4.448 | N | 0.2248 | lb. |
| Velocity (V) | ft/min | 0.0051 | m/sec | 196.85 | ft/min |
| Volume Flow | Imp gal/min | 0.0758 | litres/s | 13.2 | Imp gal/min |
| | Imp gal/h | 0.00013 | m ³ /s | 7,936.5 | Imp gal/h |
| | ft ³ /min | 0.00047 | m ³ /s | 2,118.6 | ft ³ /min |
| Pressure (P) | lb/in ² | 0.0689 | bar | 14.5 | lb/in ² |
| | kg/cm ² | 0.9807 | bar | 1.02 | kg/cm ² |
| Density (ρ) | lb/ft ³ | 16.019 | kg/m ³ | 0.0624 | lb/ft ³ |
| Heat Flow Rate | Btu/h | 0.2931 | W | 3.412 | Btu/h |
| | kcal/h | 1.163 | W | 0.8598 | kcal/h |
| Thermal Conductivity (k) | Btu/ft h R | 1.731 | W/m K | 0.5777 | Btu/ft h R |
| | kcal/m h K | 1.163 | W/m K | 0.8598 | kcal/m h K |
| Thermal Conductance (U) | Btu/h ft ² R | 5.678 | W/m ² K | 0.1761 | Btu/h ft ² R |
| | kcal/h m ² K | 1.163 | W/m ² K | 0.8598 | kcal/h m ² K |
| Enthalpy (h) | Btu/lb. | 2,326 | J/kg | 0.00043 | Btu/lb. |
| | kcal/kg | 4,187 | J/kg | 0.00024 | kcal/kg |

Table 7: Conversion Factors

Simply multiply the imperial by a constant factor to convert into Metric or the other way around.

1 Fluid Statics



1.1 Fluid Properties

Fluid

A fluid is a substance, which deforms when subjected to a force. A fluid can offer no permanent resistance to any force causing change of shape. Fluid flow under their own weight and take the shape of any solid body with which they are in contact. Fluids may be divided into liquids and gases. **Liquids** occupy definite volumes. **Gases** will expand to occupy any containing vessel.

S.I Units in Fluids

The dimensional unit convention adopted in this course is the System International or S.I system. In this convention, there are 9 basic dimensions. The three applicable to this unit are: mass, length and time. The corresponding units are kilogrammes (mass), metres (length), and seconds (time). All other fluid units may be derived from these.

Density

The density of a fluid is its mass per unit volume and the SI unit is kg/m^3 . Fluid density is temperature dependent and to a lesser extent it is pressure dependent. For example the density of water at sea-level and 4°C is 1000 kg/m^3 , whilst at 50°C it is 988 kg/m^3 .

The relative density (or *specific gravity*) is the ratio of a fluid density to the density of a standard reference fluid maintained at the same temperature and pressure:

$$\text{For gases: } RD_{\text{gas}} = \frac{\rho_{\text{gas}}}{\rho_{\text{air}}} = \frac{\rho_{\text{gas}}}{1.205 \text{ kg/m}^3}$$

$$\text{For liquids: } RD_{\text{liquid}} = \frac{\rho_{\text{liquid}}}{\rho_{\text{water}}} = \frac{\rho_{\text{liquid}}}{1000 \text{ kg/m}^3}$$

Viscosity

Viscosity is a measure of a fluid's resistance to flow. The viscosity of a liquid is related to the ease with which the molecules can move with respect to one another. Thus the viscosity of a liquid depends on the:

- Strength of attractive forces between molecules, which depend on their composition, size, and shape.
- The kinetic energy of the molecules, which depend on the temperature.



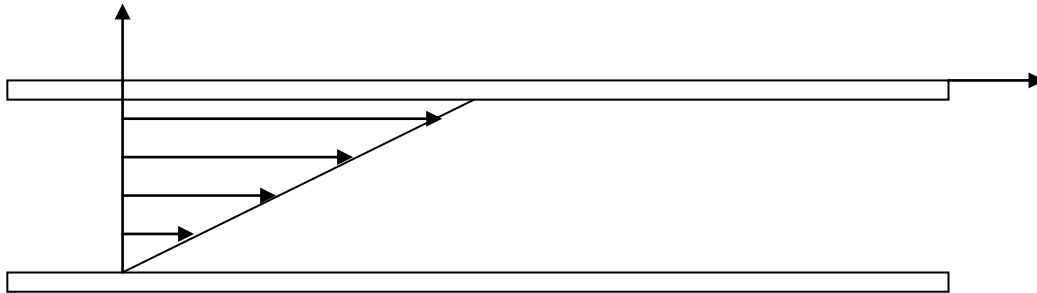
e-learning for kids

- The number 1 MOOC for Primary Education
- Free Digital Learning for Children 5-12
- 15 Million Children Reached

About e-Learning for Kids Established in 2004, e-Learning for Kids is a global nonprofit foundation dedicated to fun and free learning on the Internet for children ages 5 - 12 with courses in math, science, language arts, computers, health and environmental skills. Since 2005, more than 15 million children in over 190 countries have benefitted from eLessons provided by EFK! An all-volunteer staff consists of education and e-learning experts and business professionals from around the world committed to making difference. eLearning for Kids is actively seeking funding, volunteers, sponsors and courseware developers; get involved! For more information, please visit www.e-learningforkids.org.

Viscosity is not a strong function of pressure; hence the effects of pressure on viscosity can be neglected. However, viscosity depends greatly on temperature. For liquids, the viscosity decreases with temperature, whereas for gases, the viscosity increases with temperature. For example, crude oil is often heated to a higher temperature to reduce the viscosity for transport.

Consider the situation below, where the top plate is moved by a force F moving at a constant rate of V (m/s).



The shear stress τ is given by:

$$\tau = F/A$$

The rate of deformation dv (or the magnitude of the velocity component) will increase with distance above the fixed plate. Hence:

$$\tau = \text{constant} \times (dv / dy)$$

where the constant of proportionality is known as the **Dynamic viscosity** (μ) of the particular fluid separating the two plates.

$$\tau = \mu \times (V / y)$$

Where V is the velocity of the moving plate, and y is the distance separating the two plates. The units of dynamic viscosity are kg/ms or Pa s. A non-SI unit in common usage is the poise where 1 poise = 10^{-1} kg/ms

Kinematic viscosity (ν) is defined as the ratio of dynamic viscosity to density.

$$\text{i.e. } \nu = \mu / \rho \quad (1.1)$$

The units of kinematic viscosity are m^2/s .

Another non-SI unit commonly encountered is the “stoke” where 1 stoke = $10^{-4} m^2/s$.

| Typical liquid | Dynamic Viscosity Centipoise* (cp) | Kinematic Viscosity Centistokes (cSt) |
|----------------|------------------------------------|---------------------------------------|
| Water | 1 | 1 |
| Vegetable oil | 34.6 | 43.2 |
| SAE 10 oil | 88 | 110 |
| SAE 30 oil | 352 | 440 |
| Glycerine | 880 | 1100 |
| SAE 50 oil | 1561 | 1735 |
| SAE 70 oil | 17,640 | 19,600 |

Table 1.1 Viscosity of selected fluids at standard temperature and pressure

Note: 1 cp = $10^{-3} kg/ms$ and 1cSt = $10^{-6} m^2/s$

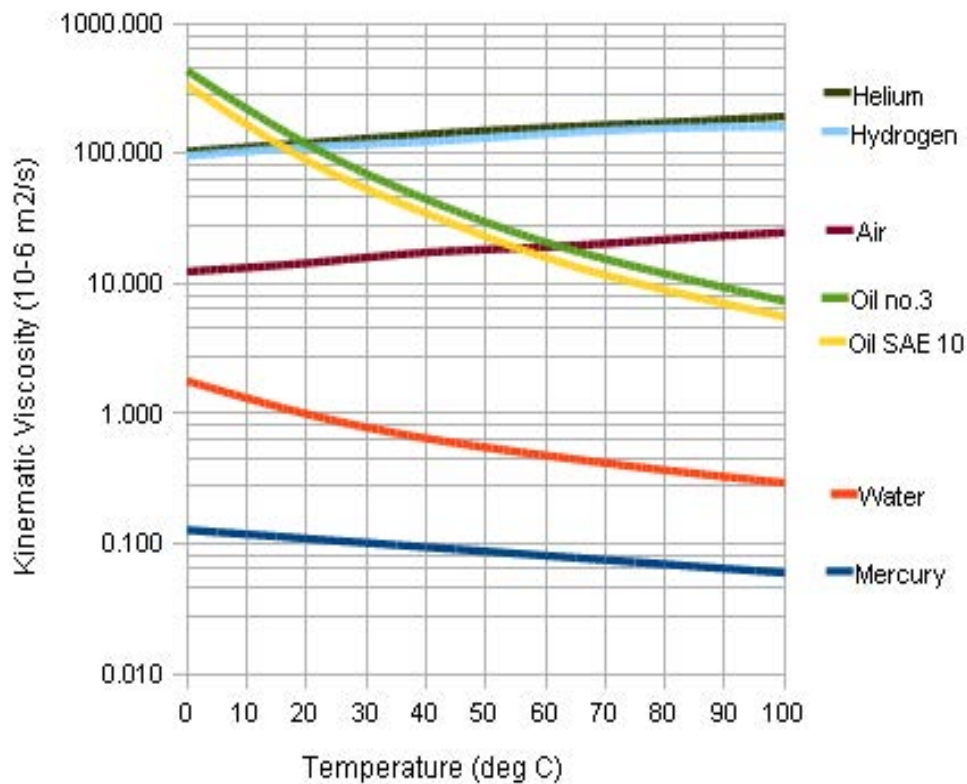


Figure 1.1 Variation of the Viscosity of some common fluids with temperature

Worked Example 1.1

The **temperature** dependence of liquid viscosity is the phenomenon by which liquid **viscosity** tends to decrease as its temperature increases. Viscosity of water can be predicted with accuracy to within 2.5% from 0°C to 370°C by the following expression:

$$\mu \text{ (kg/ms)} = 2.414 \times 10^{-5} \times 10^{(247.8 \text{ K}/(\text{Temp} - 140 \text{ K}))}$$

Calculate the dynamic viscosity and kinematic viscosity of water at 20°C respectively. You may assume that water is incompressible, and its density is 1000 kg/m³.

Compare the result with that you find from the viscosity chart and comment on the difference.

Solution

a) Using the expression given:

$$\begin{aligned} \mu \text{ (kg/ms)} &= 2.414 \times 10^{-5} \times 10^{(247.8 \text{ K}/(\text{Temp} - 140 \text{ K}))} \\ &= 2.414 \times 10^{-5} \times 10^{(247.8/(20+273-140))} \\ &= 1.005 \times 10^{-3} \text{ kg/ms} \end{aligned}$$

Cynthia | AXA Graduate

AXA Global Graduate Program

Find out more and apply

redefining / standards AXA

$$\begin{aligned} \text{Kinematic viscosity} &= \text{dynamic viscosity} / \text{density} \\ &= 1.005 \times 10^{-3} / 1000 = 1.005 \times 10^{-6} \text{ m}^2/\text{s} \end{aligned}$$

b) From the kinematic viscosity chart, for water at 20 is $1.0 \times 10^{-6} \text{ m}^2/\text{s}$.

The difference is small, and observation errors may be part of it.

Worked Example 1.2

A shaft 100 mm diameter (D) runs in a bearing 200 mm long (L). The two surfaces are separated by an oil film 2.5 mm thick (c). Take the oil viscosity (μ) as 0.25 kg/ms. if the shaft rotates at a speed of (N) revolutions per minute.

a) Show that the torque exerted on the bearing is given as:

$$\text{_____}$$

b) Calculate the torque necessary to rotate the shaft at 600 rpm.

Solution:

a) The viscous shear stress is the ratio of viscous force divided by area of contact

$$\text{—}$$

$$\text{_____}$$

$$\text{_____}$$

b) the torque at the given condition is calculated using the above equation:

$$\text{_____} \quad \text{_____}$$

Fluid Pressure

Fluid pressure is the force exerted by the fluid per unit area. Fluid pressure is transmitted with equal intensity in all directions and acts normal to any plane. In the same horizontal plane the pressure intensities in a liquid are equal. In the SI system the units of fluid pressure are Newtons/m² or Pascals, where 1 N/m² = 1 Pa.

$$\text{i.e. } P = \frac{F}{A} \quad (1.2)$$

Many other pressure units are commonly encountered and their conversions are detailed below:-

| | |
|---|-----------------------------------|
| 1 bar | =10 ⁵ N/m ² |
| 1 atmosphere | = 101325 N/m ² |
| 1 psi (1bf/in ² – not SI unit) | = 6895 N/m ² |
| 1 Torr | = 133.3 N/m ² |

Terms commonly used in static pressure analysis include:

Pressure Head. The pressure intensity at the base of a column of homogenous fluid of a given height in metres.

Vacuum. A perfect vacuum is a completely empty space in which, therefore the pressure is zero.

Atmospheric Pressure. The pressure at the surface of the earth due to the head of air above the surface. At sea level the atmospheric pressure is about 101.325 kN/m² (i.e. one atmosphere = 101.325 kN/m² is used as units of pressure).

Gauge Pressure. The pressure measured above or below atmospheric pressure.

Absolute Pressure. The pressure measured above absolute zero or vacuum.

$$\text{Absolute Pressure} = \text{Gauge Pressure} + \text{Atmospheric Pressure} \quad (1.3)$$

Vapour Pressure

When evaporation of a liquid having a free surface takes place within an enclosed space, the partial pressure created by the vapour molecules is called the vapour pressure. Vapour pressure increases with temperature.

Compressibility

A parameter describing the relationship between pressure and change in volume for a fluid.

A compressible fluid is one which changes its volume appreciably under the application of pressure. Therefore, liquids are virtually incompressible whereas gases are easily compressed.

The compressibility of a fluid is expressed by the *bulk modulus of elasticity* (E), which is the ratio of the change in unit pressure to the corresponding volume change per unit volume.

I joined MITAS because
I wanted **real responsibility**

The Graduate Programme
for Engineers and Geoscientists
www.discovermitas.com



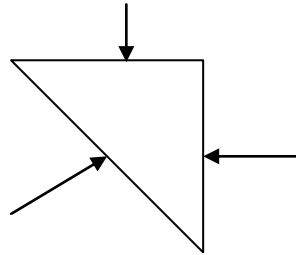
Month 16
I was a construction supervisor in the North Sea advising and helping foremen solve problems

Real work
International opportunities
Three work placements



1.2 Pascal's Law

Pascal's law states that the pressure intensity at a point in a fluid at rest is the same in all directions. Consider a small prism of fluid of unit thickness in the z-direction contained in the bulk of the fluid as shown below. Since the cross-section of the prism is equilateral triangle, P_3 is at an angle of 45° with the x-axis. If the pressure intensities normal to the three surfaces are P_1 , P_2 , P_3 as shown then since:-



Force = Pressure x Area

$$\text{Force on face AB} = P_1 \times (\text{AB} \times 1)$$

$$\text{BC} = P_2 \times (\text{BC} \times 1)$$

$$\text{AC} = P_3 \times (\text{AC} \times 1)$$

Resolving forces vertically:

$$P_1 \times \text{AB} = P_3 \times \text{AC} \cos \theta$$

$$\text{But } \text{AC} \cos \theta = \text{AB} \text{ Therefore } P_1 = P_3$$

Resolving forces horizontally:

$$P_2 \times \text{BC} = P_3 \times \text{AC} \sin \theta$$

$$\text{But } \text{AC} \sin \theta = \text{BC} \text{ Therefore } P_2 = P_3$$

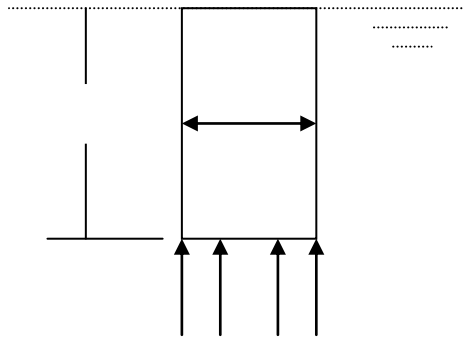
$$\text{Hence } P_1 = P_2 = P_3 \quad (1.4)$$

In words: the pressure at any point is equal in all directions.

1.3 Fluid-Static Law

The fluid-static law states that the pressure in a fluid increases with increasing depth. In the case of water this is termed the hydrostatic law.

Consider a vertical column, height h (m), of fluid of constant cross-sectional area A (m^2) totally surrounded by the same fluid of density ρ (kg/m^3)



For vertical equilibrium of forces:

Force on base = Weight of Column of Fluid

Weight of column = mass \times acceleration due to gravity $W = m \cdot g$

the mass of the fluid column = its density \times volume,

the volume of the column = Area (A) of the base \times height of the column (h);

the weight of the column = $\rho \times A \times h \times g$

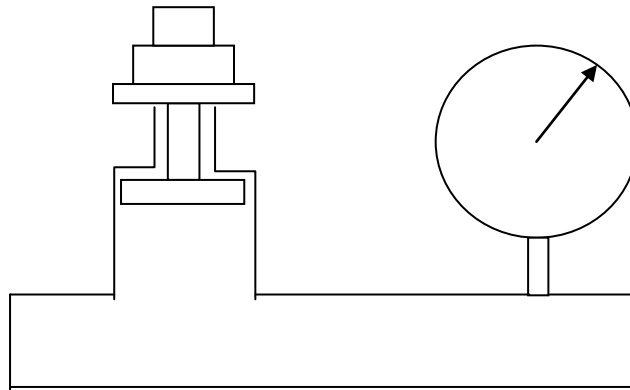
Force = Pressure \times Area = $P \times A$

Hence: $P \times A = \rho \times A \times h \times g$

Divide both sides by the area A , $P = \rho \times g \times h$ (1.5)

Worked Example 1.3

A dead-weight tester is a device commonly used for calibrating pressure gauges. Weights loaded onto the piston carrier generate a known pressure in the piston cylinder, which in turn is applied to the gauge. The tester shown below generates a pressure of 35 MPa when loaded with a 100 kg weight.



Determine:

- The diameter of the piston cylinder (mm)
- The load (kg) necessary to produce a pressure of 150kPa



93%

OF MIM STUDENTS ARE
WORKING IN THEIR SECTOR 3 MONTHS
FOLLOWING GRADUATION

MASTER IN MANAGEMENT

- STUDY IN THE CENTER OF MADRID AND TAKE ADVANTAGE OF THE UNIQUE OPPORTUNITIES THAT THE CAPITAL OF SPAIN OFFERS
- PROPEL YOUR EDUCATION BY EARNING A DOUBLE DEGREE THAT BEST SUITS YOUR PROFESSIONAL GOALS
- STUDY A SEMESTER ABROAD AND BECOME A GLOBAL CITIZEN WITH THE BEYOND BORDERS EXPERIENCE

Length: 10 MONTHS
Av. Experience: 1 YEAR
Language: ENGLISH / SPANISH
Format: FULL-TIME
Intakes: SEPT / FEB

5 SPECIALIZATIONS
PERSONALIZE YOUR PROGRAM

#10 WORLDWIDE
MASTER IN MANAGEMENT
FINANCIAL TIMES

55 NATIONALITIES
IN CLASS

www.ie.edu/master-management

| mim.admissions@ie.edu

| Follow us on IE MIM Experience

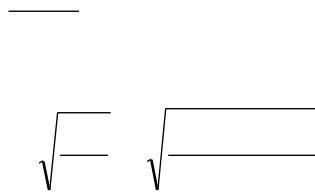
Solution:

a) $P = F/A$

The Force $F = \text{mass} \times \text{acceleration} = 100 \times 9.81 = 981 \text{ N}$

Hence $A = F / P = 981 / 35 \times 10^6 = 2.8 \times 10^{-5} \text{ m}^2$

The area of cross-section of the piston is circular, hence the diameter is found as follows:



b) $F = P \times A = 150 \times 10^3 \times 2.8 \times 10^{-5} = 42 \text{ N}$

But $F = mg$ Therefore $m = 42/9.81 = 4.28 \text{ kg}$.

Worked Example 1.4

- a) If the air pressure at sea level is 101.325 kPa and the density of air is 1.2 kg/m³, calculate the thickness of the atmosphere (m) above the earth.
- b) What gauge pressure is experienced by a diver at a depth of 10m in seawater of relative density 1.025?

Assume $g = 9.81 \text{ m/s}^2$.

Solution:

a) Given: $P = 101.325 \text{ kPa} = 101325 \text{ Pa}$
 $\rho_{\text{air}} = 1.2 \text{ kg/m}^3$
 Then using $P = \rho_{\text{air}} g h$

The depth of the atmospheric air layer is calculated:



b) since the relative density is $RD = 1.025$

Therefore

$$\rho_{\text{seawater}} = 1.025 \times 1000 = 1025 \text{ kg/m}^3$$

$$\begin{aligned} \text{Then } P &= \rho_{\text{seawater}} g h \\ &= 1025 \times 9.81 \times 10 \\ &= 100.552 \text{ kPa} \end{aligned}$$

1.4 Pressure Measurement

In general, sensors used to measure the pressure of a fluid are called pressure transducers. A Transducer is a device that, being activated by energy from the fluid system, in itself responds in a manner related to the magnitude of the applied pressure. There are essentially two different ways of measuring the pressure at a point in a fluid whether static or in motion. The essential feature of a pressure transducer is the elastic element which converts the signal from the pressure source into mechanical displacement (e.g. the Bourdon gauge). The second category has an electric element which converts the signal into an electrical output. The popularity of electric pressure transducers is due to their adaptability to be amplified, transmitted, controlled and stored.

The Bourdon gauge is a mechanical pressure measurement device that relies on a circular arc of elliptical cross-section tube (the Bourdon tube) closed at one end, changing shape to a circular cross-section under the action of fluid pressure. The resulting motion at the closed end is amplified by a gear arrangement to produce the movement of a pointer around a scale. The scale is normally calibrated to indicate pressure readings proportional to the deflection of the pointer.

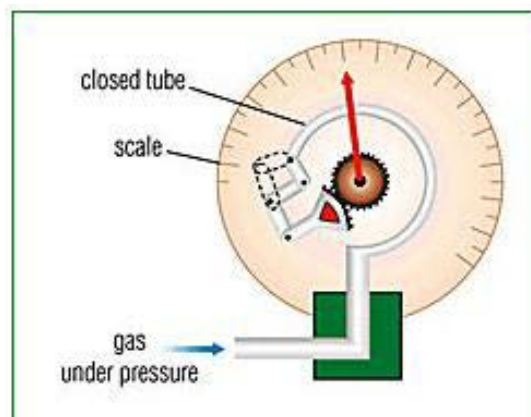


Figure 1.2 Bourdon pressure gauge

Manometers:

The pressure is indicated by the displacement of the manometric fluid as high will be given the symbol P_1 and on the low side will be P_2 . By balancing the forces on each side, a relationship between pressures and manometer displacement can be established.

A. U-tube manometer

$$P_1 - P_2 = \rho g h \quad (1.6)$$

B. Well-type manometer

$$P_1 - P_2 = \rho g (h_1 + h_2)$$

But since $h_2 \times d = h_1 \times D$ the equation can be rewritten as

$$P_1 - P_2 = \rho g h_1 (1 + d / D) \quad (1.7)$$



“I studied English for 16 years but...
...I finally learned to speak it in just six lessons”
Jane, Chinese architect

ENGLISH OUT THERE

Click to hear me talking before and after my unique course download

C. Inclined tube manometer

$$P_1 - P_2 = \rho g h$$

$L = h / \sin(\theta)$ with (θ) as the angle of the low limb with the horizontal axis.

Hence:

$$P_1 - P_2 = \rho g L \sin(\theta) \quad (1.8)$$

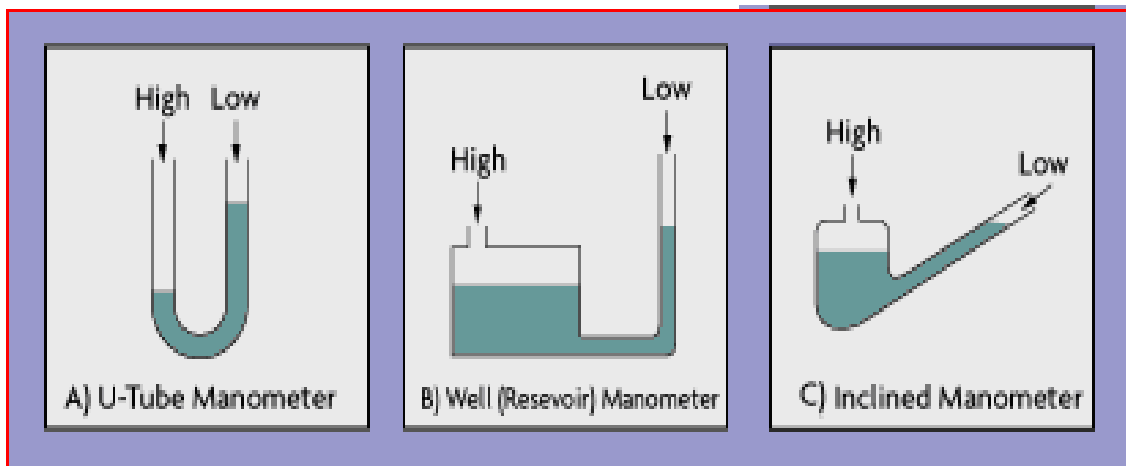
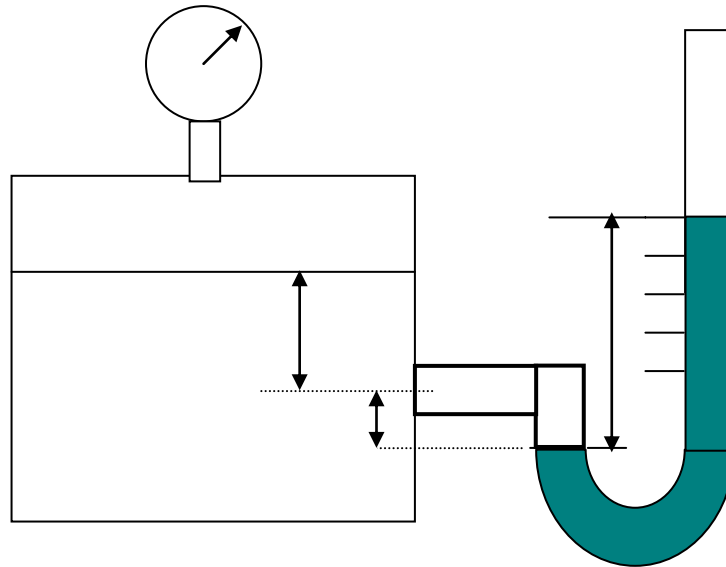


Figure 1.3 Manometers

Worked Example 1.5

A U-tube manometer is connected to a closed tank, shown below, containing oil having a density of 860 kg/m^3 , the pressure of the air above the oil being 3500 Pa . If the pressure at point A in the oil is 14000 Pa and the manometer fluid has a RD of 3, determine:

1. The depth of oil, z_1
2. The differential reading, z_2 on the manometer.

**Solution:**

1. At point A in the tank:

$$P_A = \rho_{\text{oil}} g z_1 + P_{\text{air}}$$

$$\text{i.e. } 14000 = (860 \times 9.81 \times z_1) + 3500$$

$$z_1 = 1.244 \text{ m.}$$

2. At datum : equilibrium of pressure on both sides

$$P_{\text{LHS}} = P_{\text{RHS}}$$

$$P_A + \rho_{\text{oil}} \times g \times z_1 = \rho_{\text{m}} \times g \times z_2$$

$$14000 + (860 \times 9.81 \times 0.6) = 3000 \times 9.81 \times z_2$$

$$z_2 = 0.647 \text{ m}$$

Applications of Pascal’s law

Two very useful devices based on Pascal’s law are hydraulic brakes and hydraulic lift shown below. The pressure applied by the foot on the break pedal is transmitted to the brake fluid contained in the master cylinder. This pressure is transmitted undiminished in all directions and acts through the brake pads on the wheel reducing the rotary motion to a halt. Sliding friction between the tyres and the road surface opposes the tendency of forward motion reducing the linear momentum to zero.

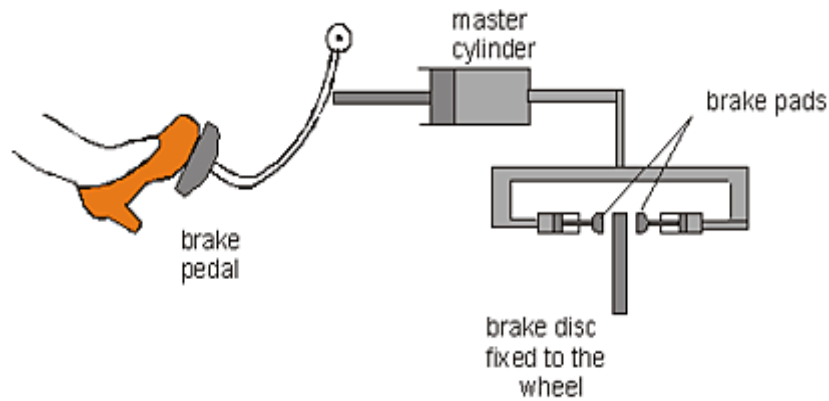


Figure 1.4 Hydraulic brakes

In the past 5 years we have drilled around

95,000 km

—that’s more than **twice** around the world.

Who are we?
We are the world’s leading provider of reservoir characterization, drilling, production, and processing technologies to the oil and gas industry.

Who are we looking for?
We offer countless opportunities in the following domains:

- **Operations**
- **Research, Engineering, and Manufacturing**
- **Geoscience and Petrotechnical**
- **Commercial and Business**

We’re looking for high-energy, self-motivated graduates with vision and integrity to join our team.

careers.slb.com

What will you be?

Schlumberger



By means of hydraulic lifts, vehicles are lifted high on ramps for repairs and servicing. A force F applied on the cylinder of small area A , creates a pressure $P=F/A$ which acts upwards on the ramp in the large cylinder of cross sectional area A' . The upward force acting on the ramp (being equal to $F'= FA'/A$) is much larger than the applied force F .

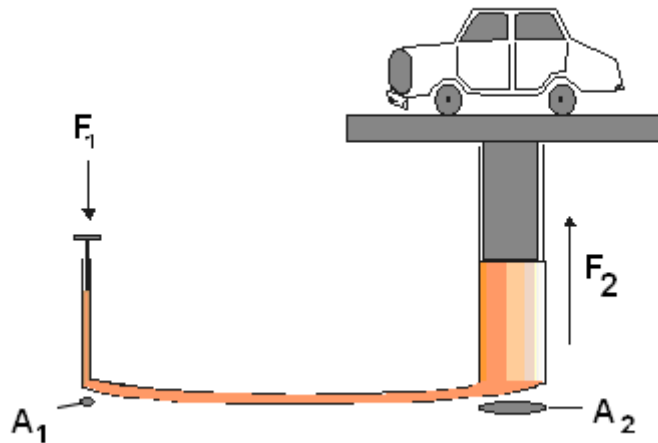
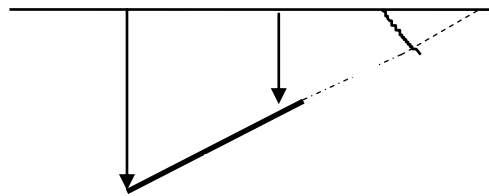


Figure 1.5 Hydraulic lift

1.5 Centre of pressure & the Metacentre

Consider a submerged plane surface making an angle α when extended to a horizontal liquid surface.



To find the point at which F acts, take moments about 0

$$\begin{aligned}
 F \cdot \ell_p &= \text{Sum of moments of forces on elementary strips} \\
 &= \int \rho g \ell \sin \alpha \cdot b \cdot d\ell \cdot \ell \\
 &= \rho g \sin \alpha \int (bd\ell) \cdot \ell^2
 \end{aligned}$$

Now $\int (bd\ell) \cdot \ell^2 = 2\text{nd moment of area about line through } 0 (I_o)$

Therefore,

$$\rho \cdot g \cdot h_c \cdot A \cdot \frac{h_p}{\sin \alpha} = \rho \cdot g \cdot \sin \alpha \cdot I_o \tag{1.9}$$

Rearranging

$$h_p = \frac{I_o}{Ah_c} \sin^2 \alpha \quad (1.10)$$

Since I_c which is the 2nd moment of area about the centre of gravity, is generally known for some geometry's, (see table overleaf) I_o can be found from the parallel axis theorem:

$$I_o = I_c + A.\ell_c^2 \quad (1.11)$$

Substituting for I_o in equation (1.10) and since $\ell_c = h_c/\sin \alpha$:

Then

$$h_p = \frac{I_c + \left(\frac{h_c}{\sin}\right)^2 .A}{A.h_c \alpha} .\sin^2 \alpha$$

$$h_p = \frac{I_c}{Ah_c} \sin^2 \alpha + h_c \quad (1.12)$$

Hence, $h_p > h_c$

i.e., the position of the centre of pressure is always below the centre of gravity since I_c is always positive.

The term $\frac{I_c}{Ah_c} \sin^2 \alpha$ is known as the **metacentre**, which is the distance between the centre of pressure and the centre of gravity.

SPECIAL CASE:

For the commonly encountered case of a vertical rectangular lamina, height d , width b , **with one edge lying in the free surface**, the centre of pressure may be found as follows:

Given:

$$\alpha = 90^\circ, \sin \alpha = 1.0$$

$$A = bd, h_c = \frac{d}{2}$$

Then

$$I_o = I_c + A h_c^2$$

$$= \frac{bd^3}{12} + \frac{bd \times d^2}{4} = \frac{bd^3}{3}$$

And

$$h_p = \frac{I_o}{A h_c} \sin^2 \alpha$$

$$= \frac{bd^3}{3bd} \cdot \frac{2}{d} = \frac{2d}{3}$$

Other cross-sections can be treated in a similar manner as above.

Excellent Economics and Business programmes at:



university of
 groningen




“The perfect start
 of a successful,
 international career.”

CLICK HERE
 to discover why both socially
 and academically the University
 of Groningen is one of the best
 places for a student to be

www.rug.nl/feb/education

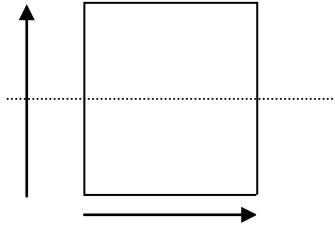
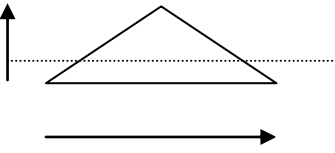
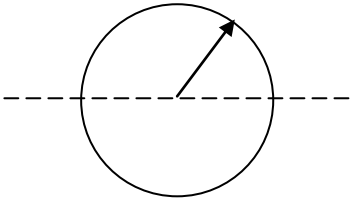
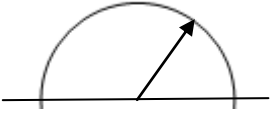
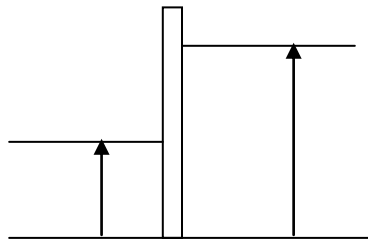
| | | | | |
|--|---|--|--|--|
| | | | | |
| |  | | | |
| |  | | | |
| |  | | | |
| |  | | | |

Table 1.10 Second Moment of Area for some common cross-sections

Worked Example 1.6

A dock gate 10 m wide has sea depths of 6 m and 15 m on its two sides respectively. The relative density of seawater is 1.03.

1. Calculate the resultant force acting on the gate due to the water pressure.
2. Find the position of the centre of pressure relative to the bottom of the gate.

Solution:

L.H.S

$$F_1 = \rho g h_c A = 1.03 \times 1000 \times 9.81 \times \frac{6}{2} \times 6 \times 10$$

$$= 1.819 \text{ MN}$$

R.H.S

$$F_2 = \rho g h_c A = 1.03 \times 1000 \times 9.81 \times \frac{15}{2} \times 15 \times 10$$

$$= 11.37 \text{ MN}$$

Resultant Force $F = F_2 - F_1 = 11.37 - 1.819 = 9.55 \text{ MN}$ acts to the left.

Only the wetted portions of the gate are relevant. Hence we have two vertical rectangles with their top edges in the free surface. Hence,

$$h_p = \frac{2d}{3}$$

$$h_1 = 2 \times 6/3 = 4 \text{ m}$$

$$h_2 = 2 \times 15/3 = 10 \text{ m}$$

If y is the distance from the bottom to position of the resultant force F then taking moments anti-clockwise about the base of the gate:-

$$F \cdot y = F_2 \times (15 - h_2) - F_1 \times (6 - h_1)$$

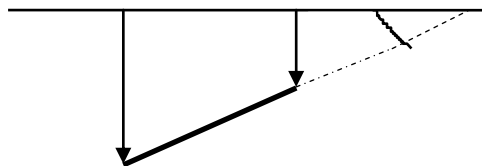
$$9.55y = 11.37 (15 - 10) - 1.819 (6 - 4)$$

Therefore $y = 5.57$ m above the bottom of the gate.

Worked Example 1.7

A flat circular plate, 1.25 m diameter is immersed in water such that its greatest and least depths are 1.50 m and 0.60 m respectively. Determine:-

1. The force exerted on one face by the water pressure,
2. The position of the centre of pressure.



American online LIGS University

is currently enrolling in the
Interactive Online **BBA, MBA, MSc,**
DBA and PhD programs:

- ▶ enroll **by September 30th, 2014** and
- ▶ **save up to 16%** on the tuition!
- ▶ pay in 10 installments / 2 years
- ▶ Interactive **Online** education
- ▶ visit www.ligsuniversity.com to find out more!

Note: LIGS University is not accredited by any nationally recognized accrediting agency listed by the US Secretary of Education. More info [here](#).



Solution:

$$\text{Area of lamina } A = \frac{1}{4} \pi (1.25)^2 = 1.228 \text{ m}^2$$

$$\text{Depth to centroid } h_c = \frac{1}{2} (0.60 + 1.50) = 1.05 \text{ m}$$

$$\begin{aligned} \text{Resultant Force } F &= \rho g A h_c = 9.81 \times 1000 \times 1.228 \times 1.05 \\ &= 12650 \text{ N} \end{aligned}$$

$$\text{From table for circular plate } I_c = \frac{\pi r^4}{4}$$

The centre of pressure

1.6 Resultant Force and Centre of Pressure on a Curved Surface in a Static Fluid

Systems involving curved submerged surfaces are analysed by considering the horizontal and vertical components of the resultant force.

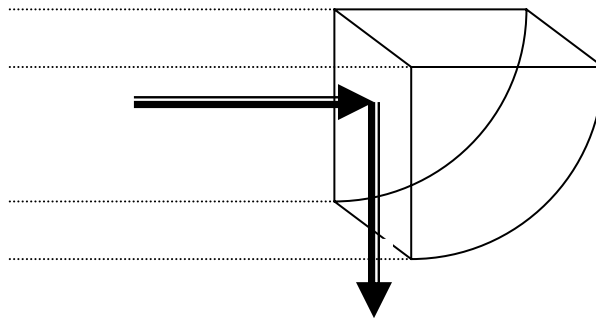
1. The vertical component of the force is due to the weight of the fluid supported and acts through the centre of gravity of the fluid volume.

$$\text{i.e. } F_v = \rho g \text{ Vol} \quad (1.13)$$

2. The horizontal component of the force is equal to the normal force on the vertical projection of the surface.

The force acts through the centre of gravity of the vertical projection.

$$\text{i.e. } F_H = \rho g h_c A \quad (1.14)$$



Curved surface = Area bounded by abcd

Vertical projection of abcd = cdef (Area A)

Fluid volume = volume bounded by abcdef

The resultant force F_R is given by:

$$F_R = \sqrt{F_H^2 + F_V^2} \quad (1.15)$$

And the angle of inclination (α) to the horizontal:

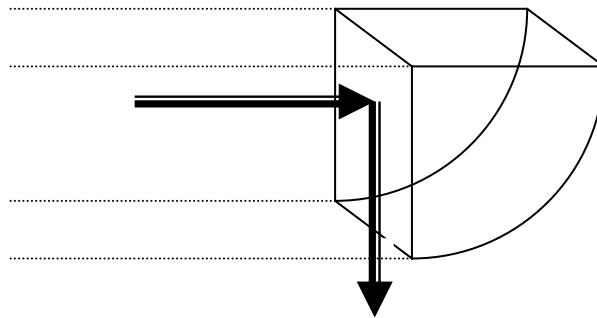
$$\tan \alpha = F_V/F_H \quad (1.16)$$

Worked Example 1.8

The sluice gate shown below consists of a quadrant of a circle of radius 1.5 m. If the gate is 3m wide and has a mass of 6000 kg acting 0.6 m to the right of the pivot (e-f), calculate:-

1. Magnitude and direction of the force exerted on the gate by the water pressure,
2. The turning moment required to open the gate.

Solution:



Horizontal component = Force on horizontal projected area.

$$F_H = \rho g h_c A = 1000 \times 9.81 \times 0.75 \times (3 \times 1.5) = 33.1 \times 10^3 \text{ N}$$

Vertical component = weight of fluid which would occupy

$$F_v = \rho g \times \text{vol of cylindrical sector} = (1000 \times 9.81) \times (3 \times \frac{\pi}{4} \times 1.5^2) = 52 \times 10^3 \text{ N}$$

Resultant force $\sqrt{\quad} \quad \sqrt{\quad}$

DON'T EAT YELLOW SNOW

What will your advice be?

Some advice just states the obvious. But to give the kind of advice that's going to make a real difference to your clients you've got to listen critically, dig beneath the surface, challenge assumptions and be credible and confident enough to make suggestions right from day one. At Grant Thornton you've got to be ready to kick start a career right at the heart of business.

Sound like you? Here's our advice: visit GrantThornton.ca/careers/students

Scan here to learn more about a career with Grant Thornton.

Grant Thornton
An instinct for growth™

© Grant Thornton LLP. A Canadian Member of Grant Thornton International Ltd



If α is the angle of inclination of R to the horizontal then

$$\tan \alpha = F_V/F_H = 52 \times 10^3/33.1 \times 10^3 \quad \text{i.e. } \alpha = 57.28^\circ$$

Since static pressure acts normal to the surface, it can be deduced that the line of action of F_R passes through the centre of curvature.

So the only force providing a moment is the weight of the gate.

Hence;

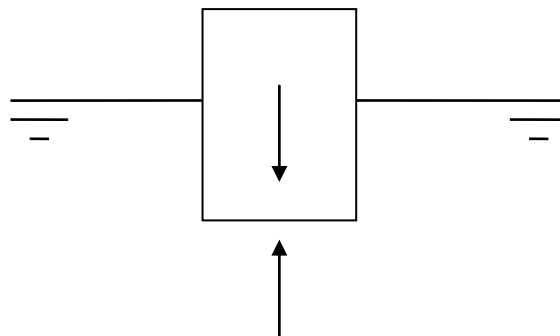
$$\text{Moment} = \text{Force} \times \text{distance} = 6000 \times 9.81 \times 0.6 = 35300 \text{ Nm}$$

1.7 Buoyancy

The buoyancy of a body immersed in a fluid is that property which will determine whether the body will sink, rise or float. Archimedes established the analysis over 2000 years ago. Archimedes reasoned that the volume of an irregular solid could be found by determining the apparent loss of weight when the body is totally immersed in a liquid of known density.

Archimedes principle states:-

1. *“The upthrust (vertical force) experienced by a body immersed in a fluid equals the weight of the displaced fluid”*
2. *“A floating body displaces its own weight in the fluid in which it floats”.*



Upthrust

$$F = \text{Pressure} \times \text{Area}$$

$$= P \times A$$

But $P = \rho \cdot g \cdot h$

Therefore, $F = \rho \cdot g \cdot h \cdot A$

But the volume $V_L = h \cdot A$

Therefore, $F = \rho \cdot g \cdot V_L$ (1.17)

Buoyant force can be expressed as:

$$F(b) = W(\text{air}) - W(\text{liquid}) = d \times g \times V_L$$

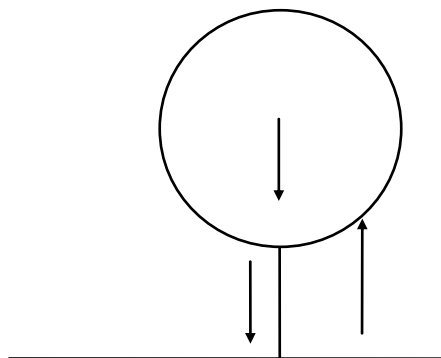
where d is the density of the liquid, g is the acceleration of gravity and v is the volume of the immersed object (or the immersed part of the body if it floats). Since $W=mg$, the apparent change in mass when submerged is

$$m - m(\text{apparent}) = d(\text{liquid}) \times v_L$$

Worked Example 1.9

A hydrogen filled balloon has a total weight force of 9.5 kN. If the tension in the mooring cable anchoring the balloon to the ground is 15.75 kN, determine the upthrust experienced by the balloon and its volume.

Take the density of air as 1.23 kg/m^3 .

Solution:

Since the system is stable: Upthrust = Weight force + Tension in cable


$$\begin{aligned}
 F &= W + T \\
 &= 9.5 + 15.75 \\
 &= 25.25 \text{ kN}
 \end{aligned}$$

The Upthrust is $F = \rho \times V_L \times g$

Since the upthrust = the weight of displaced fluid, Therefore Balloon Volume

Worked Example 1.10

A model boat consists of open topped rectangular metal can containing sand as a ballast. If the can has a width of 100 mm, a length of 500 mm, and a mass of 1 kg, determine the mass of sand (kg) required for the can to be immersed to a depth of 250 mm in sea water (RD = 1.03).

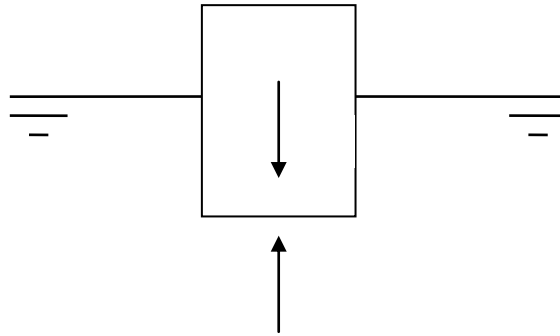
.....Alcatel-Lucent 

www.alcatel-lucent.com/careers

What if you could build your future and create the future?

One generation's transformation is the next's status quo. In the near future, people may soon think it's strange that devices ever had to be "plugged in." To obtain that status, there needs to be "The Shift".



Solution:

Displaced volume $V_L = W \times D \times L = 0.1 \times 0.25 \times 0.5 = 0.0125 \text{ m}^3$

For stable condition – Upthrust = weight force or $F = W$

The Upthrust due to Buoyancy = $\rho_{\text{seawater}} g V_L$

The total weight = $(m_{\text{can}} + m_{\text{sand}}) \times 9.81$

Therefore: $\rho_{\text{seawater}} g V_L = (m_{\text{can}} + m_{\text{sand}}) \times 9.81$

$1030 \times 9.81 \times 0.0125 = (1.0 + m_{\text{sand}}) \times 9.81$

Solving $m_{\text{sand}} = 11.87 \text{ kg}$

Note: The sand will need to be levelled off or the can will not float vertically and may even be unstable.

1.8 Stability of floating bodies

A body is in a **stable** equilibrium if it returns to its original position after being slightly displaced. Neutral position if the object remains in the new position after being slightly displaced. A body is in an **unstable** equilibrium if it continues to move in the direction of the displacement.

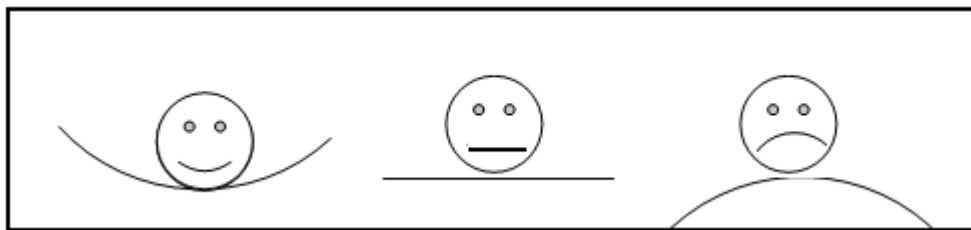


Figure 1.6 Stability of floating objects

If the **Centre of Buoyancy (B)** is defined as the centre of gravity of the displaced fluid then the stability of a floating object will depend on whether a righting or overturning moment is developed when the centre of gravity (G) and the centre of buoyancy move out of vertical alignment due to the shifting of the position of the latter. The centre of buoyancy moves because if a floating body tips, the shape of the displaced liquid changes.

Position (a) Figure 1.7, illustrates a stable condition, where the forces of Buoyancy thrust and the weight are equal and in line; while in Figure 1.7 (b) the body has been tipped over and the buoyancy has a new position B, with G unchanged. The vertical through the new centre of buoyancy cuts the original line, which is still passing through G at M, a point known as the **Metacentre**. In this case M lies above G, and stability exists.

If M lies below G (c), it can be shown that once the body is tipped the couple introduced will aggravate the rolling, causing it to tip further away from its stable position. The body is said to be unstable. Therefore, for stability the metacentre must be above the centre of gravity, i.e. M above G.

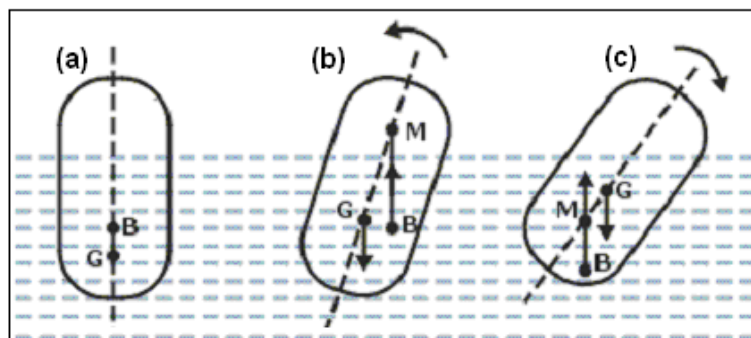



Figure 1.7 Buoyancy and the metacentre

Worked Example 1.11

A raft floating in a river, supported by two drums, each 1m in diameter and 5m long.

If the raft is to stay afloat by 0.25m clear above water. What is the maximum weight that is allowed on it? Assume density of water 1000 kg/m^3 .

**Solution:**

The above case can be solved by first, calculating the displaced volume, converts it into a weight, and then apply Archimedes' principle

$$F_b = \rho g V_L$$



Join the best at
the Maastricht University
School of Business and
Economics!

Top master's programmes

- 33rd place Financial Times worldwide ranking: MSc International Business
- 1st place: MSc International Business
- 1st place: MSc Financial Economics
- 2nd place: MSc Management of Learning
- 2nd place: MSc Economics
- 2nd place: MSc Econometrics and Operations Research
- 2nd place: MSc Global Supply Chain Management and Change

Sources: Keuzegids Master ranking 2013; Elsevier 'Beste Studies' ranking 2012; Financial Times Global Masters in Management ranking 2012

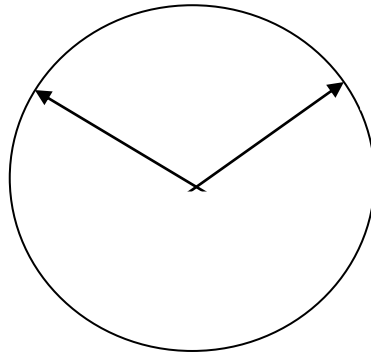
Maastricht University is the best specialist university in the Netherlands
(Elsevier)

Visit us and find out why we are the best!
Master's Open Day: 22 February 2014

www.mastersopenday.nl



Click on the ad to read more



The angle AOC is calculated

$$\cos(\text{AOC}) = 0.25/0.5$$

Hence angle AOC = 1.047 rad.

$$\text{Area of sector} = \text{OC}^2 \times \text{angle} = 0.5^2 \times 1.047$$

$$= 0.262 \text{ m}^2$$

Area of triangle AOC

$$\frac{1}{2} \times \text{base} \times \text{height}$$

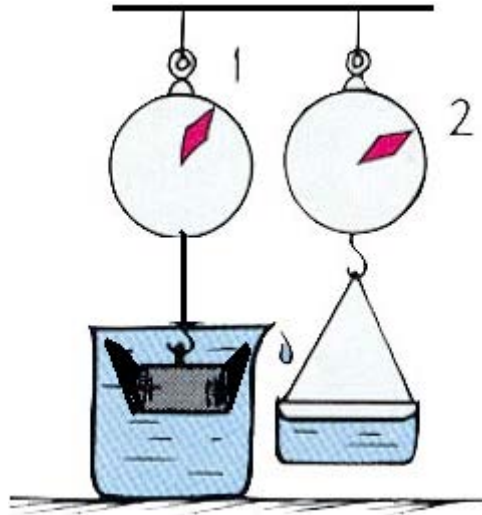
$$\text{Area submerged} = 2 (0.262 - 0.108) = 0.308 \text{ m}^2$$

$$\text{Volume displaced} = 0.308 \times 5 = 1.54 \text{ m}^3$$

$$\text{Weight} = \text{Density} \times \text{Volume displaced} = 1000 \times 1.54 = 1540 \text{ kg}$$

Worked Example 1.12

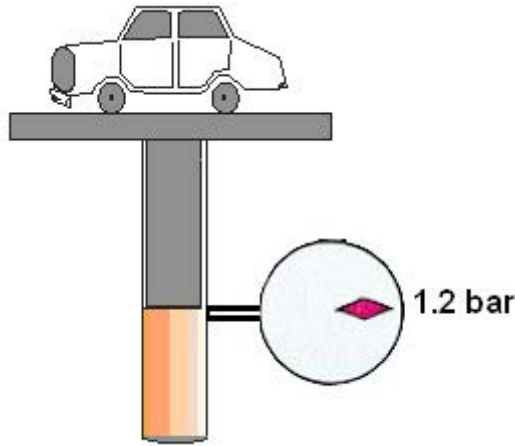
King Hero ordered a new crown to be made from pure gold (density = 19200 kg/m^3). When he received the crown he suspected that other metals may have been used in the construction. Archimedes discovered that the crown needed a force of 20.91 N to suspend when submersed in water and that it displaced $3.1 \times 10^{-4} \text{ m}^3$ of water. He concluded that the crown could not be pure gold. Do you agree or disagree?

**Solution:**

The density of pure gold (19200 kg/m^3) is more than twice this, so some other metal have been used, such metal as steel. So agreed with Archimedes

Worked Example 1.13

The hydraulic jack shown, the piston weighs 1000 N, determine the weight of the car which is supported by the jack when the gauge reading is 1.2 bar. Assume that the jack cylinder has a diameter of 0.4 m.



BI NORWEGIAN BUSINESS SCHOOL

EFMD EQUIS ACCREDITED

Empowering People. Improving Business.

BI Norwegian Business School is one of Europe's largest business schools welcoming more than 20,000 students. Our programmes provide a stimulating and multi-cultural learning environment with an international outlook ultimately providing students with professional skills to meet the increasing needs of businesses.

BI offers four different two-year, full-time Master of Science (MSc) programmes that are taught entirely in English and have been designed to provide professional skills to meet the increasing need of businesses. The MSc programmes provide a stimulating and multi-cultural learning environment to give you the best platform to launch into your career.

- MSc in Business
- MSc in Financial Economics
- MSc in Strategic Marketing Management
- MSc in Leadership and Organisational Psychology

www.bi.edu/master



Solution:**1.9 Tutorial problems**

- 1.1 Show that the kinematic viscosity has the primary dimensions of L^2T^{-1} .
- 1.2 In a fluid the velocity measured at a distance of 75mm from the boundary is 1.125m/s. The fluid has absolute viscosity 0.048 Pa s and relative density 0.913. What is the velocity gradient and shear stress at the boundary assuming a linear velocity distribution? Determine its kinematic viscosity.

[Ans: 15 s^{-1} , 0.72Pa.s; $5.257 \times 10^{-5}\text{ m}^2/\text{s}$]

- 1.3 A dead-weight tester is used to calibrate a pressure transducer by the use of known weights placed on a piston hence pressurizing the hydraulic oil contained. If the diameter of the piston is 10 mm, determine the required weight to create a pressure of 2 bars.

[Ans: 1.6 kg]

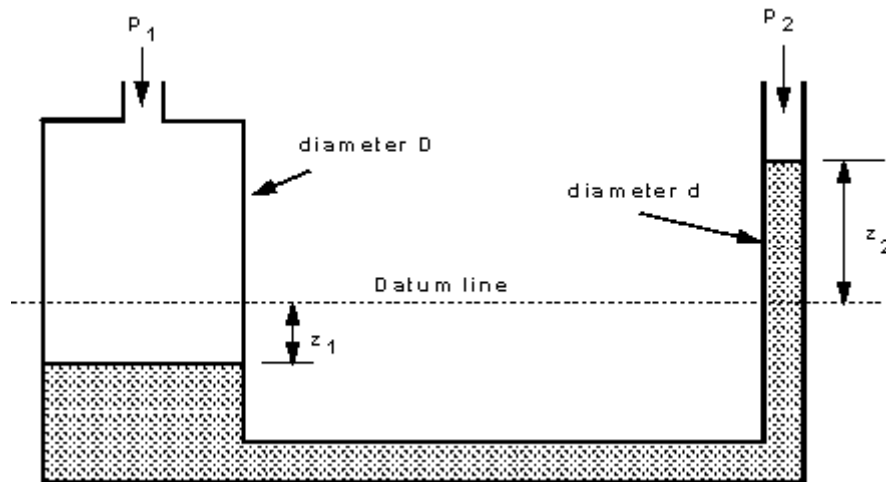
- 1.4 How deep can a diver descend in ocean water without damaging his watch, which will withstand an absolute pressure of 5.5 bar?

Take the density of ocean water, = $1025\text{ kg}/\text{m}^3$.

[Ans: 44.75 m]

- 1.5 The U-tube manometer shown below, prove that the difference in pressure is given by:

$$P_1 - P_2 = \rho \cdot g \cdot z_2 \left[1 + \left(\frac{d}{D} \right)^2 \right]$$



- 1.6 A flat circular plate, 1.25 m diameter is immersed in sewage water (density 1200 kg/m³) such that its greatest and least depths are 1.50 m and 0.60 m respectively. Determine the force exerted on one face by the water pressure,

[Ans: (15180 N)]



- 1.7 A rectangular block of wood, floats with one face horizontal in a fluid (RD = 0.9). The wood's density is 750 kg/m³. Determine the percentage of the wood, which is not submerged.

[Ans: 17%]

- 1.8 An empty balloon and its equipment weight 50 kg, is inflated to a diameter of 6m, with a gas of density 0.6 kg/m³. What is the maximum weight of cargo that can be lifted on this balloon, if air density is assumed constant at 1.2 kg/m³?

[Ans: 17.86 kg]

2 Internal Fluid Flow



Need help with your dissertation?

Get in-depth feedback & advice from experts in your topic area. Find out what you can do to improve the quality of your dissertation!

Get Help Now



Go to www.helpmyassignment.co.uk for more info



Helpmyassignment



Click on the ad to read more

2.1 Definitions

Fluid Dynamics

The study of fluids in motion.

Static Pressure

The pressure at a given point exerted by the static head of the fluid present directly above that point. Static pressure is related to motion on a molecular scale.

Dynamic or Velocity Pressure

Dynamic pressure is related to fluid motion on a large scale i.e. fluid velocity.

Stagnation Pressure Total Pressure

The sum of the static pressure plus the dynamic pressure of a fluid at a point.

Streamline

An imaginary line in a moving fluid across which, at any instant, no fluid is flowing. ie it indicates the instantaneous direction of the flow.

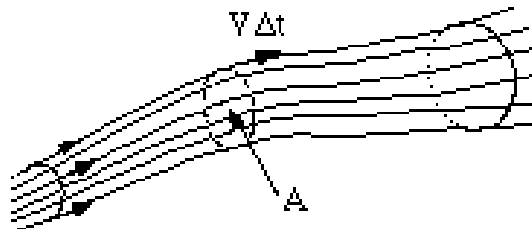


Figure 2.1 the stream tube

Stream tube

A 'bundle' of neighbouring streamlines may be imagined to form a stream tube (not necessarily circular) through which the fluid flows.

Control volume

A fixed volume in space through which a fluid is continuously flowing. The boundary of a control volume is termed the *control surface*. The size and shape is entirely arbitrary and normally chosen such that it encloses part of the flow of particular interest.

Classification of Fluid behaviour

a) Steady or unsteady

A flow is termed steady if its properties do not vary with time.

A flow is termed unsteady if properties at a given point vary with time.

Quasi-steady flow is essentially unsteady but its properties change sufficiently slowly with respect to time, at a given point, that a series of steady state solutions will approximately represent the flow.

b) Uniform or Non-uniform

A uniform flow is one in which properties do not vary from point to point over a given cross-section.

Non-uniform flow has its properties changing with respect to space in a given cross-section.

c) One-dimensional or Multi-dimensional

One-dimensional flow, is one in which the direction and magnitude of the velocity at all points are identical. Variation of velocity in other directions is so small that they can be neglected. eg. flow of water in small bore pipe at low flow rates.

Two-dimensional flow is one in which the velocity has two main components.

Three-dimensional flow is one in which the flow velocity has significant components in all three directions.

d) Viscid or Inviscid

This some time distinguished as Viscid and inviscid flow in relation to the viscous forces whether they are neglected or taken into account

e) Compressible or Incompressible

If the changes in density are relatively small, the fluid is said to be incompressible. If the changes in density are appreciable, in case of the fluid being subjected to relatively high pressures, the fluid has to be treated as Compressible.

f) Ideal or Real

An ideal fluid is both inviscid and incompressible. This definition is useful in forming analytical solution to fluid flow problems.

Fluids in reality are viscous and compressible. Thus, the effect of compressibility and viscosity must be considered for accurate analysis. It must be stressed that in most common engineering applications at standard pressure and temperature, water can be assumed incompressible and inviscid. The assumption of ideal fluid can help to formulate a solution, an approximate solution, still better than no solution.

2.2 Conservation of Mass

The *continuity equation* applies the principle of conservation of mass to fluid flow. Consider a fluid flowing through a fixed volume tank having one inlet and one outlet as shown below.

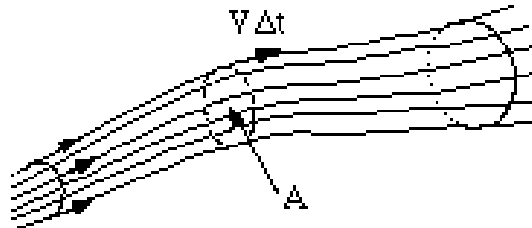


Figure 2.2 conservation of mass

If the flow is *steady* i.e no accumulation of fluid within the tank, then the rate of fluid flow at entry must be equal to the rate of fluid flow at exit for mass conservation. If, at entry (or exit) having a cross-sectional area A (m^2), a fluid parcel travels a distance dL in time dt , then the volume flow rate (V , m^3/s) is given by: $V = (A \cdot dL)/\Delta t$

but since $dL/\Delta t$ is the fluid velocity (v , m/s) we can write:

$$Q = V \times A$$

Brain power



By 2020, wind could provide one-tenth of our planet's electricity needs. Already today, SKF's innovative know-how is crucial to running a large proportion of the world's wind turbines.

Up to 25 % of the generating costs relate to maintenance. These can be reduced dramatically thanks to our systems for on-line condition monitoring and automatic lubrication. We help make it more economical to create cleaner, cheaper energy out of thin air.

By sharing our experience, expertise, and creativity, industries can boost performance beyond expectations. Therefore we need the best employees who can meet this challenge!

The Power of Knowledge Engineering

Plug into The Power of Knowledge Engineering.
Visit us at www.skf.com/knowledge



The mass flow rate (m , kg/s) is given by the product of density and volume flow rate

$$\text{i.e.} \quad m = \rho.Q = \rho.V.A$$

Between two points in flowing fluid for mass conservation we can write: $m_1 = m_2$

$$\text{or} \quad \rho_1 V_1 A_1 = \rho_2 V_2 A_2 \quad (2.1)$$

If the fluid is *incompressible* i.e. $\rho_1 = \rho_2$ then:

$$V_1 A_1 = V_2 A_2 \quad (2.2)$$

Hence an incompressible flow in a constant cross-section will have a constant velocity. For branched systems the continuity equation implies that the *sum* of the incoming fluid mass (or volume) flow rates must equal the *sum* of the outgoing mass (or volume) flow rates.

Worked Example 2.1

Air enters a compressor with a density of 1.2 kg/m^3 at a mean velocity of 4 m/s in the $6 \text{ cm} \times 6 \text{ cm}$ square inlet duct. Air is discharged from the compressor with a mean velocity of 3 m/s in a 5 cm diameter circular pipe. Determine the mass flow rate and the density at outlet.

Solution:

Given: $\rho_1 = 1.2 \text{ kg/m}^3$, $V_1 = 4 \text{ m/s}$, $V_2 = 3 \text{ m/s}$

$$A_1 = 0.06 \times 0.06 = 0.0036 \text{ m}^2$$

$$A_2 = A_2 = \frac{\pi D^2}{4} = \frac{3.142 \times 0.05^2}{4} = 0.00196 \text{ m}^2$$

The mass flow rate is:

$$m = \rho_1 A_1 V_1$$

$$= 1.2 \times 0.0036 \times 4$$

$$= 17.28 \times 10^{-3} \text{ kg/s}$$

Conservation of mass between sections 1 and 2 implies that:

$$\rho_1 A_1 V_1 = \rho_2 A_2 V_2$$

Hence the density at section 2 is calculated:

$$\rho_2 = \frac{\rho_1 A_1 V_1}{A_2 V_2}$$

2.3 Conservation of Energy

There are three forms of non-thermal energy for a fluid at any given point:-

The **kinetic energy** due to the motion of the fluid.

The **potential energy** due to the positional elevation above a datum.

The **pressure energy**, due to the absolute pressure of the fluid at that point.

Conservation of energy necessitates that the total energy of the fluid remains constant, however, there can be transformation from one form to another.

If all energy terms are written in the form of the **head** (potential energy), ie in metres of the fluid, then:

$\frac{p}{\rho g}$ represents the pressure head (sometimes known as ‘flow work’)

$\frac{V^2}{2g}$ represents the velocity head (also known as kinetic energy)

The energy conservation, thus, implies that between any two points in a fluid

$$\frac{p_1}{\rho g} + \frac{V_1^2}{2g} + z_1 = \frac{p_2}{\rho g} + \frac{V_2^2}{2g} + z_2 \tag{2.3a}$$

This equation is known as the **Bernoulli equation** and is valid if the two points of interest 1 & 2 are very close to each other and there is no loss of energy.

In a real situation, the flow will suffer a loss of energy due to friction and obstruction between stations 1 & 2, hence

$$\frac{p_1}{\rho g} + \frac{V_1^2}{2g} + z_1 = \frac{p_2}{\rho g} + \frac{V_2^2}{2g} + z_2 + h_L \tag{2.3b}$$

where h_L is the loss of energy between the two stations.

Solution:



Bernoulli equation: — — — —

Given: $v_1 = 0$ (Datum) $z_2 = 4.5$ m. $p_1 = p_2$ (both atmospheric). The energy equation reduces to:

— —

$$\sqrt{\quad} \quad \sqrt{\quad}$$

From continuity equation: — —

Hence

—

$$\sqrt{\frac{\quad}{\quad}}$$

2.4 Flow Measurement

There are a large number of devices for measuring fluid flow rates to suit different applications. Three of the most commonly encountered *restriction* methods will be presented here.

Restriction methods of fluid flow are based on the acceleration or deceleration of the fluid through some kind of nozzle, throat or *vena contracta*.

The theoretical analysis applies the continuity and Bernoulli equations to an ideal fluid flow between points 1 and 2 thus:-

Start with Bernoulli equation:
$$\frac{p_1}{\rho g} + \frac{v_1^2}{2g} + z_1 = \frac{p_2}{\rho g} + \frac{v_2^2}{2g} + z_2$$

Rearranging

Then use the continuity equation
$$V_1 A_1 = V_2 A_2$$

Therefore
$$(V_1/V_2)^2 = (A_2/A_1)^2$$

Substituting into the rearranged Bernoulli equation and solving for V_2 we have:-

$$\sqrt{\frac{2g(z_1 - z_2)}{1 - (A_2/A_1)^2}} \tag{2.4}$$

The theoretical volume flow rate is
$$Q = A_2 V_2$$

And the theoretical mass flow rate is
$$\dot{m} = \rho A_2 V_2$$

The above values are theoretical because *ideal* fluid flow conditions were assumed. Actual flow rate values are obtained by multiplying the theoretical values by a meter discharge coefficient C_d to account for frictional and obstruction losses encountered by the fluid in its passage through the meter. The energy losses manifest themselves as a greater pressure drop ($P_1 - P_2$) than that predicted by the theory.

It can be shown that
$$\sqrt{\frac{2g(z_1 - z_2)}{1 - (A_2/A_1)^2}} \tag{2.5}$$

(a) The Venturi meter

The Venturi meter has a converging section from the initial pipe diameter down to a throat, followed by a diverging section back to the original pipe diameter. See figure.

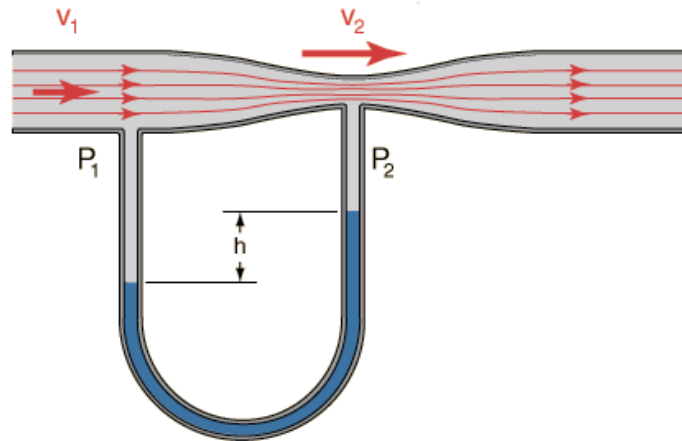


Figure 2.2 the Venturi tube

Differential pressure measurements are taken between the inlet (1) and throat (2) positions. The geometry of the meter is designed to minimize energy losses ($C_d > 0.95$).

“I studied English for 16 years but...
...I finally learned to speak it in just six lessons”
Jane, Chinese architect

ENGLISH OUT THERE

Click to hear me talking before and after my unique course download

(b) The Orifice meter

An orifice meter is a flat plate, with a hole which may be square edged or bevelled, inserted between two flanges in a pipe line. In this instance positions (1) and (2) are as shown below. Orifice plates have a simple construction and are therefore inexpensive but they suffer from high energy losses ($C_d = 0.6$).

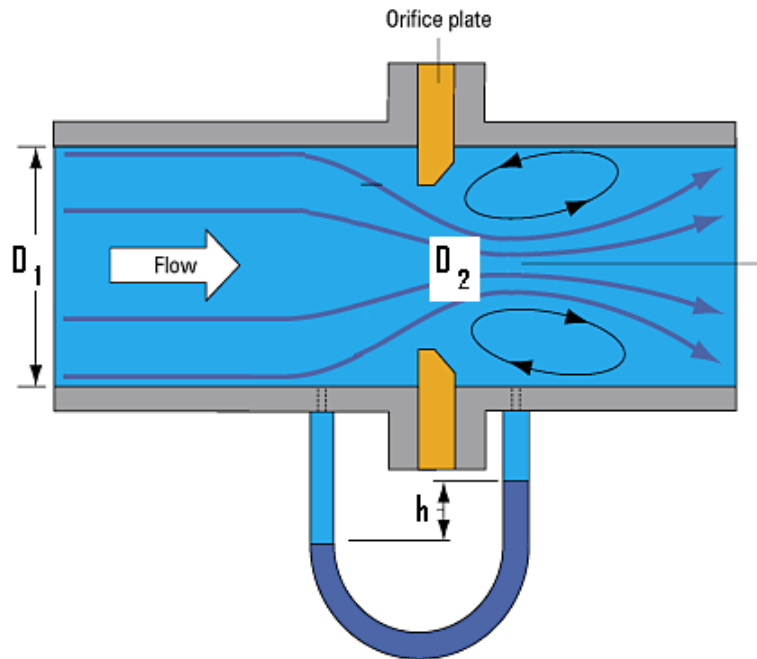


Figure 2.3 the Orifice meter

(c) The Pitot-static tube

A slender concentric tube arrangement, aligned with the flow, used to measure flow velocity by means of a pressure difference. See figure below. The outer tube is closed in the flow direction but has sidewall holes to enable the measurement of static pressure. The inner tube is open in the direction of the fluid flow and is thus experiencing the total (static + dynamic) pressure of the fluid flow. It is assumed that the fluid velocity is rapidly brought to zero upon entry to the inner tube with negligible friction ($C_d \sim 1$). The pressure difference between the tubes is applied to a U tube manometer which will therefore indicate the velocity pressure.

Start with Bernoulli equation:
$$\frac{p_1}{\rho g} + \frac{v_1^2}{2g} + z_1 = \frac{p_2}{\rho g} + \frac{v_2^2}{2g} + z_2$$

Since the Pitot-static tube is mounted horizontally, the z-terms will cancel out, and the static end is motionless, i.e. $v_2 = 0$. It can be shown that the duct velocity V_1 is given by:-

$$\sqrt{\frac{2(p_1 - p_2)}{\rho}} \quad \sqrt{\frac{2\rho g h}{\rho}} \tag{2.6}$$

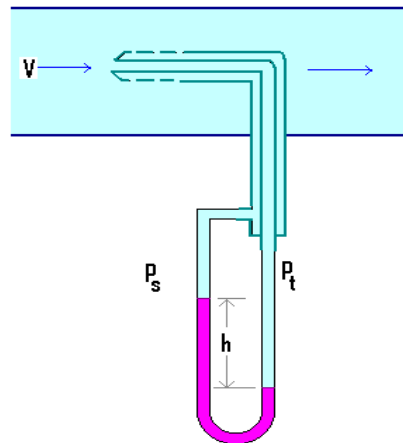


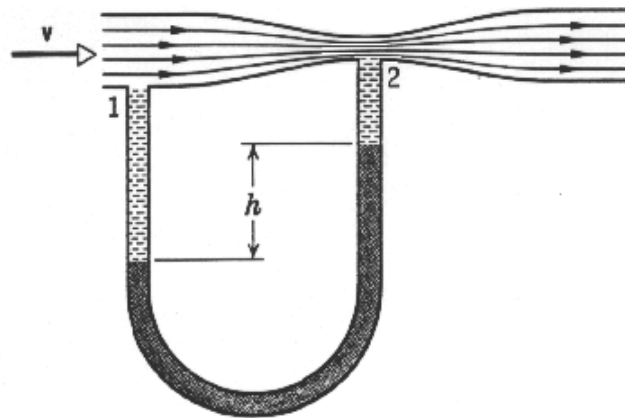
Figure 2.4 Pitot-static tube

Worked Example 2.3

A Venturi meter fitted in a 15 cm pipeline has a throat diameter of 7.5 cm. The pipe carries water, and a U-tube manometer mounted across the Venturi has a reading of 95.2 mm of mercury. Determine:

1. the pressure drop in **Pascal's**, indicated by the manometer
2. the **ideal** throat velocity (m/s)
3. the **actual** flow rate (l/s) if the meter C_d is 0.975.

Solution:



$$(i) \quad p_1 - p_2 = \rho_m \times g \times h$$

$$= 13600 \times 9.81 \times 0.0952 = 12701 \text{ Pa}$$

$$(ii) \quad v_2 = \sqrt{\frac{2(p_1 - p_2)}{\rho[1 - (A_2 / A_1)^2]}} = \sqrt{\frac{2(12701)}{1000[1 - (0.0629)^2]}} = 5.206 \text{ m / s}$$

$$\begin{aligned}
 \text{(iii)} \quad Q &= C_d V_2 A_2 \\
 &= 0.975 \times 5.206 \times 0.00441 \\
 &= 0.0224 \text{ m}^3/\text{s} = 22.4 \text{ l/s}
 \end{aligned}$$

2.5 Flow Regimes

Consider the variation in velocity across the cross-section of a pipe containing a fluid in motion. There is no motion of fluid in direct contact with the pipe wall, and the velocity of the fluid stream increases in a direction away from the walls of the pipe. In 1839, Hagen (USA) observed that the fluid moves in layers with a velocity gradient. He observed that the velocity gradient in a circular pipe follows a parabolic law, at low flow rates. This type of flow is termed **LAMINAR**.

When the flow rate of the fluid stream is high, the velocity distribution had a much flatter shape and this type of flow is known as **TURBULENT**.

The average velocity producing turbulent flow is greater than that for a laminar flow of a given fluid in a given duct.



What do you want to do?

No matter what you want out of your future career, an employer with a broad range of operations in a load of countries will always be the ticket. Working within the Volvo Group means more than 100,000 friends and colleagues in more than 185 countries all over the world. We offer graduates great career opportunities – check out the Career section at our web site www.volvogroup.com. We look forward to getting to know you!

VOLVO
 AB Volvo (publ)
www.volvogroup.com

VOLVO TRUCKS | RENAULT TRUCKS | MACK TRUCKS | VOLVO BUSES | VOLVO CONSTRUCTION EQUIPMENT | VOLVO PENTA | VOLVO AERO | VOLVO IT
 VOLVO FINANCIAL SERVICES | VOLVO 3P | VOLVO POWERTRAIN | VOLVO PARTS | VOLVO TECHNOLOGY | VOLVO LOGISTICS | BUSINESS AREA ASIA

For both flows, the build-up of velocity is along the radius of the pipe, and the maximum velocity occurs at the centre line.

Osborne Reynolds demonstrated experimentally in 1883 (Manchester) that under laminar flow, the fluid streamlines remain parallel. This was shown with the aid of a dye filament injected in the flow which remained intact at low flow velocities in the tube. As the flow velocity was increased (via a control valve), a point was reached at which the dye filament at first began to oscillate then broke up so that the colour was diffused over the whole cross-section indicating that particles of fluid no longer moved in an orderly manner but occupied different relative positions in successive cross-sections downstream.

Reynolds also found that it was not only the average pipe velocity V which determined whether the flow was laminar or turbulent, but that the density (ρ) and viscosity (μ) of the fluid and the pipe diameter (D), also determined the flow regime. He proposed that the criterion which determined the type of regime was the dimensionless group ($\rho v D / \mu$). This group has been named the **Reynolds number** (Re) as a tribute to his contribution to Fluid Mechanics.

$$Re = \rho V D / \mu \quad (2.7)$$

Based on Reynolds number the flow can be distinguished into three regimes for pipe flow:

Laminar if $Re < 2000$

Transitional if $2000 < Re < 4000$

Turbulent if $Re > 4000$

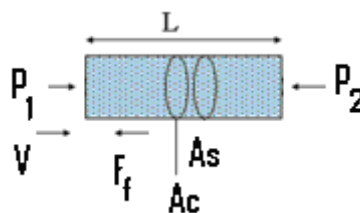
$Re = 2000, 4000$ are the lower and upper critical values.

2.6 Darcy Formula

Consider a duct of length L , cross-sectional area A_c , surface area A_s , in which a fluid of density, is flowing at mean velocity V .

The forces acting on a segment of the duct are that due to pressure difference and that due to friction at the walls in contact with the fluid.

If the acceleration of the fluid is zero, the net forces acting on the element must be zero, hence



According to Newton's Second Law of Motion for a constant velocity flow:

$$\sum F = 0$$

The force due to pressure on either side of the section is equal to the friction force resisting the flow:

$$(P_1 - P_2) \cdot A_c - (f \rho V^2/2) \cdot A_s = 0$$

Where the pressures act normal to the flow direction on the area of cross-section A_c , and the frictional force acts on the circumferential wall area A_s , separating the fluid and the pipe's surface.

Let h_f denote the head lost (m) due to friction over a duct length L ,

$$\text{ie } p_1 - p_2 = \rho g h_f$$

Substituting we get

$$h_f = f \cdot (A_s/A_c) \cdot V^2/2g$$

For a pipe $A_s/A_c = \pi D L / \pi D^2/4 = 4L/D$

$$h_f = (4 fL/D) \cdot V^2/2g \quad (2.8)$$

This is known as Darcy formula.

2.7 The Friction factor and Moody diagram

The value of the friction factor (f) depends mainly on two parameters namely the value of the Reynolds number and the surface roughness.

For **laminar** flow (ie $Re < 2000$), the value of the friction factor is given by the following equation **irrespective of the nature of the surface**:

$$f = \frac{16}{Re} \quad (2.9)$$

While for a **smooth** pipe with **turbulent** (i.e. $Re > 4000$) flow, the friction factor is given by:

$$f = 0.079 Re^{0.25} \quad (\text{Blasius equation}) \quad (2.10)$$

For $Re > 2000$ and $Re < 4000$, this region is known as the critical zone and the value of the friction factor is uncertain and not quoted on the Moody diagram (Figure 2.5).

In the turbulent zone, if the surface of the pipe is not perfectly smooth, then the value of the friction factor has to be determined from the **Moody diagram**.

The **relative roughness (k/d)** is the ratio of the average height of the surface projections on the inside of the pipe (k) to the pipe diameter (D). In common with Reynolds number and friction factor this parameter is dimensionless. Values of k are tabled on the Moody chart for a sample of materials.

 **gaieteye**[®]
Challenge the way we run

**EXPERIENCE THE POWER OF
FULL ENGAGEMENT...**

.....

**RUN FASTER.
RUN LONGER..
RUN EASIER...**

**READ MORE & PRE-ORDER TODAY
WWW.GAITEYE.COM**

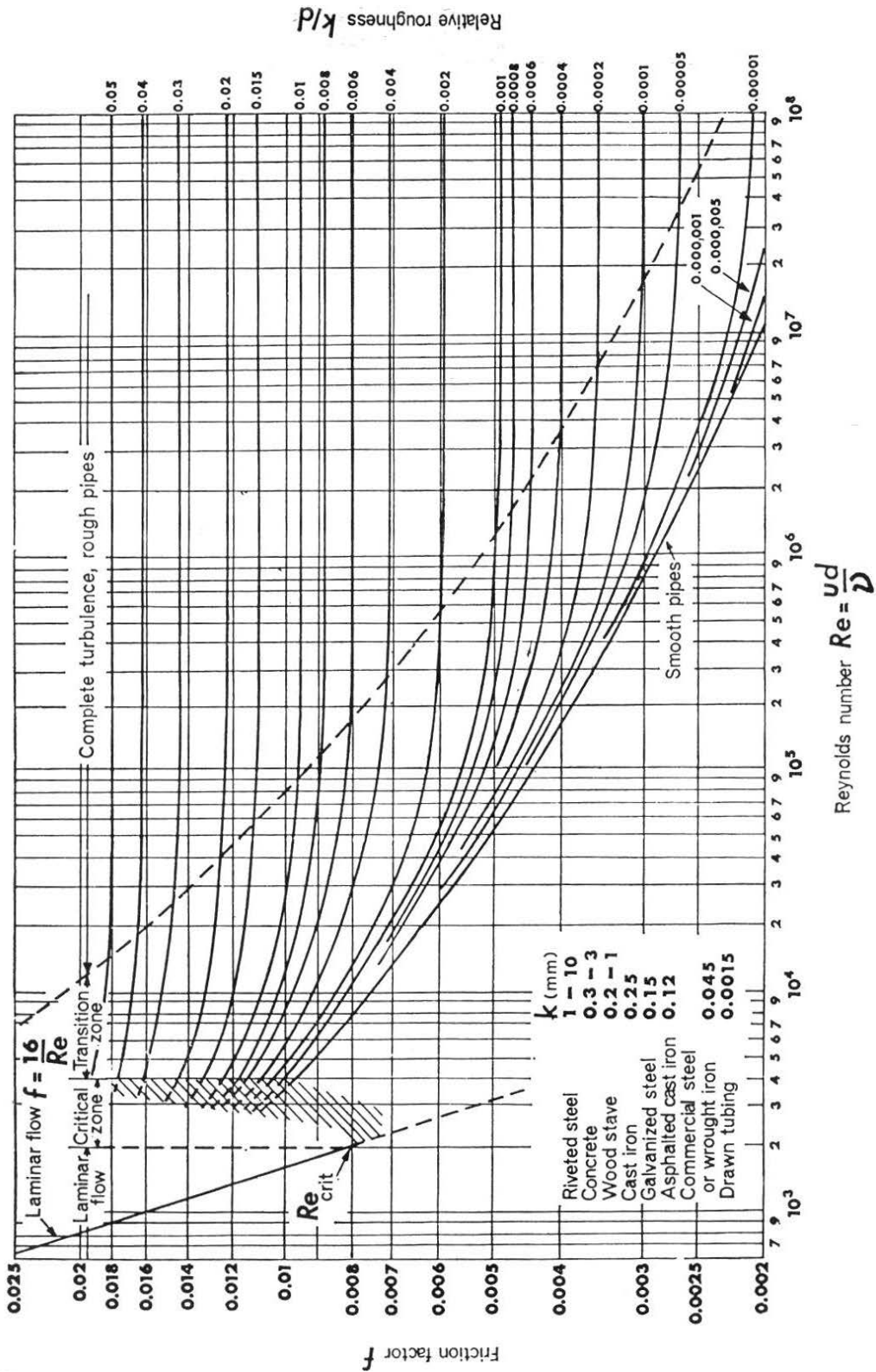


Figure 2.5 the Moody Chart/diagram

Worked Example 2.4

Water flows in a 40mm diameter commercial steel pipe ($k = 0.045 \times 10^{-3} \text{ m}$) at a rate of 1 litre/s. Determine the friction factor and head loss per metre length of pipe using:

1. The Moody diagram
2. Smooth pipe formulae. Compare the results.

Take: $\rho = 1000 \text{ kg/m}^3$, $\mu = 1 \times 10^{-3} \text{ kg/ms}$

Solution:

$$V = Q/A = 0.001 / (1.256 \times 10^{-3}) = 0.796 \text{ m}^2$$

$$\text{Re} = \rho V D / \mu$$

$$= 1000 \times 0.796 \times 0.04 / 1 \times 10^{-3} = 31840 \text{ i.e. turbulent}$$

1. Moody diagram

$$k/D = 0.045 \times 10^{-3} / 0.04 = 0.0011$$

From intersection of k/D and Re values on Moody diagram read off $f = 0.0065$

Therefore

— — — — —
 — — — — —

2. Using Blasius equation for smooth pipe:

— — — — —

i.e. 9% less than Moody.

Note that if the pipe is assumed smooth, the friction factor from the Moody diagram would be $f = 0.0058$ which is closer to the Blasius value.

2.8 Flow Obstruction Losses

When a pipe changes direction, changes diameter or has a valve or other fittings there will be a loss of energy due to the disturbance in flow. This loss of energy (h_o) is usually expressed by:

$$\text{---} \quad (2.11)$$

Where V is the mean velocity at entry to the fitting and K is an empirically determined factor. Typical values of K for different fittings are given in the table below:

This e-book
is made with
SetaPDF



SETASIGN

PDF components for PHP developers

www.setasign.com



| Obstruction | K |
|---------------------------------------|------|
| tank exit | 0.5 |
| tank entry | 1.0 |
| smooth bend | 0.30 |
| Mitre bend | 1.1 |
| Mitre bend with guide vanes | 0.2 |
| 90 degree elbow | 0.9 |
| 45 degree elbow | 0.42 |
| Standard T | 1.8 |
| Return bend | 2.2 |
| Strainer | 2.0 |
| Globe valve, wide open | 10.0 |
| Angle valve, wide open | 5.0 |
| Gate valve, wide open | 0.19 |
| ¾ open | 1.15 |
| ½ open | 5.6 |
| ¼ open | 24.0 |
| Sudden enlargement | 0.10 |
| Conical enlargement: 6° | 0.13 |
| (total included angle) 10° | 0.16 |
| 15° | 0.30 |
| 25° | 0.55 |
| Sudden contractions: | |
| area ratio 0.2 | 0.41 |
| (A ₂ /A ₁) 0.4 | 0.30 |
| 0.6 | 0.18 |
| 0.8 | 0.06 |

Table 2.1: Obstruction Losses in Flow Systems

2.9 Fluid Power

The fluid power available at a given point for a fluid is defined as the product of mass, acceleration due to gravity and the fluid head, and since the mass flow rate is defined as the volume flow rate multiplied by the fluid density, the Fluid power therefore can be expressed as:

$$P = \rho \cdot g \cdot Q \cdot h_{\text{tot}} \quad (2.12a)$$

For a **pump**, h_{tot} represents the head required to overcome pipe friction (h_f), obstruction losses (h_o) and to raise the fluid to any elevation required (h_z).

$$\text{ie } h_{\text{tot}} = h_z + h_f + h_o \quad (2.13a)$$

Note: If the delivery tank operates at pressure in excess of the supply tank an additional term (h_p) must be added to the required head equation as this pressure rise must also be supplied by the pump.

If the pump efficiency η_p is introduced, the actual pump head requirement is:

$$P = \rho \cdot g \cdot Q \cdot h_{\text{tot}} / \eta_p \quad (2.12b)$$

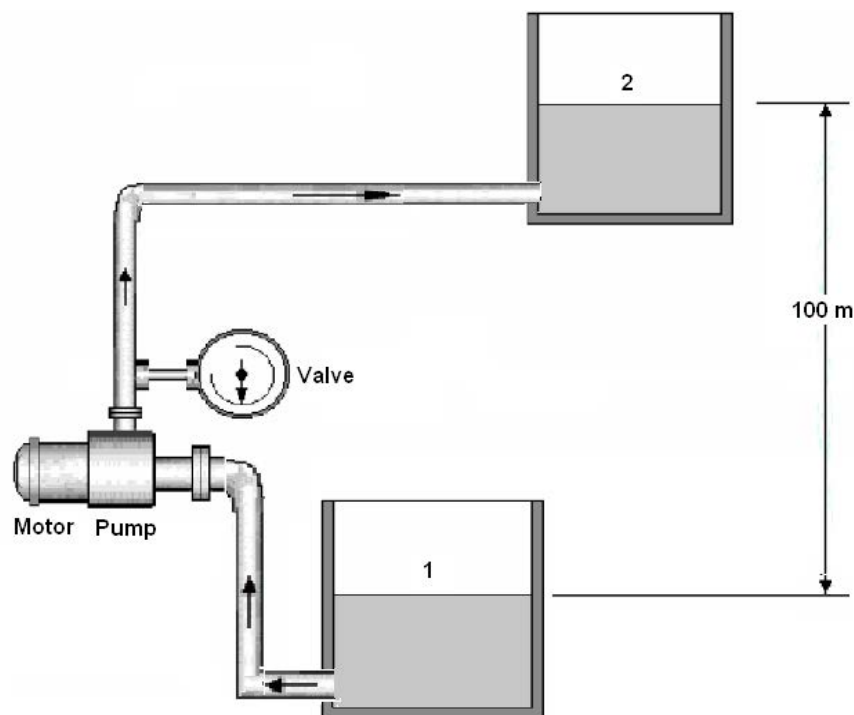
For a **turbine** with efficiency η_t , the power output is given by:

$$P = \rho \cdot g \cdot Q \cdot h_{\text{tot}} \cdot \eta_t \quad (2.12c)$$

$$\text{Where } h_{\text{tot}} = h_z - (h_f + h_o) \quad (2.13b)$$

Worked Example 2.5

Determine the input power to an electric motor ($\eta_m = 90\%$) supplying a pump ($\eta_p = 80\%$) delivering 50 l/s of water ($\rho = 1000 \text{ kg/m}^3$, $\mu = 0.001 \text{ kg/ms}$) from tank1 to tank 2 as shown below if the pipeline length is 200m long, of 150 mm diameter galvanised steel (assumed surface roughness $k=0.15\text{mm}$).



Solution:


Three bends (each $K=0.9$), tank entry ($k=0.5$), exit loss ($k=1$) and one valve ($k=5$)

Input power _____

Free eBook on Learning & Development

By the Chief Learning Officer of McKinsey

Download Now



Click on the ad to read more

2.10 Fluid Momentum

Knowledge of the forces exerted by moving fluids is important in the design of hydraulic machines and other constructions. The Continuity and Bernoulli relationships are not sufficient to solve forces acting on bodies in this case and the momentum principle derived from Newton's Laws of motion is also required.

Momentum is defined as the product of mass and velocity, and represents the energy of motion stored in the system. Momentum is a vector quantity and can only be defined by specifying its direction as well as magnitude.

Newton's Second Law of Motion

“The rate of change of momentum is proportional to the net force acting, and takes place in the direction of that force”.

$$\text{i.e. } F = \frac{dM}{dt} \quad (2.14)$$

Since $M = m \cdot V$

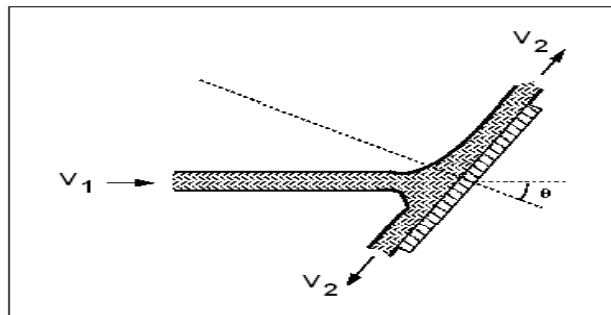
— — —

Newton's Third Law of Motion

“To every action there is a reaction equal in magnitude and opposite in direction”.

Application of Momentum Equation

Consider horizontal jet impinging a surface tangentially at a steady state.



— — —

Resolving horizontally we have for the x-component

—

Resolving vertically we have for the y-component

The resultant force acting on the solid surface due to the jet is given by

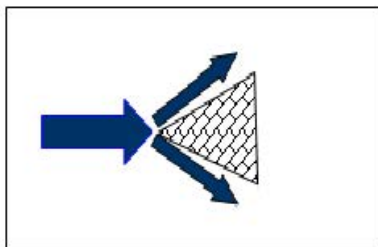
$$\sqrt{\quad}$$

If smooth, then $k = 1$ and

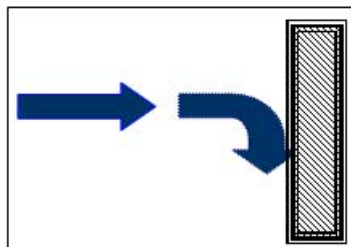
$$F_x = \rho A V_1^2 (1 - \cos \theta), F_y = \rho A V_1^2 \sin \theta$$

Special cases:

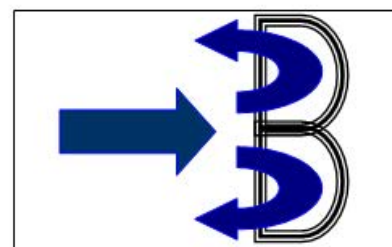
The angle of the striking jet has a very important effect on the force, 3 different angles are illustrated below:



Conical Wedge
 $\theta = 60^\circ, \cos \theta = 0.5$
 $F_x = -\frac{1}{2} \rho A V_1^2$



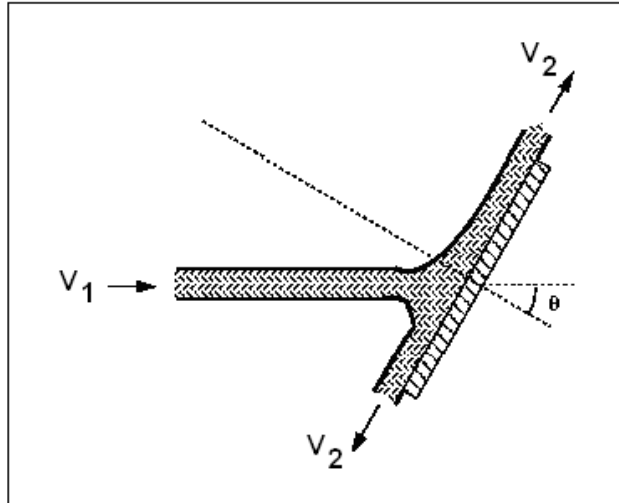
Flat Plate
 $\theta = 90^\circ, \cos \theta = 0$
 $F_x = -\rho A V_1^2$



Hemispherical Cup
 $\theta = 180^\circ, \cos \theta = -1$
 $F_x = -2 \rho A V_1^2$

Worked Example 2.6

A jet of water having a diameter of 7.5 cm and a velocity of 30 m/s strikes a stationary flat plate at angle $\theta = 30^\circ$ as shown below.



Determine the magnitude and direction of the resultant force on the plate assuming there is no friction between the jet and the plate. Take $\rho_{\text{water}} = 1000 \text{ kg/m}^3$.

www.sylvania.com

We do not reinvent the wheel we reinvent light.

Fascinating lighting offers an infinite spectrum of possibilities: Innovative technologies and new markets provide both opportunities and challenges. An environment in which your expertise is in high demand. Enjoy the supportive working atmosphere within our global group and benefit from international career paths. Implement sustainable ideas in close cooperation with other specialists and contribute to influencing our future. Come and join us in reinventing light every day.

Light is OSRAM

OSRAM SYLVANIA 

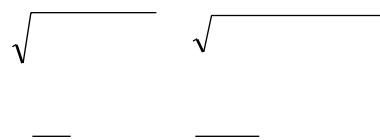
Solution:

$$A = 0.00442 \text{ m}^2$$

Smooth i.e. $k = 1$, $V_1 = V_2 = 30 \text{ m/s}$

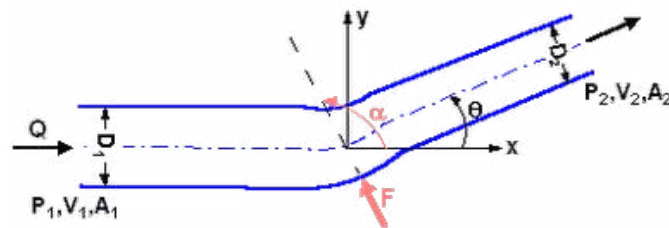
$$\begin{aligned} F_x &= \rho A V_1^2 (1 - \cos \theta) \\ &= 1000 \times 0.00442 \times 30^2 (1 - \cos 30) \\ &= 533 \text{ N} \end{aligned}$$

$$\begin{aligned} F_y &= \rho A V_1^2 \sin \theta \\ &= 1000 \times 0.00442 \times 30^2 \times \sin 30 \\ &= 1989 \text{ N} \end{aligned}$$



Flow forces on a Reducer Bend

The change of momentum of a fluid flowing through a pipe bend induces a force on the pipe.



The pressures are to be considered in this case since the reducer bend is part of flowing system which is not subjected to atmospheric conditions.

x – Momentum

$$-F_x + p_1 A_1 - p_2 A_2 \cos \theta = \rho \dot{V} (V_2 \cos \theta - V_1)$$

y – Momentum

$$-F_y + p_2 A_2 \sin \theta = \rho Q (-V_2 \sin \theta - 0)$$

The total force

$$\sqrt{\quad}$$

From continuity equation: $V_2 = V_1 \times \frac{A_1}{A_2}$

For $A_1 = A_2$ and $\theta = 90^\circ$

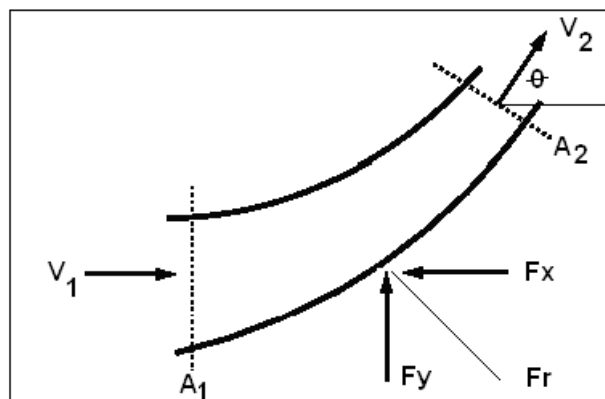
$$F = (2 \rho Q^2 (\rho V_1^2 + p_1 + p_2) + p_1^2 A_1^2 [1 - \left(\frac{p_1}{p_2}\right)^2])^{1/2}$$

The force acting at an angle $\theta_R = \tan^{-1} \left(\frac{F_y}{F_x} \right)$ with the x - axis

Worked Example 2.7

A bend in a horizontal pipeline reduces from 600 mm to 300 mm whilst being deflected through 60°. If the pressure at the larger section is 250 kPa, for a water flow rate of 800 l/s determine the magnitude and direction of the resulting force on the pipe.

Take $\rho_{\text{water}} = 1000 \text{ kg/m}^3$



Solution:

From Continuity

$$Q = V_1 A_1 \quad V_1 = 0.8 / 0.282 = 2.83 \text{ m/s}$$

$$Q = V_2 A_2 \quad V_2 = 0.8 / 0.07 = 11.42 \text{ m/s}$$

From Bernoulli equation:

—

From Momentum equation:

$$\begin{aligned}
 F_x &= p_1 A_1 - p_2 A_2 \cos \theta - \rho Q (V_2 \cos \theta - V_1) \\
 &= [250 \times 10^3 \times 0.282] - [188.8 \times 10^3 \times 0.07 \times 0.5] - [1000 \times 0.8((11.42 \times 0.5) - 2.83)] \\
 &= 61589.4 \text{ N}
 \end{aligned}$$

$$\begin{aligned}
 F_y &= p_2 A_2 \sin \theta - \rho Q (-V_2 \sin \theta - 0) \\
 &= [188.796 \times 10^3 \times 0.07 \times 0.866] - [1000 \times 0.8(-9.889)] = 19356 \text{ N}
 \end{aligned}$$

$$\sqrt{\quad} \quad \sqrt{\quad}$$

— —



Discover the truth at www.deloitte.ca/careers

Deloitte.

© Deloitte & Touche LLP and affiliated entities.

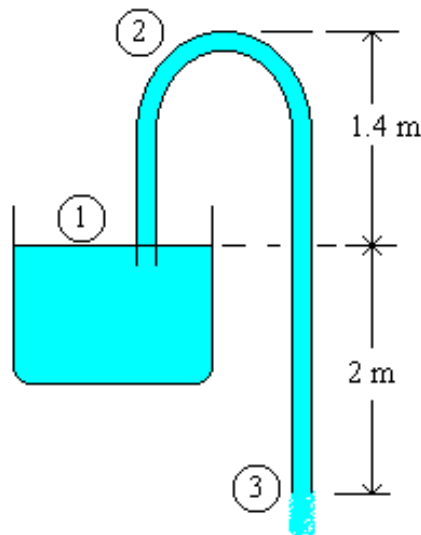


Click on the ad to read more

Worked Example 2.8

A siphon has a uniform circular bore of 75 mm diameter and consists of a bent pipe with its crest 1.4 m above water level and a discharge to the atmosphere at a level 2 m below water level. Find the velocity of flow, the discharge and the absolute pressure at crest level if the atmospheric pressure is 98.1 kN/m². Neglect losses due to friction.

Solution:



Bernoulli equation between 1-3:
$$\frac{p_1}{\rho g} + \frac{v_1^2}{2g} + z_1 = \frac{p_3}{\rho g} + \frac{v_3^2}{2g} + z_3$$

$z_1 = 2, z_3 = 0$ (level 3 is assumed datum). $p_1 = p_3$ (both atmospheric). And $V_1 = 0$

The energy equation reduces to:

$$\frac{v^2}{2g} = 2$$

The flow rate is calculated:

$$v = \sqrt{4g}$$

Applying Bernoulli equation between 1 and 2:

2.11 Tutorial Problems

- 2.1 A 20 mm diameter pipe forks, one branch being 10 mm in diameter and the other 15 mm in diameter. If the velocity in the 10 mm pipe is 0.3 m/s and that in the 15 mm pipe is 0.6 m/s, calculate the rate of flow in cm^3/s and velocity in m/s in the 20 mm diameter pipe.

(129.6 cm^3/s , 0.413 m/s)

- 2.2 Water at 36 m above sea level has a velocity of 18 m/s and a pressure of 350 kN/m^2 . Determine the potential, kinetic and pressure energy of the water in metres of head. Also determine the total head.

Ans (35.68 m, 16.5 m, 36 m, 88.2 m)

- 2.3 The air supply to an engine on a test bed passes down a 180 mm diameter pipe fitted with an orifice plate 90 mm diameter. The pressure drop across the orifice is 80 mm of paraffin. The coefficient of discharge of the orifice is 0.62 and the densities of air and paraffin are 1.2 kg/m^3 and 830 kg/m^3 respectively. Calculate the mass flow rate of air to the engine.

Ans (0.16 kg/s)

- 2.4 Determine the pressure loss in a 100 m long, 10 mm diameter smooth pipe if the flow velocity is 1 m/s for:

- air whose density 1.0 kg/m^3 and dynamic viscosity $1 \times 10^{-5} \text{Ns/m}^2$.
- water whose density 1000 kg/m^3 and dynamic viscosity $1 \times 10^{-3} \text{Ns/m}^2$.

Ans: (320 N/m^2 , 158 kN/m^2).

- 2.5 Determine the input power to an electric motor ($\eta_m = 90\%$) supplying a pump ($\eta_p = 90\%$) delivering 50 l/s of water ($\rho = 1000 \text{kg/m}^3$, $\mu = 0.001 \text{kg/ms}$) between two tanks with a difference in elevation of 50m if the pipeline length is 100m long in total of 150 mm diameter, assume a friction factor of 0.008 and neglect minor losses.

Ans: (33.6 kW).

- 2.6 A jet of water strikes a stationary flat plate “perpendicularly”, if the jet diameter is 7.5 cm and its velocity upon impact is 30 m/s, determine the magnitude and direction of the resultant force on the plate, neglect frictional effect and take water density as 1000 kg.m^3 .

Ans (3970 N)

- 2.7 A horizontally laid pipe carrying water has a sudden contraction in diameter from 0.4m to 0.2m respectively. The pressure across the reducer reads 300 kPa and 200 kPa respectively when the flow rate is $0.5 \text{ m}^3/\text{s}$. Determine the force exerted on the section due to the flow, assuming that friction losses are negligible.

Ans: (25.5 kN).

- 2.8 A siphon has a uniform circular bore of 75 mm diameter and consists of a bent pipe with its crest 1.8 m above water level and a discharge to the atmosphere at a level 3.6 m below water level. Find the velocity of flow, the discharge and the absolute pressure at crest level if the atmospheric pressure is 98.1 kN/m^2 . Neglect losses due to friction.

Ans ($0.0371 \text{ m}^3/\text{s}$, 45.1 kN/m^2)

SIMPLY CLEVER

ŠKODA



We will turn your CV into
an opportunity of a lifetime



Do you like cars? Would you like to be a part of a successful brand?
We will appreciate and reward both your enthusiasm and talent.
Send us your CV. You will be surprised where it can take you.

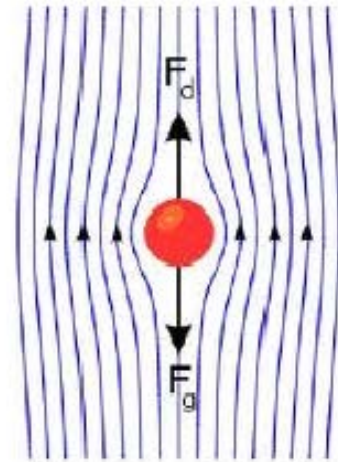
Send us your CV on
www.employerforlife.com



Click on the ad to read more

3 External Fluid Flow

| | |
|-----|--------------------------|
| 3.1 | Regimes of External Flow |
| 3.2 | Drag coefficient |
| 3.3 | The boundary layer |
| 3.4 | Worked examples |
| 3.5 | Tutorial problems |



3.1 Regimes of External Flow

Consider the external flow of real fluids. The potential flow and boundary layer theory makes it possible to treat an external flow problem as consisting broadly of two distinct regimes, that immediately adjacent to the body's surface, where viscosity is predominant and where frictional forces are generated, and that outside the boundary layer, where viscosity is neglected but velocities and pressure are affected by the physical presence of the body together with its associated boundary layer. In addition there is the stagnation point at the frontal of the body and there is the flow region behind the body (known as the wake). The wake starts from the point at which the boundary layer separation occurs. Separation occurs due to adverse pressure gradient, which combined with the viscous forces on the surface produces flow reversal, thus causes the stream to detach itself from the surface. The same situation exists at the rear edge of a body as it represents a physical discontinuity of the solid surface.

The flow in the wake is thus highly turbulent and consist of large scale eddies. High rate energy description takes place there, with the result that the pressure in the wake is reduced.

A situation is created whereby the pressure acting on the body (stagnation pressure) is in excess of that acting on the rear of the body so that resultant force acting on the body in the direction of relative fluid motion exerts. The force acting on the body due to the pressure difference is called pressure drag.

A stream lined body is defined as that body whose surface coincides with the stream lines, when the body is placed in a flow. In that case the separation of flow will take place only at the trailing edge (or rearmost part of the body). Though the boundary layer will start at the leading edge, will become turbulent from laminar, yet it does not separate up to the rearmost part of the body in case of stream-lined body. Bluff body is defined as that body whose surface does not coincide with the streamlines, when placed in a flow, then the flow is separated from the surface of the body much ahead of its trailing edge with the result of a very large wake formation zone. Then the drag due to pressure will be very large as compared to the drag due to friction on the body. Thus, the bodies of such a shape in which the pressure drag is very large as compared to friction drag are called bluff bodies.

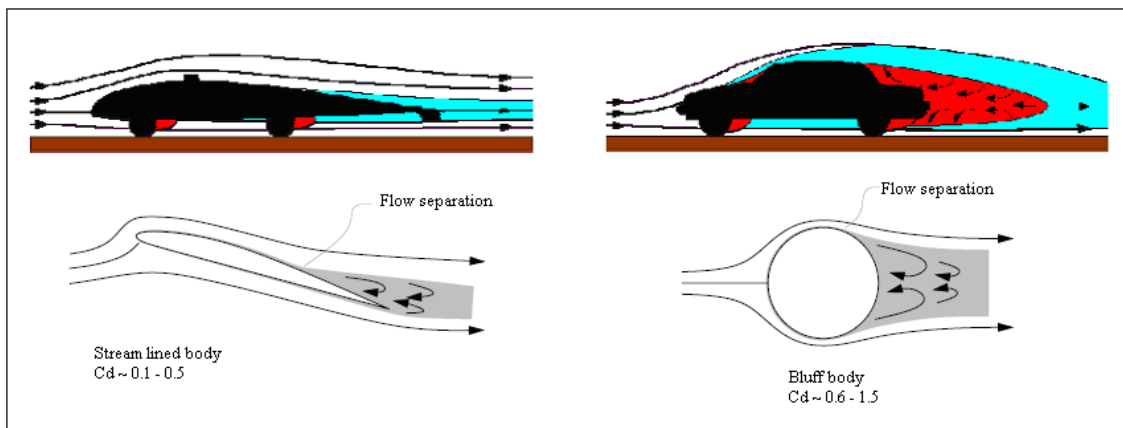


Fig. 3.1: Stream-lined Body and Bluff Body

3.2 Drag Coefficient

Any object moving through a fluid experiences drag – the net force in the direction of flow due to pressure and shear stress forces on the surface of the object.

Drag force can be expressed as:

$$F_D = C_d \times \left(\frac{1}{2}\right) \times \rho \times A V^2 \quad (3.1)$$

Where

F_d = drag force (N)

C_d = drag coefficient

ρ = density of fluid

V = flow velocity

A = characteristic frontal area of the body, normal to the flow direction.

The drag coefficient is a function of several parameters such as the shape of the body, its frontal area, velocity of flow or Reynolds Number, and Roughness of the Surface.

Objects drag coefficients are mostly results of experiments. Drag coefficients for some common bodies are listed in Table 3.2.



e-learning for kids

- The number 1 MOOC for Primary Education
- Free Digital Learning for Children 5-12
- 15 Million Children Reached

About e-Learning for Kids Established in 2004, e-Learning for Kids is a global nonprofit foundation dedicated to fun and free learning on the Internet for children ages 5 - 12 with courses in math, science, language arts, computers, health and environmental skills. Since 2005, more than 15 million children in over 190 countries have benefitted from eLessons provided by EFK! An all-volunteer staff consists of education and e-learning experts and business professionals from around the world committed to making difference. eLearning for Kids is actively seeking funding, volunteers, sponsors and courseware developers; get involved! For more information, please visit www.e-learningforkids.org.











| Shape | C_d |
|---|-------|
|  | 1.35 |
|  | 1.17 |
|  | 0.99 |
|  | 0.60 |
|  | 0.51 |
|  | 0.41 |
|  | 0.35 |
|  | 0.34 |
|  | 0.10 |
|  | 0.05 |

Table 3.2 Drag coefficient of some common bodies

3.3 The Boundary Layer

Boundary layers appear on the surface of bodies in viscous flow because the fluid seems to “stick” to the surface. Right at the surface the flow has zero relative speed and this fluid transfers momentum to adjacent layers through the action of viscosity. Thus a thin layer of fluid with lower velocity than the outer flow develops. The requirement that the flow at the surface has no relative motion is the “no slip condition.”

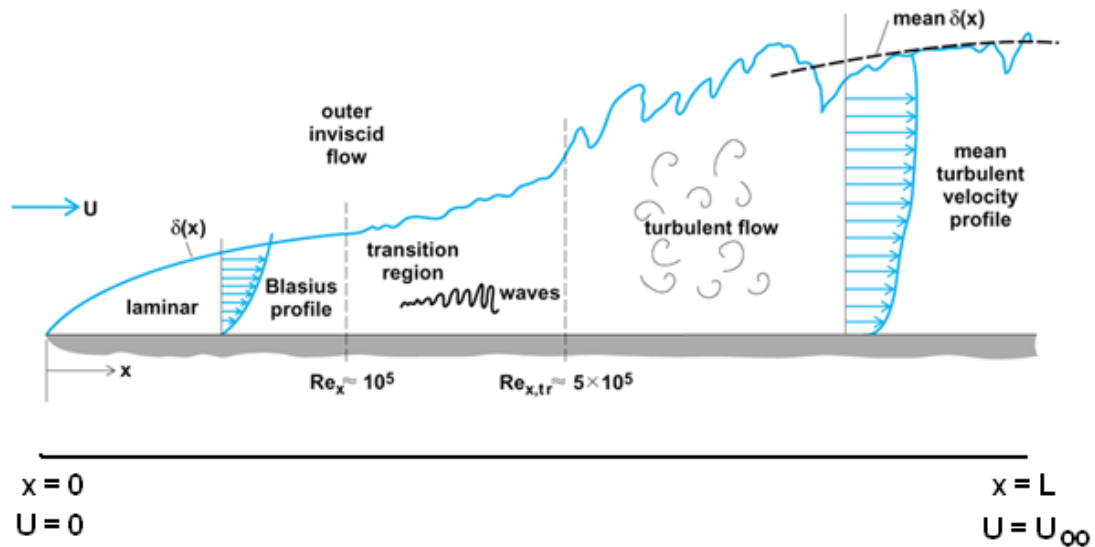


Figure 3.3: Development of the boundary layer on a flat plate

The boundary layer thickness, δ , is defined as the distance required for the flow to nearly reach U_{∞} . We might take an arbitrary number (say 99%) to define what we mean by “nearly”, but certain other definitions are used most frequently.

The concept of a boundary layer was introduced and formulated by Prandtl for steady, two-dimensional laminar flow past a flat plate using the Navier-Stokes equations. Prandtl’s student, Blasius, was able to solve these equations analytically for large Reynolds number flows. The details of the derivation are omitted for simplicity, and the results are summarized here.

Boundary layers may be either **laminar** (layered), or **turbulent** (disordered) depending on the value of the Reynolds number. For lower Reynolds numbers, the boundary layer is laminar and the streamwise velocity changes uniformly as one move away from the wall, as shown on the left side of the figure. For higher Reynolds numbers, the boundary layer is turbulent and the streamwise velocity is characterized by unsteady (changing with time) swirling flows inside the boundary layer. The external flow reacts to the edge of the boundary layer just as it would to the physical surface of an object. So the boundary layer gives any object an “effective” shape which is usually slightly different from the physical shape. To make things more confusing, the boundary layer may lift off or “separate” from the body and create an effective shape much different from the physical shape. This happens because the flow in the boundary has very low energy (relative to the free stream) and is more easily driven by changes in pressure. Flow separation is the reason for wing stall at high **angle of attack**. The effects of the boundary layer on lift are contained in the **lift coefficient** and the effects on drag are contained in the **drag coefficient**.

Based on Blasius' analytical solutions, the boundary layer thickness (δ) for the laminar region is given by

$$\frac{\delta}{x} = \frac{5}{\sqrt{Re_x}} \quad \text{laminar, } Re_x < 5 \times 10^5 \quad (3.2)$$

Where δ is defined as the boundary layer thickness in which the velocity is 99% of the free stream velocity (i.e., $y = \delta$, $u = 0.99U$).


The wall shear stress is determined by

$$\tau_w = 0.332 U^2 \sqrt{\frac{\rho\mu}{x}} \quad (3.3)$$

If this shear stress is integrated over the surface of the plate area, the drag coefficient for laminar flow can be obtained for the flat plate with finite length as

$$C_D = \frac{1.328}{\sqrt{Re_L}} \quad \text{laminar, } Re_L < 5 \times 10^5 \quad (3.4)$$

Cynthia | AXA Graduate



AXA Global Graduate Program

Find out more and apply

redefining / standards AXA

If the flow is turbulent, then the equations for boundary layer and drag coefficient is

$$\frac{\delta}{x} = \frac{0.38}{[Re_L]^{1/5}} \quad \text{turbulent, } 5 \times 10^5 \leq Re_L < 10^7 \quad (3.5)$$

$$C_D = \frac{0.074}{[Re_L]^{1/5}} \quad \text{turbulent, } 5 \times 10^5 \leq Re_L < 10^7 \quad (3.6)$$

3.4 Worked Examples

Worked Example 3.1

- If the vertical component of the landing velocity of a parachute is 6 m/s, find the diameter of the open parachute (hollow hemisphere) if the total weight of parachute and the person is 950N. Assume for air at ambient conditions, Density = 1.2 kg/m³ and Cd = 1.4
- How fast would the man fall if the parachute doesn't open? Assume for that condition, Cd = 0.5 and that the active area of the person's body is 0.5 m².



Solution:

With the parachute, neglecting buoyancy force using Newton's second law of motion:

—

—

—

When the parachute don't open, again neglecting buoyancy force

—
—

Big increase, ouch when he hits the ground!

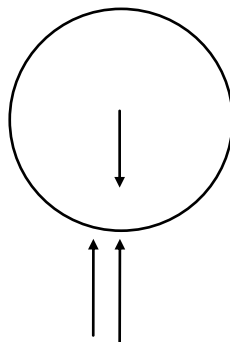
Worked Example 3.2

Calculate the terminal velocity of sphere of density 6000 kg/m^3 , diameter 0.1 m falling through water of density 1000 kg/m^3 , and its dynamic viscosity to be 0.001 kg/ms .

You may assume that the drag coefficient is given by $C_d = 0.4 (\text{Re}/10000)^{0.1}$

Solution:

The Free body Diagram shows the three forces acting on the sphere



Since the system is stable, Newton's second law of motion applies:

Weight = Drag force + Upthrust (Buoyancy)

$$\text{Volume of sphere} = \frac{4\pi}{3} \times R^3 = 0.000524 \text{ m}^3$$

$$\text{Area normal to the flow} = \pi \times R^2 = 0.007854 \text{ m}^2$$

$$\text{The Upthrust is } F_B = \rho_{\text{fluid}} \times V_L \times g = 5.136 \text{ N}$$

$$\text{Weight } F_g = \rho_{\text{sphere}} \times V_L \times g = 30.819 \text{ N}$$

$$\text{Hence Drag force } F_D = F_g - F_B = 30.819 - 5.136 = 25.683 \text{ N}$$

But

$$\begin{aligned}
 C_d &= 0.4 (Re/10000)^{0.1} \\
 &= 0.4 (\rho \times V \times D / \mu / 10000)^{0.1} \\
 &= 0.4 (1000 \times V \times 0.1 / 0.001 / 10000)^{0.1} \\
 &= 0.5036 \times V^{0.1}
 \end{aligned}$$

$$\begin{aligned}
 F_D &= C_d \times (1/2) \rho \cdot A \cdot V^2 \\
 &= 0.5036 \times V^{0.1} \times 0.5 \times 1000 \times 0.00785 \times V^2 \\
 &= 1.9775 \times V^{2.1}
 \end{aligned}$$

Hence

Worked Example 3.3

An aeroplane weighing 100 kN has a wing area of 45 m² and a drag coefficient (based on wing area) $C_d = 0.03 + 0.04 \times C_L^2$.

I joined MITAS because
I wanted **real responsibility**

The Graduate Programme
for Engineers and Geoscientists
www.discovermitas.com



Real work
International opportunities
Three work placements



Month 16
I was a construction
supervisor in
the North Sea
advising and
helping foremen
solve problems



Determine:

1. the optimum flight speed
2. the minimum power required to propel the craft.

Assume for air at ambient conditions, Density = 1.2 kg/m^3



Solution:

—

—

The second derivative is positive for all values of V , hence the first derivative represents the equation for minimum power, set that to zero, leads to $V = 49.7 \text{ m/s}$

Worked example 3.4

A racing car shown below is fitted with an inverted aerofoil of length 1.2m and chord 0.85m at such angle that $C_d=0.3$ and $C_l=1.3$.

The car length is 4.6m, the body surface area is 11.5 m^2 and the skin friction coefficient is given by $0.0741 \text{ Re}_L^{-0.2}$ where Re is based on car length. The car weight is 12.75 kN and the rolling resistance is 40N per kN of normal force between the tyres and road surface. Assuming that the form drag on the car is 500 N when the car maintains a constant speed of 60 m/s, determine at this speed:


1. The total aerodynamic drag force on the car
2. The total rolling resistance, and
3. The power required to drive the car.

Assume for air assume: Density = 1.2 kg/m^3 , and the dynamic viscosity = $1.8 \times 10^{-5} \text{ kg/ms}$.



Solution:

1. let F_{D1} be the aerofoil drag force, F_{D2} the car body drag force and F_{D3} the form drag force.



2. to determine the total rolling resistance, first calculate the normal force

$$F_N = F_L + m \cdot g = 2840 + 12.75 \times 10^3 = 15.59 \text{ kN}$$

$$\text{Rolling resistance} = 40 \times F_N = 40 \times 15.59 = 623.6 \text{ N}$$

3. to determine the driving power, calculate the total force resisting the forward motion

$$F = 1219.5 + 623.6 = 1843 \text{ N}$$

$$\text{Power} = F \times V = 1843 \times 60 = 110.6 \text{ kW}$$

Worked Example 3.5

Calculate the friction drag on one side of a smooth flat plate on the first 10 mm, and for the entire length when it is towed in water at a relative speed of 10 m/s. The flat plate is 10m long and 1m wide. Assume water density = 1000 kg/m³ and its kinematic viscosity = 1.0x10⁻⁶ m²/s. Use the Boundary layer equations to calculate the drag coefficient.



$$C_D = \frac{1.328}{\sqrt{Re_L}} \quad \text{laminar, } Re_L < 5 \times 10^5$$

$$C_D = \frac{0.074}{[Re_L]^{1/5}} \quad \text{turbulent, } 5 \times 10^5 \leq Re_L < 10^7$$

ie business school

93%
OF MIM STUDENTS ARE
WORKING IN THEIR SECTOR 3 MONTHS
FOLLOWING GRADUATION

MASTER IN MANAGEMENT

- STUDY IN THE CENTER OF MADRID AND TAKE ADVANTAGE OF THE UNIQUE OPPORTUNITIES THAT THE CAPITAL OF SPAIN OFFERS
- PROPEL YOUR EDUCATION BY EARNING A DOUBLE DEGREE THAT BEST SUITS YOUR PROFESSIONAL GOALS
- STUDY A SEMESTER ABROAD AND BECOME A GLOBAL CITIZEN WITH THE BEYOND BORDERS EXPERIENCE

Length: 10 MONTHS
Av. Experience: 1 YEAR
Language: ENGLISH / SPANISH
Format: FULL-TIME
Intakes: SEPT / FEB

5 SPECIALIZATIONS
PERSONALIZE YOUR PROGRAM

#10 WORLDWIDE
MASTER IN MANAGEMENT
FINANCIAL TIMES

55 NATIONALITIES
IN CLASS

www.ie.edu/master-management | mim.admissions@ie.edu | [f](#) [t](#) [w](#) Follow us on IE MIM Experience



Solution:

a) for the first 10 mm



b) for the entire length

**Worked example 3.6**

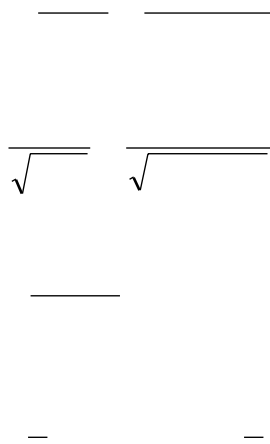
Air flows over a sharp edged flat plate, 1m long, and 1m wide at a velocity of 5 m /s. Determine the following:

1. the boundary layer thickness
2. the drag force
3. the drag force if the plate was mounted perpendicular to the flow direction. Take $C_d = 1.4$.

For air, take density as 1.23 kg/m^3 and the kinematic viscosity for air as $1.46 \times 10^{-5} \text{ m}^2/\text{s}$; Use the Boundary layer equations to calculate the drag coefficient.

Solution:

1.



2. when the plate is normal to the flow, $C_d = 1.4$ (table 3.1)



This is over 600 times higher than the horizontal mounting force!

Worked example 3.7

Water flows over a sharp flat plate 3 m long, 3 m wide with an approach velocity of 10 m/s. Estimate the error in the drag force if the flow over the entire plate is assumed turbulent. Assume the mixed regions can be expressed by the following coefficient of drag relationship



For water, take density as 1000 kg/m^3 , and kinematic viscosity as $1.0 \times 10^{-6} \text{ m}^2/\text{s}$.

Solution:

a) Assume turbulent



b) treat the plate as two parts, laminar section, followed by a turbulent section



"I studied English for 16 years but...
...I finally learned to speak it in just six lessons"
Jane, Chinese architect

ENGLISH OUT THERE

Click to hear me talking before and after my unique course download



hence

3.5 Tutorial Problems

- 3.1 If the vertical component of the landing velocity of a parachute is equal to that acquired during a free fall of 2m, find the diameter of the open parachute (hollow hemisphere) if the total weight of parachute and the person is 950N. Assume for air at ambient conditions, Density = 1.2 kg/m³ and Cd = 1.35.

Ans (6.169m)

- 3.2 A buoy is attached to a weight resting on the seabed; the buoy is spherical with radius of 0.2m and the density of sea water is 1020 kg/m³. Determine the minimum weight required to keep the buoy afloat just above the water surface. Assume the buoy and the chain has a combined weight of 1.2 kg.

Ans (33 kg)

- 3.3 An aeroplane weighing 65 kN, has a wing area of 27.5 m² and a drag coefficient (based on wing area) $C_D = 0.02 + 0.061 \times C_L^2$. Assume for air at ambient conditions, Density = 0.96 kg/m³. Determine the following when the craft is cruising at 700 km/h:
1. the lift coefficient
 2. the drag coefficient, and
 3. the power to propel the craft.

Ans (0.13, 0.021, 2040 kW)

- 3.4 A racing car shown below is fitted with an inverted NACA2415 aerofoil with lift to drag given as:

$$C_d = 0.01 + 0.008 \times C_l^2$$

The aerofoil surface area is 1 m² and the car weight is 1 kN; the car maintains a constant speed of 40 m/s, determine at this speed:

1. The aerodynamic drag force on the aerofoil
2. The power required to overcome this drag force

Assume for air at ambient conditions, take Density = 1.2 kg/m³

Ans (18 N, 0.7 kW)

- 3.5 Air flows over a sharp edged flat plate, 3m long, and 3m wide at a velocity of 2 m/s.
1. Determine the drag force
 2. Determine drag force if the plate was mounted perpendicular to the flow direction assume $C_d = 1.4$.
- For air, take density as 1.23 kg/m^3 , and kinematic viscosity as $1.46 \times 10^{-5} \text{ m}^2/\text{s}$.

Ans (0.05N, 31N)

- 3.6 (a) An airplane wing has a 7.62m span and 2.13m chord. Estimate the drag on the wing (two sides) treating it as a flat plate and the flight speed of 89.4 m/s to be turbulent from the leading edge onward.
- (b) Determine the reduction in power that can be saved if the boundary layer control device is installed on the wing to ensure laminar flow over the entire wing's surface.
- For air, take density as 1.01 kg/m^3 , and kinematic viscosity as $1.3 \times 10^{-5} \text{ m}^2/\text{s}$.

Ans (24 N, 25 kW)



In the past 5 years we have drilled around

95,000 km

—that's more than **twice** around the world.

Who are we?
We are the world's leading provider of reservoir characterization, drilling, production, and processing technologies to the oil and gas industry.

Who are we looking for?
We offer countless opportunities in the following domains:

- Operations
- Research, Engineering, and Manufacturing
- Geoscience and Petrotechnical
- Commercial and Business

We're looking for high-energy, self-motivated graduates with vision and integrity to join our team.



What will you be?

careers.slb.com

Schlumberger

Click on the ad to read more

4 Compressible Fluid Dynamics



4.1 Compressible flow definitions

Compressible flow describes the behaviour of fluids that experience significant variations in density under the application of external pressures. For flows in which the density does not vary significantly, the analysis of the behaviour of such flows may be simplified greatly by assuming a constant density and the fluid is termed incompressible. This is an idealisation, which leads to the theory of incompressible flow. However, in the many cases dealing with gases (especially at higher velocities) and those cases dealing with liquids with large pressure changes, significant variations in density can occur, and the flow should be analysed as a compressible flow if accurate results are to be obtained.

Allowing for a change in density brings an additional variable into the analysis. In contrast to incompressible flows, which can usually be solved by considering only conservation of mass and conservation of momentum. Usually, the principle of conservation of energy is included. However, this introduces another variable (temperature), and so a fourth equation (such as the ideal gas equation) is required to relate the temperature to the other thermodynamic properties in order to fully describe the flow.

Fundamental assumptions

1. The gas is continuous.
2. The gas is perfect (obeys the perfect gas law)
3. Gravitational effects on the flow field are negligible.
4. Magnetic and electrical effects are negligible.
5. The effects of viscosity are negligible.

Applied principles

1. Conservation of mass (continuity equation)
2. Conservation of momentum (Newton’s law)
3. Conservation of energy (first law of thermodynamics)
4. Equation of state

4.2 Derivation of the Speed of sound in fluids

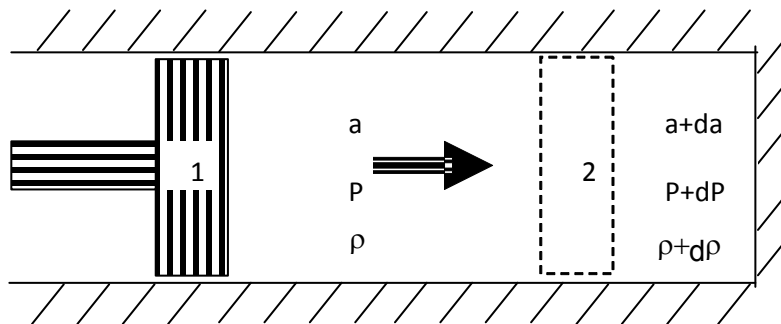


Figure 4.1 Propagation of sound waves through a fluid

Consider the control volume surrounding the cylinder and its content in Figure 4.1, conservation of mass between the sides of the piston at section 2 implies:

$$\rho.A.a = (\rho+\delta\rho).A.(a+da)$$

Since “A” is area of cross-section of the piston (constant); “ρ” is the density of the fluid and “a” is the speed of sound wave propagated through the fluid.

Expand the above to get

$$(\rho.da + a.d\rho) = 0 \tag{4.1}$$

Applying the Momentum Equation to the same section:

$$P.A - (P + dP).A = \rho.A.a (a+da-a)$$

Hence $dP = - \rho.a.da$

but $\rho da = - a.d\rho$

ie $dP = - a.(- a.d\rho)$

Hence
$$\sqrt{\frac{dP}{\rho}}$$
 (4.2)

This is the expression for the speed of sound.

The Speed of sound for liquids

In order to evaluate the speed of sound for liquids, the bulk modulus of elasticity relating the changes in density of the fluid due to the applied pressure in equation 4.2:

$$\frac{\partial \rho}{\partial p} = \frac{1}{\sqrt{F}} \sqrt{F} \quad (4.3)$$

Excellent Economics and Business programmes at:



university of groningen



“The perfect start of a successful, international career.”

CLICK HERE
to discover why both socially and academically the University of Groningen is one of the best places for a student to be

www.rug.nl/feb/education



The speed of sound for an ideal gas

Starting from equation 4.2

$$a = \sqrt{\frac{\gamma p}{\rho}}$$

Since for a perfect gas

Then

$$a = \sqrt{\frac{\gamma R T}{M}} \tag{4.4}$$

Maxwell was the first to derive the speed of sound for gas.

| Gas | Speed (m/s) |
|----------------|-------------|
| Air | 331 |
| Carbon Dioxide | 259 |
| Oxygen | 316 |
| Helium | 965 |
| Hydrogen | 1290 |

Table 4.1 The speed of sound for various gases at 0°C

4.3 The Mach number

Mach number is the ratio of the velocity of a fluid to the velocity of sound in that fluid, named after Ernst Mach (1838–1916), an Austrian physicist and philosopher. In the case of an object moving through a fluid, such as an aircraft in flight, the Mach number is equal to the velocity of the airplane relative to the air divided by the velocity of sound in air at that altitude. Mach numbers less than one indicate subsonic flow; those greater than one, supersonic flow. The Mach number can be expressed as

$$M = V / a \tag{4.5}$$

Where

$M =$ Mach number

$V =$ fluid flow velocity (m/s)

$a =$ speed of sound (m/s)

Alternatively the Mach number can be expressed with the density and the bulk modulus for elasticity as

$$M = V (\rho / K_s)^{1/2} \quad (4.6)$$

Where

$\rho =$ density of fluid (kg/m³)

$K_s =$ bulk modulus elasticity (N/m² (Pa))

The bulk modulus elasticity has the dimension pressure and is commonly used to characterize the fluid compressibility.

The square of the Mach number is the Cauchy Number. (C)

$$M^2 = C \quad (4.7)$$

As the aircraft moves through the air it makes pressure waves. These pressure waves stream out away from the aircraft at the speed of sound. This wave acts just like the ripples through water after a stone is dropped in the middle of a still pond. At Mach 1 or during transonic speed (Mach 0.7–0.9), the aircraft actually catches up with its own pressure waves. These pressure waves turn into one big shock wave. It is this shock wave that buffets the airplane. The shock wave also creates high drag on the airplane and slows the airplane's speed. As the airplane passes through the shock wave it is moving faster than the sound it makes. The shock wave forms an invisible cone of sound that stretches out toward the ground. When the shock wave hits the ground it causes a sonic boom that sounds like a loud thunderclap.

The energy lost in the process of compressing the airflow through these shock waves is called wave drag. This reduces lift on the airplane.

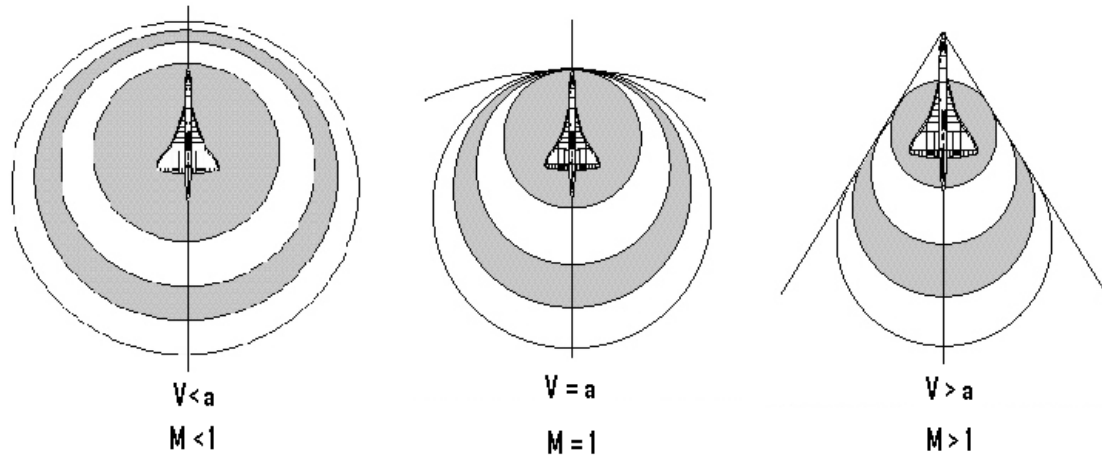


Figure 4.2 Propagation of sound waves through a fluid

Mach number and flow regimes:

Mach number represents the ratio of the speed of an object such as aeroplane in air, or the relative motion of air against the aeroplane. It is commonly agreed that for Mach numbers less than 0.3, the fluid is considered incompressible. The following zoning based on the value of Mach numbers are universally agreed.

American online LIGS University

is currently enrolling in the
Interactive Online **BBA, MBA, MSc,**
DBA and PhD programs:

- ▶ enroll **by September 30th, 2014** and
- ▶ **save up to 16%** on the tuition!
- ▶ pay in 10 installments / 2 years
- ▶ Interactive **Online** education
- ▶ visit www.ligsuniversity.com to
find out more!

Note: LIGS University is not accredited by any nationally recognized accrediting agency listed by the US Secretary of Education. More info [here](#).





- Ma < 0.3; incompressible flow
- 0.3 < Ma < 0.8; subsonic flow, no shock waves
- 0.8 < Ma < 1.2; transonic flow, shock waves
- 1.2 < Ma < 5.0; supersonic flow
- 5 < Ma; hypersonic flow

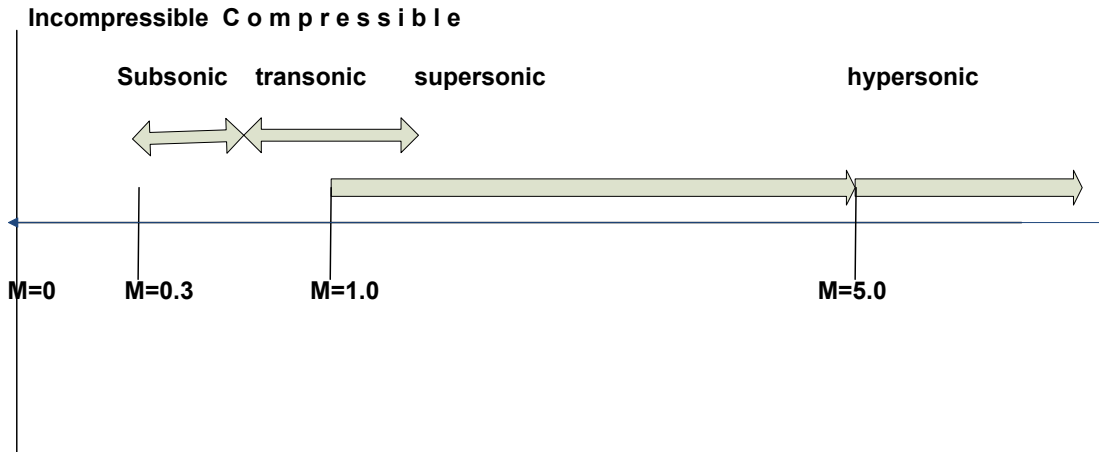


Figure 4.3 Compressible flow regimes

4.4 Compressibility Factor

For a compressible fluid the energy equation between two sections 1 and 2 is represented by Bernoulli's theorem:

$$\begin{aligned}
 & \frac{1}{2} \rho V_1^2 + \rho g z_1 + p_1 = \frac{1}{2} \rho V_2^2 + \rho g z_2 + p_2 \\
 & \frac{1}{2} V_1^2 + g z_1 + \frac{p_1}{\rho} = \frac{1}{2} V_2^2 + g z_2 + \frac{p_2}{\rho}
 \end{aligned}
 \tag{4.8}$$

In cases where the fluid comes to rest, $V_2=0$, and if the stream line is horizontal, the z-terms cancel out, hence the above equation reduces to

$$\frac{1}{2} V_1^2 + \frac{p_1}{\rho} = \frac{p_2}{\rho}
 \tag{4.9}$$

Since $P = k \cdot \rho^\gamma$ hence

$$\frac{P_1}{\rho_1^\gamma} = \frac{P_2}{\rho_2^\gamma}$$

Hence equation 4.9 can be written in terms of the final pressure as

$$\frac{\gamma}{\gamma-1} \cdot \frac{P_1}{\rho_1} \left[\frac{P_2}{P_1} \frac{\rho_1}{\rho_2} - 1 \right] - \frac{V_1^2}{2} = 0$$

$$\frac{\gamma}{\gamma-1} \cdot \frac{V_1^2}{\gamma \cdot M^2} \left[\frac{P_2}{P_1} \times \left(\frac{P_1}{P_2} \right)^{1/\gamma} - 1 \right] - \frac{V_1^2}{2} = 0$$

$$\frac{1}{\gamma-1} \cdot \frac{1}{M^2} \left[\frac{P_2}{P_1} - 1 \right] - \frac{1}{2} = 0$$

Hence

$$\frac{P_2}{P_1} = \left(1 + \frac{\gamma-1}{2} M^2 \right)^{\frac{\gamma}{\gamma-1}} \quad (4.10)$$

Equation (4.10) can be expanded as follows:

$$\begin{aligned}
 & \frac{1}{\rho} \frac{d\rho}{dx} + \frac{1}{\rho} \frac{d\rho}{dy} + \frac{1}{\rho} \frac{d\rho}{dz} + \frac{1}{\rho} \frac{d\rho}{dt} \\
 & \frac{1}{\rho} \frac{d\rho}{dx} + \frac{1}{\rho} \frac{d\rho}{dy} + \frac{1}{\rho} \frac{d\rho}{dz} + \frac{1}{\rho} \frac{d\rho}{dt} \\
 & \frac{1}{\rho} \frac{d\rho}{dx} + \frac{1}{\rho} \frac{d\rho}{dy} + \frac{1}{\rho} \frac{d\rho}{dz} + \frac{1}{\rho} \frac{d\rho}{dt} \\
 & \frac{1}{\rho} \frac{d\rho}{dx} + \frac{1}{\rho} \frac{d\rho}{dy} + \frac{1}{\rho} \frac{d\rho}{dz} + \frac{1}{\rho} \frac{d\rho}{dt} \\
 & \frac{1}{\rho} \frac{d\rho}{dx} + \frac{1}{\rho} \frac{d\rho}{dy} + \frac{1}{\rho} \frac{d\rho}{dz} + \frac{1}{\rho} \frac{d\rho}{dt}
 \end{aligned}
 \tag{4.11}$$

CF is the compressibility factor.

DON'T EAT YELLOW SNOW

What will your advice be?

Some advice just states the obvious. But to give the kind of advice that's going to make a real difference to your clients you've got to listen critically, dig beneath the surface, challenge assumptions and be credible and confident enough to make suggestions right from day one. At Grant Thornton you've got to be ready to kick start a career right at the heart of business.

Sound like you? Here's our advice: visit GrantThornton.ca/careers/students

Scan here to learn more about a career with Grant Thornton.

Grant Thornton
An instinct for growth™

© Grant Thornton LLP. A Canadian Member of Grant Thornton International Ltd



Comparison between Incompressible and Compressible fluid flow of gases. In terms of the velocity of flow, the expression for a compressible fluid is given by equation 4.8

The incompressible situation, Bernoulli's equation is given by

It is obvious that the term $(\gamma/\gamma-1)$ is the difference, for air the value of this term is 3.5, affecting the pressure head term, velocity term and elevation terms are not affected by this term.

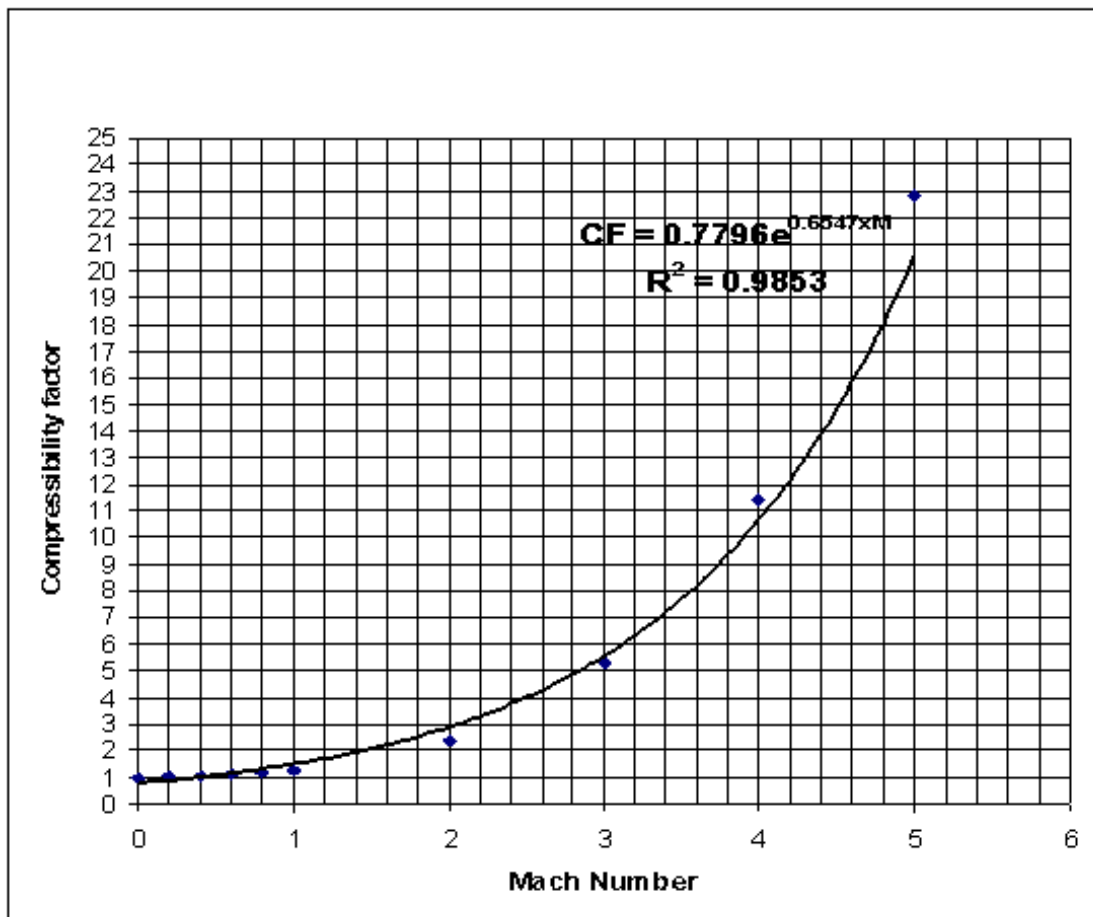


Figure 4.4 Compressibility Factor

4.5 Energy equation for frictionless adiabatic gas processes

Consider a one-dimensional flow through a duct of variable area, the Steady Flow energy Equation between two sections 1 and 2:

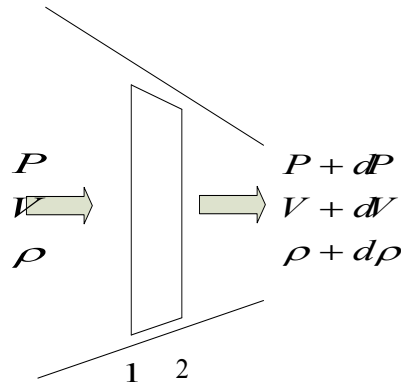


Figure 4.5 One dimensional compressible flow

$$Q - W = m [(h_2 - h_1) + (V_2^2 - V_1^2)/2 + g(z_2 - z_1)]$$

If the flow is adiabatic, and there is no shaft work and assume horizontal duct, the equation reduces to

$$(h_2 - h_1) + (V_2^2 - V_1^2)/2 = 0 \tag{4.12}$$

Or in general $h + V^2/2 = \text{constant}$

By differentiation $dh + v dv = 0$

But the first law of thermodynamics states that

$$dQ - dW = du$$

The second law of thermodynamics states that $dQ = T.dS$

Also $dW = P. d(1/\rho)$

and $h = u + P/\rho$ or $du = dh - P. d(1/\rho) + (1/\rho).dP$

Hence the 1st law of thermodynamics is written as

$$T.dS = dh - P. d(1/\rho) - (1/\rho).dP + P. d(1/\rho)$$

$$T.dS = dh - dP/\rho$$

For isentropic process, $dS = 0$

Then $dh = dP/\rho$

but $dh = -v \cdot dv$

hence $-v \cdot dv = dP/\rho$

Therefore $dP/dv = -\rho v$ (4.13)

The continuity equation states that $\rho A v = \text{constant}$

So by differentiation

.....Alcatel-Lucent 

www.alcatel-lucent.com/careers

What if you could build your future and create the future?

One generation's transformation is the next's status quo. In the near future, people may soon think it's strange that devices ever had to be "plugged in." To obtain that status, there needs to be "The Shift".



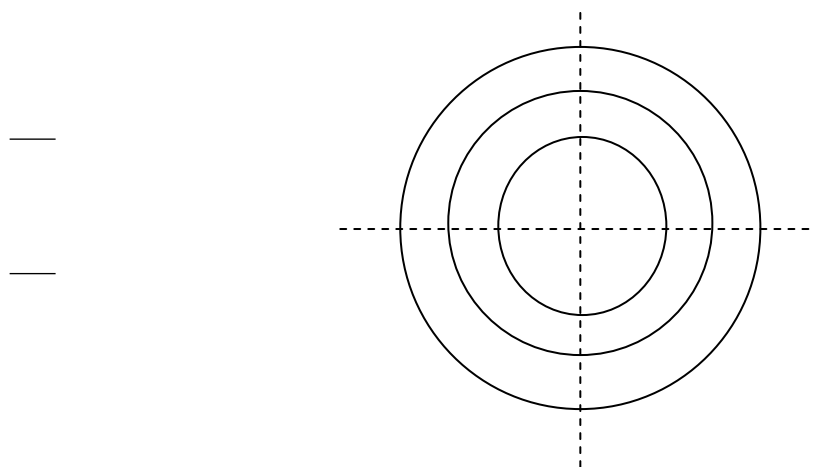
 [Click on the ad to read more](#)

$$\begin{aligned}
 & \rho_1 V_1 A_1 = \rho_2 V_2 A_2 \\
 & \rho_1 V_1 A_1 \left(\frac{V_1}{c_1} \right) = \rho_2 V_2 A_2 \left(\frac{V_2}{c_2} \right) \\
 & \rho_1 V_1^2 A_1 \left(\frac{1}{c_1} \right) = \rho_2 V_2^2 A_2 \left(\frac{1}{c_2} \right)
 \end{aligned} \tag{4.14}$$

Similarly it is possible to show that

$$\rho_1 V_1^2 A_1 \left(\frac{1}{c_1} \right) = \rho_2 V_2^2 A_2 \left(\frac{1}{c_2} \right) \tag{4.15}$$

To illustrate the above relationships between changes in area of duct and the changes in velocity and pressure, figure 4.6 is drawn.



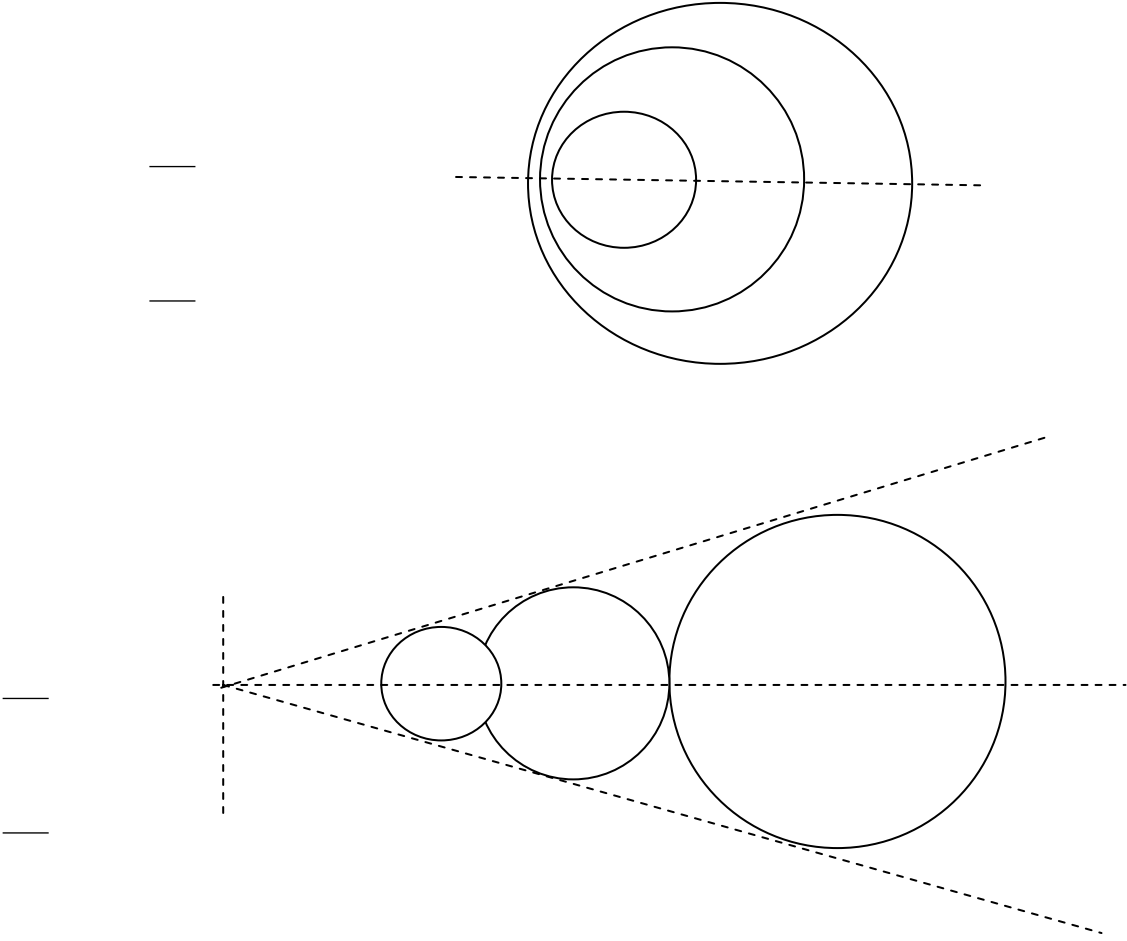


Figure 4.6 Changes of area and its effect on pressure and velocity of compressible flow

4.6 Stagnation properties of compressible flow

Stagnation condition refers to the situation or rather position in which the fluid becomes motionless. There are many examples of this in real applications; two are shown in figure 4.7

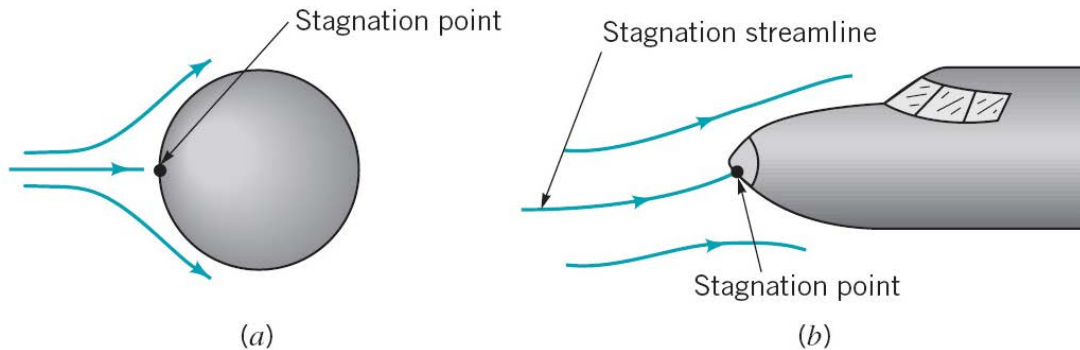


Figure 4.7 Stagnation situations in flow applications

When defining what is meant by a compressible flow, it is useful to compare the density to a reference value, such as the stagnation density, ρ_0 , which is the density of the fluid if it were to be slowed down isentropically to stationary.



Join the best at
the Maastricht University
School of Business and
Economics!

Top master's programmes

- 33rd place Financial Times worldwide ranking: MSc International Business
- 1st place: MSc International Business
- 1st place: MSc Financial Economics
- 2nd place: MSc Management of Learning
- 2nd place: MSc Economics
- 2nd place: MSc Econometrics and Operations Research
- 2nd place: MSc Global Supply Chain Management and Change

Sources: Keuzegids Master ranking 2013; Elsevier 'Beste Studies' ranking 2012; Financial Times Global Masters in Management ranking 2012

Maastricht University is the best specialist university in the Netherlands (Elsevier)

Visit us and find out why we are the best!
Master's Open Day: 22 February 2014

www.mastersopenday.nl



Recall the simplified energy equation for the duct in the previous section, between any section, and rest (stagnation).

$$h + V^2/2 = h_o$$

The enthalpy is defined as the product of the specific heat capacity C_p and the temperature of the fluid, T . also note that

—

Hence, the energy equation can be written as:

$$\frac{a^2}{\gamma - 1} + \frac{V^2}{2} = \frac{a_o^2}{\gamma - 1}$$

Since $M = V/a$ then

$$\frac{a^2}{\gamma - 1} + \frac{a^2 \cdot M^2}{2} = \frac{a_o^2}{\gamma - 1}$$

$$a^2 \left(1 + \frac{\gamma - 1}{2} M^2 \right) = a_o^2 \quad (4.16)$$

Plotting the speed of sound ratio (a/a_o) versus M , is shown in Figure 4.8

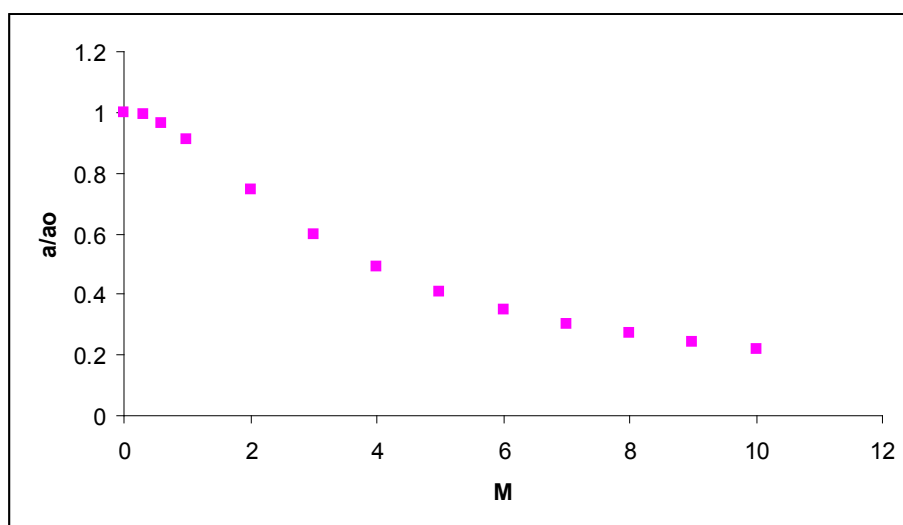


Figure 4.8 Variation of speed of sound ratio with Mach number

Recall the energy equation for a fluid with a stagnation state “o”

$$h + V^2/2 = h_o$$

Use $h = C_p \cdot T$, the energy equation can be written as:

$$\frac{h}{C_p} + \frac{V^2}{2} = \frac{h_o}{C_p}$$

$$\frac{C_p T}{C_p} + \frac{V^2}{2} = \frac{C_p T_o}{C_p}$$

$$T + \frac{V^2}{2 C_p} = T_o$$
(4.17)

In order to find the maximum velocity for stagnation condition, the EE is used With velocity being maximum when T is taken down to absolute zero, ie

$$T + \frac{V^2}{2 C_p} = T_o$$

$$0 + \frac{V^2}{2 C_p} = T_o$$

$$V^2 = 2 C_p T_o$$

$$V = \sqrt{2 C_p T_o}$$
(4.18)

Other Stagnation relationships

Starting with the stagnation temperature ratio, it is possible to derive a similar relationship for stagnation pressure ratio

$$\frac{T}{T_o} = \frac{h}{h_o} = \frac{C_p T}{C_p T_o}$$

$$\frac{T}{T_o} = \frac{h}{h_o} = \frac{C_p T}{C_p T_o}$$

$$\frac{T}{T_o} = \frac{h}{h_o} = \frac{C_p T}{C_p T_o}$$

$$\frac{T}{T_o} = \frac{h}{h_o} = \frac{C_p T}{C_p T_o}$$
(4.19)

For the stagnation density ratio

$$\frac{\rho_0}{\rho} = \left[\frac{1 + \frac{\gamma - 1}{2} M^2}{1} \right]^{\frac{\gamma}{\gamma - 1}} \tag{4.20}$$

4.7 Worked Examples

Worked Example 4.1

Calculate the speed of sound in air and in water at 0°C and at 20°C and absolute pressure 1 bar.

For air – $\gamma = 1.4$ and $R = 287$ (J/K kg)

For water $K_s = 2.06 \cdot 10^9$ (N/m²) and $\rho = 998$ (kg/m³) at 0°C, and 1000 (kg/m³) at 20°C

Solution:

For air at 0 °C

$$a = [\gamma R T]^{1/2} = (1.4 (287 \text{ J/K kg}) (273 \text{ K}))^{1/2} = 331.2 \text{ (m/s)}$$

Where $\gamma = 1.4$ and $R = 287$ (J/K kg)

Empowering People. Improving Business.

BI Norwegian Business School is one of Europe's largest business schools welcoming more than 20,000 students. Our programmes provide a stimulating and multi-cultural learning environment with an international outlook ultimately providing students with professional skills to meet the increasing needs of businesses.

BI offers four different two-year, full-time Master of Science (MSc) programmes that are taught entirely in English and have been designed to provide professional skills to meet the increasing need of businesses. The MSc programmes provide a stimulating and multi-cultural learning environment to give you the best platform to launch into your career.

- MSc in Business
- MSc in Financial Economics
- MSc in Strategic Marketing Management
- MSc in Leadership and Organisational Psychology

BI NORWEGIAN BUSINESS SCHOOL

EFMD **EQUIS ACCREDITED**

www.bi.edu/master



The speed of sound in air at 20 °C and absolute pressure 1 bar can be calculated as

$$a = [\gamma R T]^{1/2} = (1.4 (287 \text{ J/K kg}) (293 \text{ K}))^{1/2} = 343.1 \text{ (m/s)}$$

The difference is = 3.6%

The speed of sound in water at 0 °C can be calculated as

$$\sqrt{\frac{K_s}{\rho}}$$

Where $K_s = 2.06 \cdot 10^9 \text{ (N/m}^2\text{)}$ and $\rho = 998 \text{ (kg/m}^3\text{)}$

The speed of sound in water at 20°C can be calculated as

$$\sqrt{\frac{K_s}{\rho}}$$

Where $K_s = 2.06 \cdot 10^9 \text{ (N/m}^2\text{)}$ and $\rho = 1000 \text{ (kg/m}^3\text{)}$

The difference is = 0.5%

It can be noted that the speed of sound in gases changes more than in liquids with changes in temperature.

Worked Example 4.2

An aircraft flies at an altitude of 10,000 m where the pressure and density are 0.265 bar and 0.41 kg/m³ respectively.

- a) Determine the aircraft speed if the Mach number is 1.5
- b) What is the speed of the plane at sea level if the Mach number is maintained?

Solution:

- a) The speed of sound in air is calculated first, then using the Mach definition, the speed of the aircraft is calculated as follows:

$$\sqrt{\frac{\gamma R T}{M^2}}$$

$$\sqrt{\frac{K_s}{\rho}}$$

b) when the Mach number is $M = 1.5$, similar method to that in (a) is used:

$$\sqrt{\frac{2}{\gamma - 1} \left[\frac{P_2}{\rho_2} - \frac{P_1}{\rho_1} \right]}$$

$$\sqrt{\frac{2\gamma}{\gamma - 1} \frac{P_1}{\rho_1} \left[1 - \left(\frac{P_2}{P_1} \right)^{\frac{\gamma - 1}{\gamma}} \right]}$$

Worked Example 4.3

A sealed tank filled with air which is maintained at 0.37 bar gauge and 18°C. The air discharges to the atmosphere (1.013 bar) through a small opening at the side of the tank.

- a) Calculate the velocity of air leaving the tank; assume the flow to be compressible and the process to be frictionless adiabatic.
- b) Compare the value if the flow is incompressible.
- c) comment on the result.

Take for air, $R=287 \text{ J/kgK}$, and $\gamma= 1.4$.

Solution:

a) Bernoulli equation for a compressible case, Assume $z_2=z_1$ and $V_1 = 0$; The equation reduces to:

$$\frac{V_2^2}{2} = \frac{\gamma}{\gamma - 1} \left[\frac{P_2}{\rho_2} - \frac{P_1}{\rho_1} \right]$$

$$\therefore V_2 = \left[\frac{2\gamma}{\gamma - 1} \left[\frac{P_2}{\rho_2} - \frac{P_1}{\rho_1} \right] \right]^{0.5} = \left[\frac{2\gamma}{\gamma - 1} \times \frac{P_1}{\rho_1} \left[1 - \left(\frac{P_2}{P_1} \right)^{\frac{\gamma - 1}{\gamma}} \right] \right]^{0.5}$$

Since $\frac{P_1}{\rho_1} = R.T_1$ Then the discharge velocity is:

$$\text{_____}$$

b) For incompressible fluids _____

With $\rho_2 = \rho_1$ and again with $z_2 = z_1$ and $V_1 = 0$; The equation reduces to:

$$\frac{V_2^2}{2} = \frac{V_1^2}{2} + \frac{p_1 - p_2}{\rho}$$

c) The fluid velocity is different for the two assumptions,

$$a = \sqrt{\gamma \cdot R \cdot T} = \sqrt{1.4 \times 287 \times 291} = 342 \text{ m/s}$$

hence

$$M = \frac{v}{a} = \frac{223}{342} = 0.6$$

The fluid is clearly compressible, so the accurate velocity is 223 m/s.

Need help with your dissertation?

Get in-depth feedback & advice from experts in your topic area. Find out what you can do to improve the quality of your dissertation!

Get Help Now



Go to www.helpmyassignment.co.uk for more info



Click on the ad to read more

Worked Example 4.4

A low flying missile develops a nose temperature of 2500K where the temperature and pressure of the atmosphere at that elevation are 0.03bar and 220K respectively. Determine the missile velocity and the stagnation pressure. Assume for air $C_p=1000 \text{ J/kgK}$ and $\gamma=1.4$.

Solution:

Using the stagnation relations,

$$\frac{T_0}{T} = 1 + \frac{\gamma - 1}{2} \frac{V^2}{c_p T}$$

$$\frac{2500}{220} = 1 + \frac{1.4 - 1}{2} \frac{V^2}{1000 \times 220}$$

$$\frac{2500}{220} = 1 + \frac{0.4}{2} \frac{V^2}{220000}$$

$$\frac{2500}{220} = 1 + \frac{0.2}{220000} V^2$$

$$\frac{2500}{220} - 1 = \frac{0.2}{220000} V^2$$

$$\frac{2500 - 220}{220} = \frac{0.2}{220000} V^2$$

$$\frac{2280}{220} = \frac{0.2}{220000} V^2$$

$$10363.64 = \frac{0.2}{220000} V^2$$

$$10363.64 \times 220000 = 0.2 V^2$$

$$2279802800 = 0.2 V^2$$

$$V^2 = \frac{2279802800}{0.2}$$

$$V^2 = 11399014000$$

$$V = \sqrt{11399014000}$$

$$V = 106765.8 \text{ m/s}$$

Similarly the stagnation density ratio can be used to determine the stagnation pressure:

$$\frac{\rho_0}{\rho} = \left(1 + \frac{\gamma - 1}{2} \frac{V^2}{c_p T} \right)^{\frac{1}{\gamma - 1}}$$

$$\frac{\rho_0}{\rho} = \left(1 + \frac{1.4 - 1}{2} \frac{V^2}{c_p T} \right)^{\frac{1}{1.4 - 1}}$$

$$\frac{\rho_0}{\rho} = \left(1 + \frac{0.4}{2} \frac{V^2}{c_p T} \right)^{\frac{1}{0.4}}$$

$$\frac{\rho_0}{\rho} = \left(1 + \frac{0.2}{220000} V^2 \right)^{\frac{1}{0.4}}$$

$$\frac{\rho_0}{\rho} = \left(\frac{2500}{220} \right)^{\frac{1}{0.4}}$$

$$\frac{\rho_0}{\rho} = \left(11.3636 \right)^{\frac{1}{0.4}}$$

$$\frac{\rho_0}{\rho} = 11.3636^{2.5}$$

$$\frac{\rho_0}{\rho} = 35.7143$$

Worked Example 4.5

An air stream at 1 bar, 400 K moving at a speed of 400 m/s is suddenly brought to rest. Determine the final pressure, temperature and density if the process is adiabatic.

Assume for air: $\gamma = 1.4$. $C_p = 1005 \text{ J/kgK}$ and density = 1.2 kg/m^3 .

Solution:

Using the stagnation relations,

$$\frac{p_0}{p} = \left(1 + \frac{\gamma - 1}{2} \frac{V^2}{a^2}\right)^{\frac{\gamma}{\gamma - 1}}$$

$$\frac{T_0}{T} = 1 + \frac{\gamma - 1}{2} \frac{V^2}{a^2}$$

$$\frac{\rho_0}{\rho} = \left(1 + \frac{\gamma - 1}{2} \frac{V^2}{a^2}\right)^{\frac{1}{\gamma - 1}}$$

4.8 Tutorial Problems – Compressible Flow

4.1 Assuming the ideal gas model holds, determine the velocity of sound in

- a) air (*mwt* 28.96) at 25°C, with $\gamma = 1.4$,
- b) argon (*mwt* 39.95) at 25°C, with $\gamma = 1.667$.

Ans[346 m/s, 321.5 m/s]

- 4.2 An airplane can fly at a speed of 800km/h at sea-level where the temperature is 15°C. If the airplane flies at the same Mach number at an altitude where the temperature is -44°C, find the speed at which the airplane is flying at this altitude.

Ans[198 m/s]

- 4.3 A low flying missile develops a nose temperature of 2500K when the ambient temperature and pressure are 250K and 0.01 bar respectively. Determine the missile velocity and its stagnation pressure. Assume for air: $\gamma = 1.4$. $C_p = 1005 \text{ J/kgK}$

Ans[2126 m/s, 31.6 bar]

- 4.4 An airplane is flying at a relative speed of 200 m/s when the ambient air condition is 1.013 bar, 288 K. Determine the temperature, pressure and density at the nose of the airplane. Assume for air: $\gamma = 1.4$, density at ambient condition = 1.2 kg/m^3 and $C_p = 1005 \text{ J/kgK}$.

Ans[$T_o=307.9\text{K}$, $P_o=1.28 \text{ bar}$, $\rho = 1.42 \text{ kg/m}^3$]



Brain power

By 2020, wind could provide one-tenth of our planet's electricity needs. Already today, SKF's innovative know-how is crucial to running a large proportion of the world's wind turbines.

Up to 25 % of the generating costs relate to maintenance. These can be reduced dramatically thanks to our systems for on-line condition monitoring and automatic lubrication. We help make it more economical to create cleaner, cheaper energy out of thin air.

By sharing our experience, expertise, and creativity, industries can boost performance beyond expectations. Therefore we need the best employees who can meet this challenge!

The Power of Knowledge Engineering

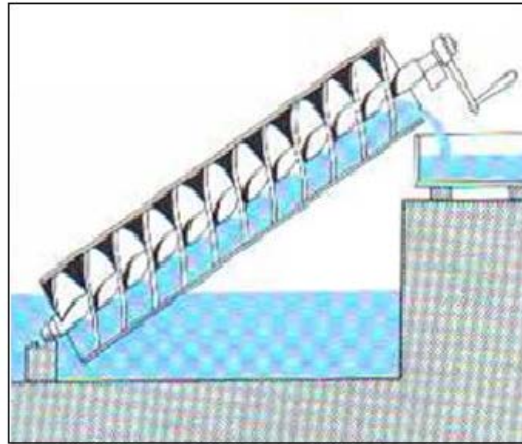
Plug into The Power of Knowledge Engineering.
Visit us at www.skf.com/knowledge

SKF

5 Hydroelectric Power

Contents

- 5.1 Introduction**
- 5.2 Types of Hydraulic Turbines**
- 5.3 Performance evaluation of hydroelectric power plants**
- 5.4 Case study – Dinorwig**
- 5.5 Worked examples**
- 5.6 Tutorial problems**



Archimedes was a mathematician and inventor from ancient Greece (born 280 BC). He invented a screw-shaped machine or hydraulic screw that raised water from a lower to a higher level.

5.1 Introduction

Hydraulic Turbines are used for converting the potential energy of water into useful Mechanical power to drive machines as in Mills or pumps or electrical energy using electrical generators.

- Hydroelectric power stations can be classified according to power output into micro hydro, mini hydro, small hydro and large hydro systems. The definitions according to the International Energy Association are as follows:
 - Micro hydro – hydroelectric station with installed capacity lower than 100 kW
 - Mini hydro – hydroelectric station in the range of 100kW to 1 MW
 - Small hydro – hydroelectric station in the range of 1 MW to 30 MW
 - Large hydro – hydroelectric station with installed capacity of over 30 MW

Hydropower is a clean and renewable source of energy that can contribute to fighting climate change. The following advantages make hydropower a much preferred option to any fossil fuel power scheme:

- No fuel needed – The chief advantage of hydro systems is elimination of the cost of fuel. Hydroelectric plants are immune to price increases for fossil fuels such as oil, natural gas or coal, and do not require imported fuel.
- Longevity – Hydroelectric plants tend to have longer lives than fuel-fired generation, with some plants now in service having been built 50 to 100 years ago.
- Pollution free – Hydroelectric plants generally have small to negligible emissions of carbon dioxide and methane due to reservoir emissions, and emit no sulphur dioxide, nitrogen oxides, dust, or other pollutants associated with combustion.

- Quick Response – Since the generating units can be started and stopped quickly, they can follow system loads efficiently, and may be able to reshape water flows to more closely match daily and seasonal system energy demands.
- Environmentally friendly – Reservoirs created by hydroelectric schemes often provide excellent leisure facilities for water sports, and become tourist attractions in themselves..
- Wildlife preserves can be created around reservoirs, which can provide stable habitats for endangered and threatened species(Eg. catch rates for game fish like walleye and small mouth bass are substantially higher on hydro power reservoirs than natural lakes.)
- Flood prevention – the surplus water can be stored behind the dam and hence reduce the risk of flood.

5.2 Types of hydraulic turbines

Depending on the method of interaction between the fluid and the machine, there are two main types of turbines, IMPULSE and REACTION.

A Impulse Turbine

This type of turbine is usually selected for high head and low flow rate conditions. The water is usually directed on to the turbine blades via a nozzle and the jet will impinge and leaves the turbine at atmospheric condition.

The high velocity jet leaves the nozzle at atmospheric pressure and impinges on to the wheel blades or buckets.

The tangential force exerted on the buckets is produced by a change in momentum of the jet, both in magnitude and direction.

The most important type of impulse turbine is the PELTON wheel.

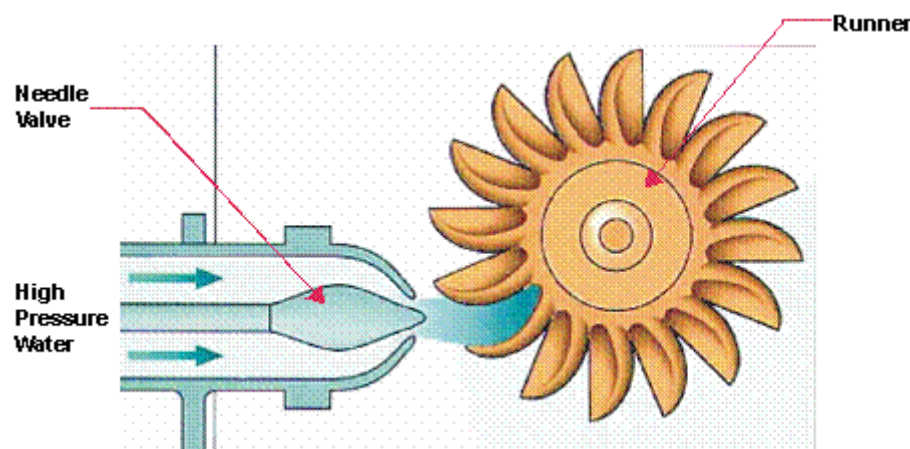


Figure 5.1: Pelton Turbine (Wheel)

Courtesy of: http://re.emsd.gov.hk/english/other/hydroelectric/hyd_tech.html

B Reaction Turbine

This type of turbine is usually selected for low head conditions, but relatively higher flow rate than in impulse turbines. In reaction turbines part of the pressure energy is transformed into kinetic energy in the stationary guide vanes and the remainder is transferred in the runner wheel. This type of turbine does not run at atmospheric; in fact the pressure changes continuously while flowing through the machine. The chief turbines of this type are the FRANCIS and KAPLAN turbines.

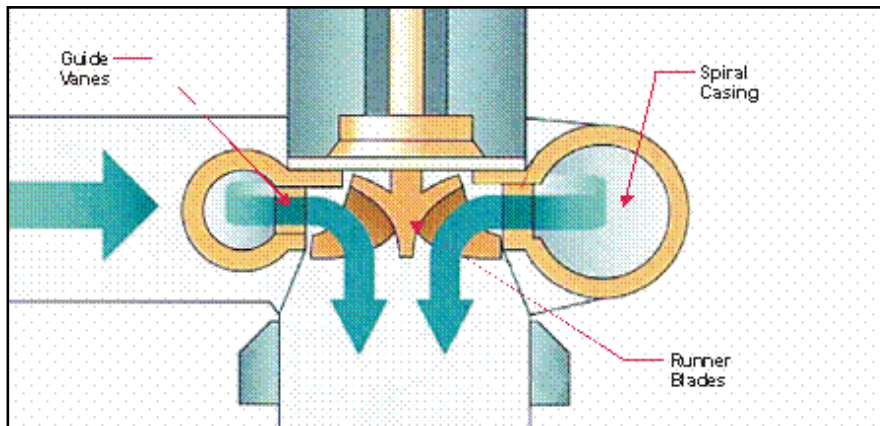


Figure 5.2: Francis Turbine

Courtesy of: http://re.emsd.gov.hk/english/other/hydroelectric/hyd_tech.html

TURN TO THE EXPERTS FOR SUBSCRIBE CONSULTANCY

Subscribe is one of the leading companies in Europe when it comes to innovation and business development within subscription businesses.

We innovate new subscription business models or improve existing ones. We do business reviews of existing subscription businesses and we develop acquisition and retention strategies.

Learn more at [linkedin.com/company/subscribe](https://www.linkedin.com/company/subscribe) or contact Managing Director Morten Suhr Hansen at mha@subscribe.dk

SUBSCRIBE - to the future

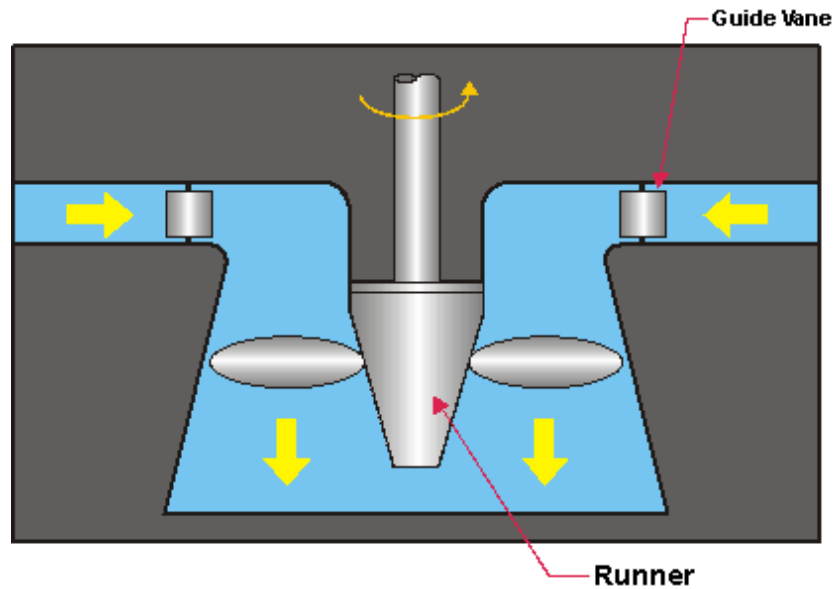


Figure 5.3: Kaplan Turbine

Courtesy of: http://re.emsd.gov.hk/english/other/hydroelectric/hyd_tech.html

C Reversible Pump/Turbine

Modern pumped storage units require the use of a reversible pump / turbine that can be run in one direction as pump and in the other direction as turbine. These are coupled to reversible electric motor/generator. The motor drives the pump during the storage portion of the cycle, while the generator produces electricity during discharge from the upper reservoir.

Most reversible-pump turbines are of the Francis type. The complexity of the unit, however, increases significantly as compared to a turbine alone. In spite of the higher costs for both hydraulic and electrical controls and support equipment, the total installed cost will be less than for completely separate pump-motor and turbine-generator assemblies with dual water passages.

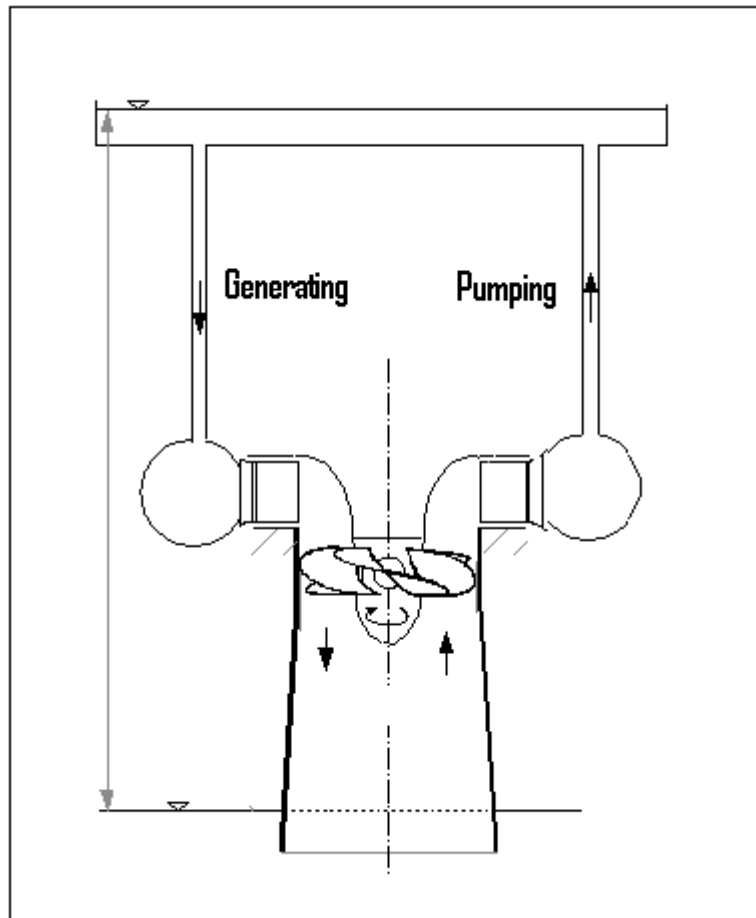


Figure 5.4: Reversible Francis Turbine/Pump system
 Courtesy of: http://oei.fme.vutbr.cz/jskorpik/en_lopatkovy-stroj.html

5.3 Performance evaluation of Hydraulic Turbines

The power available from water can be expressed as

$$P = \rho Q g h \times \eta \quad (5.1)$$

Where

P = power available (W)

ρ = density (kg/m^3) ($\sim 1000 \text{ kg/m}^3$ for water)

Q = water flow (m^3/s)

g = acceleration of gravity (9.81 m/s^2)

h = falling height, head (m)

The hydraulic efficiency depends on many factors such as the type of turbine and the operational conditions. Typical values are between 50% and 75%.

The theoretical approach velocity of water is given by:

$$V = \sqrt{2.g.h} \quad (5.2)$$

However real hydropower stations have penstock of considerable length incorporating many pipe fittings, bends and valves, hence the effective head is reduced, and as such the real velocity of water approaching the turbine is less than that quoted in equation 5.2.

The volume flow rate of water is calculated by the continuity equation:

$$Q = V \times A \quad (5.3)$$

The different hydraulic turbines described in the previous section have different characteristics such as power rating, operating head and rotational speed, the term specific speed is introduced to group the three terms:

$$\frac{N}{\sqrt{P}} \quad (5.4)$$

The concept of specific speed helps to classify the different turbines according to the range in which they operate, see Table 5.5.



“I studied English for 16 years but...
...I finally learned to speak it in just six lessons”
Jane, Chinese architect

ENGLISH OUT THERE

Click to hear me talking before and after my unique course download

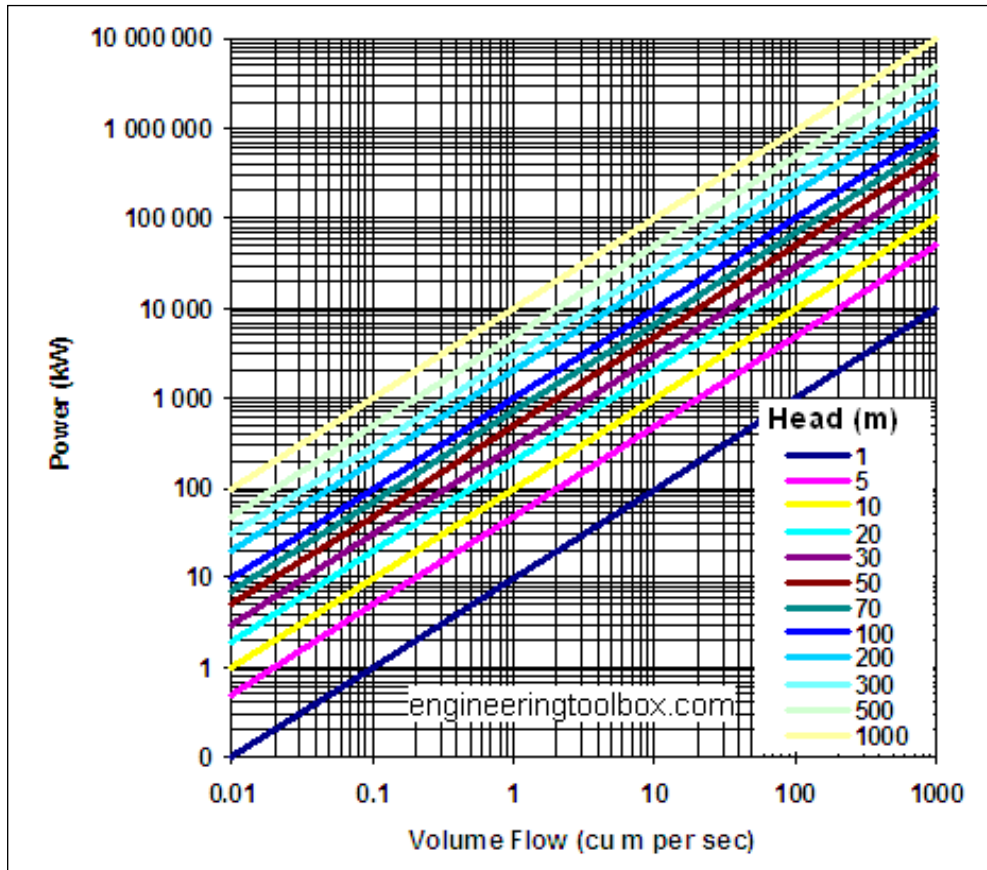


Figure 5.5 Typical Power – flow rate evaluation chart.

Courtesy of: http://www.engineeringtoolbox.com/hydropower-d_1359.html

| Type Of Turbine | Specific speed range |
|-----------------|----------------------|
| Francis | 70–500 |
| Propeller | 600–900 |
| Kaplan | 350–1000 |
| Cross-flow | 20–90 |
| Turgo | 20–80 |
| Pelton, 1-jet | 10–35 |
| Pelton, 2-jet | 10–45 |

Table 5.1: Operating Range of Hydraulic Turbines

5.4 Pumped storage hydroelectricity

Some areas of the world have used geographic features to store large quantities of water in elevated reservoirs, using excess electricity at times of low demand to pump water up to the reservoirs, then letting the water fall through turbine generators to retrieve the energy when demand peaks.

Pumped storage hydroelectricity was first used in Italy and Switzerland in the 1890s. By 1933 reversible pump-turbines with motor-generators were available. Adjustable speed machines are now being used to improve efficiency.

Hydro-electric power plants are economically viable because of the difference between peak and off-peak electricity prices. Pumped-storage plants can respond to load changes within seconds.

Hydropower electricity is the product of transforming the potential energy stored in water in an elevated reservoir into the kinetic energy of the running water, then mechanical energy in a rotating turbine, and finally electrical energy in an alternator or generator. Hydropower is a mature renewable power generation technology that offers two very desirable characteristics in today's electricity systems: built-in storage that increases the system's flexibility and fast response time to meet rapid or unexpected fluctuations in supply or demand. Hydropower amounted to 65% of the electricity generated from renewable energy sources in Europe in 2007 or 9% of the total electricity production in the EU-27. Today's installed capacity in the EU-27 for hydropower is about 102 GW, without hydro-pumped storage. Approximately 90% of this potential is covered by large hydropower plants. Over 21 000 small hydropower plants account for above 12 GW of installed capacity in the EU-27.

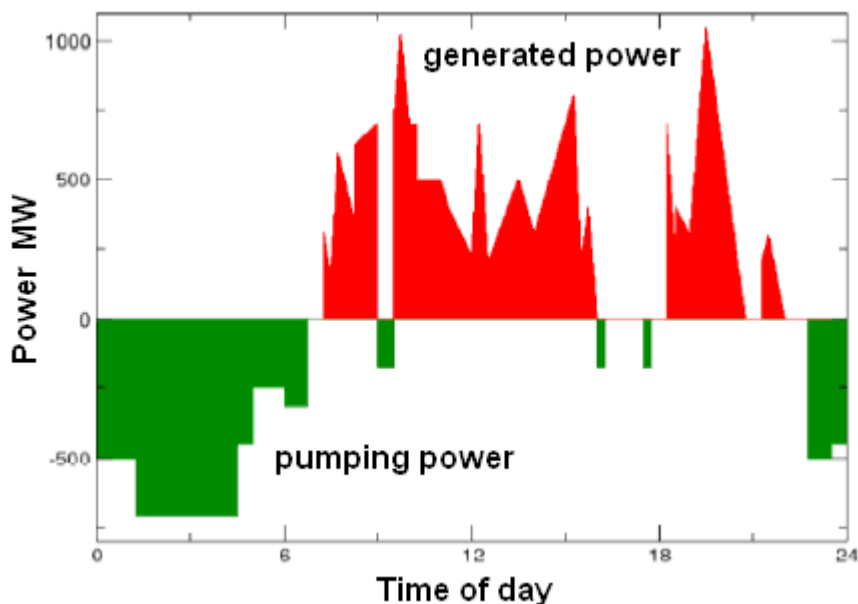


Figure 5.6 Typical daily cycle for a pumped storage hydro-electric power plant.

Case study – Dinorwig power station

Dinorwig is the largest scheme of its kind in Europe. The station's six powerful generating units (6x288 = 1728 MW) stand in Europe's largest man-made cavern. Adjacent to this lies the main inlet valve chamber housing the plant that regulates the flow of water through the turbines.

Dinorwig's reversible pump/turbines are capable of reaching maximum generation in less than 16 seconds. Using off-peak electricity the six units are reversed as pumps to transport water from the lower reservoir Llyn Peris, back to Marchlyn Mawr.



What do you want to do?

No matter what you want out of your future career, an employer with a broad range of operations in a load of countries will always be the ticket. Working within the Volvo Group means more than 100,000 friends and colleagues in more than 185 countries all over the world. We offer graduates great career opportunities – check out the Career section at our web site www.volvogroup.com. We look forward to getting to know you!

VOLVO
AB Volvo (publ)
www.volvogroup.com

VOLVO TRUCKS | RENAULT TRUCKS | MACK TRUCKS | VOLVO BUSES | VOLVO CONSTRUCTION EQUIPMENT | VOLVO PENTA | VOLVO AERO | VOLVO IT
VOLVO FINANCIAL SERVICES | VOLVO 3P | VOLVO POWERTRAIN | VOLVO PARTS | VOLVO TECHNOLOGY | VOLVO LOGISTICS | BUSINESS AREA ASIA

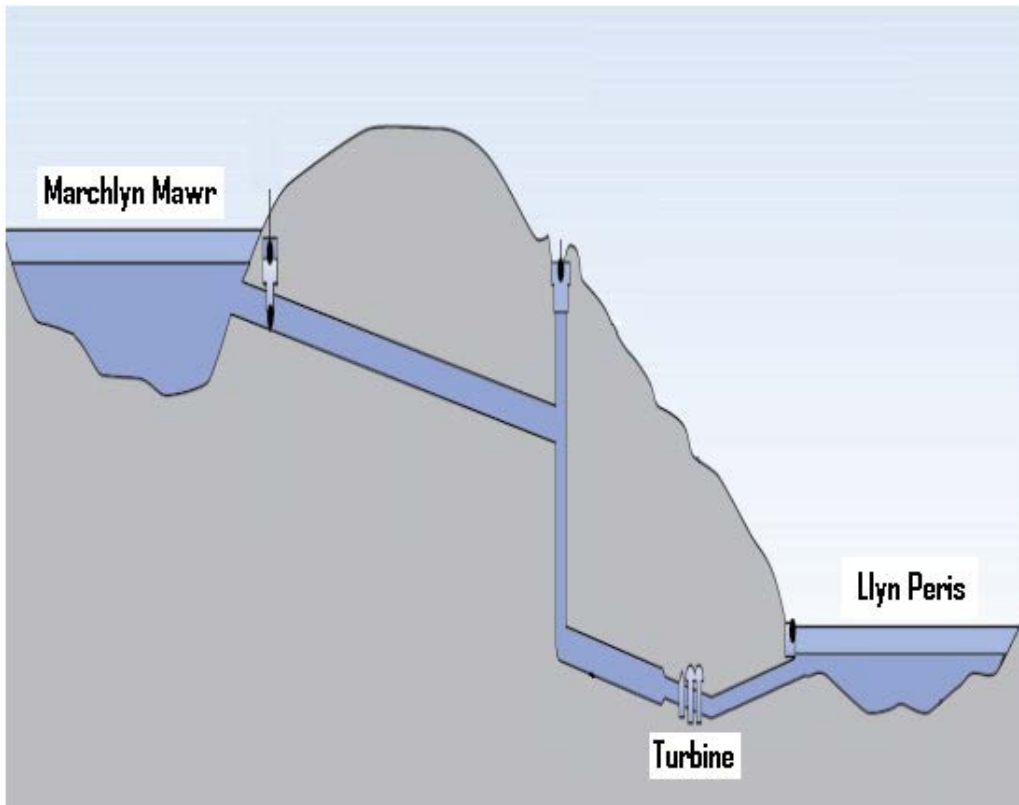


Figure 5.7 Dinorwig Power plant

| | |
|---|--|
| Surge Pond Data: | |
| Dimensions of surge pond | 80x40x14 metres deep |
| Diameter of surge shaft | 30 metres |
| Depth of surge shaft | 65 metres |
| Generator/Motors: | |
| Type | Vertical shaft, salient pole, air cooled |
| Generator rating | 330 MVA |
| Motor rating | 312 MVA |
| Terminal voltage | 18kV |
| Excitation | Thyristor rectifier |
| Starting equipment | Static variable frequency |
| Generator-Motor Transformer: | |
| Number | Six |
| Approximate rating | 340 MVA |
| Voltage ratio | 18 kV/420 kV |
| Underground Caverns: | |
| Distance of power station inside mountain | 750 metres |

| | |
|---|---|
| Depth of turbine hall below top level of Llyn Peris | 71 metres |
| Machine Hall: | |
| Length | 180 metres |
| Width | 23 metres |
| Height | 51 metres max |
| Transformer Hall: | |
| Length | 160 metres |
| Width | 23 metres |
| Height | 17 metres |
| Diversion tunnel length | 2,208 metres |
| Width | 6.5 metres |
| Height | 5.5 metres |
| Maximum flow | 60 cubic m/s |
| Normal flow | 1-8 cubic m/s |
| Fall | 1:1500 |
| Pump/Turbines: | |
| Type | Reversible Francis |
| Number | 6 |
| Plant orientation | Vertical spindle |
| Average pump power input | 275 MW |
| Pumping period (full volume) | 7 hours |
| Synchronous speed | 500 rpm |
| Average full unit over all heads (declared capacity) | 288 MW Generation potential at full load |
| Output | 5 hours |
| Station power requirements when generating | 12 MW |
| Standby operational mode | |
| Synchronised and spinning-in-air emergency load pick-up rate from standby | 0 to 1,320 MW in 12 seconds |
| Transmission Switchgear: | |
| Type | SF6 metal clad |
| Breaking capacity | 35,000 MVA |
| Current rating | 4,000 A |
| Voltage | 420 kV |
| Excavations: | |
| Main underground excavation | 1 million cubic metres (approx. 3 million tonnes) |
| Total scheme excavations | 12 million tonnes |

Table 5.2 Dinorwig Facts & Figures

5.5 Worked Examples

Worked Example 5.1

Dinorwig power station has a head of 500m between the upper and the lower reservoir.

- a) determine the approach velocity of water as it enters the turbine
- b) if the volume flow rate is 60 m³/s what is the diameter of the penstock
- c) if the head loss due to friction represents 10% of the static head stated in (a), determine the actual velocity of approach and the corrected diameter of the penstock required.

Solution

- a) the approach velocity;

$$\sqrt{\quad} \quad \sqrt{\quad}$$

- b) The flow rate of water $Q = V \times A$; Hence

$$\frac{Q}{\sqrt{\quad}} = \frac{Q}{\sqrt{\quad}}$$

gaieteye
Challenge the way we run

EXPERIENCE THE POWER OF FULL ENGAGEMENT...

**RUN FASTER.
RUN LONGER..
RUN EASIER...**

**READ MORE & PRE-ORDER TODAY
WWW.GAITEYE.COM**



- c) The effective head is the actual head minus the friction head loss

$$h_f = 10\% \text{ of } h = (10/100) \times 500 = 50 \text{ m}$$

$$\text{Effective head} = h - h_f = 450 \text{ m}$$

Hence

$$\frac{\sqrt{\quad}}{\quad} = \frac{\sqrt{\quad}}{\sqrt{\quad}}$$

Worked Example 5.2

The average head of the water stored in the upper reservoir of the Dinorwig pumped storage system in Wales is 500 metres.

- Calculate the water flow rate through one of the turbo-generators when it is producing an output of 300 MW at 94% efficiency.
- The upper reservoir can store 7.2 million cubic metres of water. Show that this is enough to maintain the output from all six 300 MW generators, running simultaneously, for a little over five hours.

You may assume that there is no rain during these hours.

Solution

- a) The output power in kilowatts is given by

$$P = 9.81 Q H \eta$$

$$\text{So in this case we have } 300,000 = 9.81 \times Q \times 500 \times 0.94$$

$$\text{Which means that } Q = 65 \text{ m}^3 \text{ s}^{-1}$$

- b) The flow rate for 6 turbines is $6 \times 65 = 390 \text{ m}^3 \text{ s}^{-1}$

And the available supply will maintain this for

$$7,200,000/390 = 18,442 \text{ seconds,}$$

$$\text{Which is } 18442/3600 = 5.12 \text{ hours.}$$

Worked Example 5.3

Calculate the specific speeds for Dinorwig power station described in the table below and recommend an appropriate type of turbine.

| Power station | (P) Turbine rating (kW) | (h) Average head (m) | (N) Revolutions per minute | (Ns) Specific speed | Turbine type used |
|---------------|----------------------------|-------------------------|-------------------------------|------------------------|----------------------|
| Dinorwig | 300 000 | 500 | 500 | | |

Solution

The last two columns are the solution to this question; the specific speeds are calculated using the definition of specific speed and the type of turbine/s were chosen according to table1.

| Type Of Turbine | Specific speed range |
|-----------------|----------------------|
| Francis | 70–500 |
| Propeller | 600–900 |
| Kaplan | 350–1000 |
| Cross-flow | 20–90 |
| Turgo | 20–80 |
| Pelton, 1-jet | 10–35 |
| Pelton, 2-jet | 10–45 |



Checking the values in the table, this lies in the Francis turbine range

| Power station | (P) Turbine rating (kW) | (h) Average head (m) | (N) Revolutions per minute | (Ns) Specific speed | Turbine type used |
|---------------|----------------------------|-------------------------|-------------------------------|------------------------|----------------------|
| Dinorwig | 300 000 | 500 | 500 | 116 | Francis |

5.7 Tutorial Problems

5.1 A small-scale hydraulic power system has an elevation difference between the reservoir water surface and the pond water surface downstream of the turbine is 10 m. The flow rate through the turbine is $1 \text{ m}^3/\text{s}$. The turbine/generator efficiency is 83%. Determine the power produced if:

- Flow losses are neglected.
- Assume friction loss equivalent to 1 m head.

Ans: (81 kW, 73 kW)

5.2 A hydro-electric power plant based on the Loch Sloy in Scotland has an effective head of 250 metres. If the flow rate of $16 \text{ m}^3/\text{s}$ can be maintained, determine the total power input to the turbine assuming a hydraulic efficiency of 98%; and

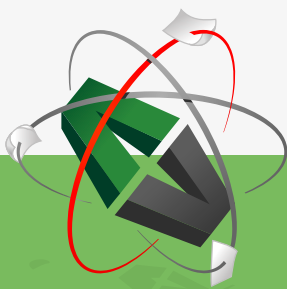
- the pressure difference across the turbine.

Ans: (38 MW, 2.4 MPa)

5.3 A proposed hydropower plant to be built using a reservoir with a typical head of 18m and estimated power of 15 MW. You are given the task to select an appropriate type of turbine for this site if the generator requires the turbine to run at a fixed speed of 120 rpm.

Ans: ($N_s=396$, Francis or Kaplan)

This e-book
is made with
SetaPDF



PDF components for PHP developers

www.setasign.com



Sample Examination paper



CLASS TEST – FLUID MECHANICS

Module Tutor T. Al-Shemmeri

This Paper contains TEN questions. Attempt all questions.

A formulae sheet is provided.

Place your Answers in the space provided. No detailed solution required.

Print your name on every page. Submit all together for marking.

MARKING GRID LEAVE BLANK PLEASE

| question | 1 | 2 | 3 | 4 | 5 | 6 | 7 | 8 | 9 | 10 | total |
|------------------------|---|---|---|---|---|---|---|---|---|----|-------|
| 1 st Marker | | | | | | | | | | | |
| 2 nd marker | | | | | | | | | | | |

| | |
|-------------------|--|
| Agreed percentage | |
| Recommended grade | |

QUESTION ONE

List THREE types of instrument used to measure the pressure of a toxic fluid contained in a sealed tank.


Complete the table below:

| Type | Principle | marks |
|------|-----------|-----------|
| | | / 3 marks |
| | | / 3 marks |
| | | / 3 marks |

Total (9 marks)

QUESTION TWO

- a) Draw (not to scale) the pressure distribution of the water on the dam shown below: (6 marks)



- b) Indicate on the sketch, the direction of the resultant force on the dam? (2 marks)
- c) Approximately, indicate the position of the centre of pressure on both sides. (2 marks)

Total (10 marks)

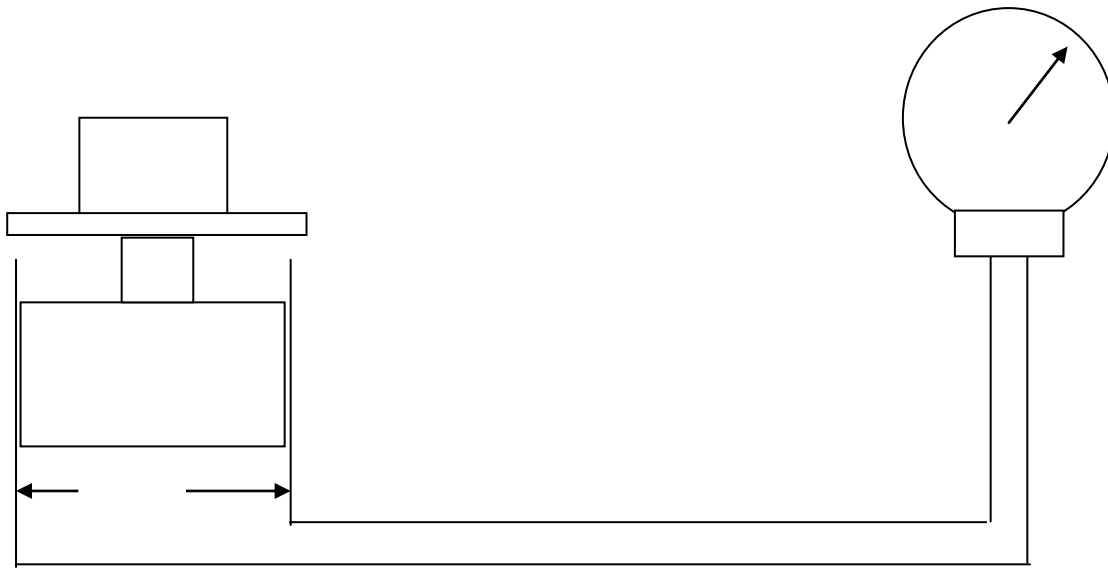
QUESTION THREE

List Three methods used to improve the resolution of detecting a small pressure reading in a manometer. Complete the table below:

| Method | Principle | marks |
|--------|-----------|-----------|
| | | / 3 marks |
| | | / 3 marks |
| | | / 3 marks |

Total (9 marks)


QUESTION FOUR



Free eBook on Learning & Development

By the Chief Learning Officer of McKinsey

Download Now



Click on the ad to read more

Complete the table below:

| | | |
|--|--|-----------|
| Theoretical reading of the pressure | | / 3 marks |
| % error | | / 3 marks |
| The maximum load if the gauge limit is 100 kPa | | / 3 marks |

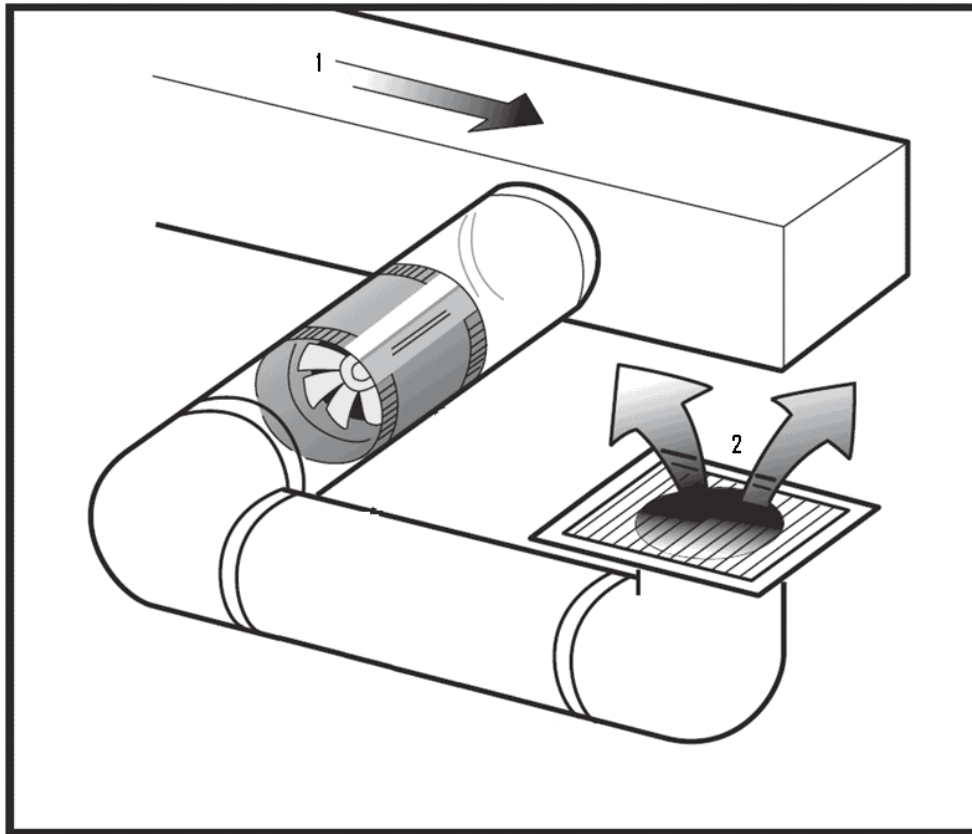
Total (9 marks)

QUESTION FIVE

If the fan, below, circulates air at the rate of $0.30 \text{ m}^3/\text{s}$, determine the velocity in each section. Complete the table below.

| Section | dimensions m | Area m^2 | Velocity m/s | Marks |
|---------|-----------------|----------------------|-----------------|-----------|
| 1 | 0.25 square | | | / 5 marks |
| 2 | 0.20 diameter | | | / 5 marks |

Total (10 marks)



QUESTION SIX

Oil of relative density 0.90 flows at the rate of 100 kg/s in a horizontal pipe of 200 mm diameter, 1 km long. If the friction factor for the pipe is 0.006, complete the following table:

| quantity | value | units | marks |
|-----------------------------|-------|-------|-----------|
| flow velocity | | | / 3 marks |
| frictional head loss | | | / 3 marks |
| frictional pressure loss | | | / 2 marks |
| energy to overcome friction | | | / 2 marks |

Total (10 marks)

QUESTION SEVEN

Show that Bernoulli's equation is dimensionally homogeneous

4 marks for the p-term,

4 marks for the v-term, and

2 marks for the z-term and for stating that all dimensions have/have not the same dimensions

Total (10 marks)



www.sylvania.com

We do not reinvent
the wheel we reinvent
light.

Fascinating lighting offers an infinite spectrum of possibilities: Innovative technologies and new markets provide both opportunities and challenges. An environment in which your expertise is in high demand. Enjoy the supportive working atmosphere within our global group and benefit from international career paths. Implement sustainable ideas in close cooperation with other specialists and contribute to influencing our future. Come and join us in reinventing light every day.

Light is OSRAM

**OSRAM
SYLVANIA** 

QUESTION EIGHT

Oil (relative density 0.85, kinematic viscosity 80cs) flows at the rate of 90 tonne per hour along a 100 mm bore smooth pipe. Determine for the flow:

| Quantity | value | marks |
|--------------------|-------|-----------|
| flow velocity | | / 3 marks |
| frictional factor | | / 3 marks |
| Nature of the flow | | / 6 marks |

Total (12 marks)

QUESTION NINE

List two instruments for measuring the flow rate of air through a rectangular duct.

| Method | Principle | marks |
|--------|-----------|-----------|
| | | / 4 marks |
| | | / 4 marks |

Total (8 marks)

QUESTION TEN

Draw the body force diagram for a parachute jumper.

If the vertical component of the landing velocity of a parachute is 6 m/s, find the total weight of the parachutist and the parachute (hollow hemisphere Diameter 5m) Assume for air at ambient conditions, Density = 1.2 kg/m^3 and $C_d = 2.3$



| | |
|--------------------------------|-----------|
| For correct body force diagram | /3marks |
| For correct use of formula | / 3 marks |
| For correct answer | /4 marks |
| Total (10 marks) | |

Formulae Sheet

FLUID STATICS:

$$P = \rho g h$$

CONTINUITY EQUATION:

$$\text{mass flow rate} \quad m = \rho A V$$

$$\text{volume flow rate} \quad Q = A V$$

ENERGY EQUATION

$$(P/\rho g) + (V^2/2g) + Z = \text{constant}$$

DARCY'S EQUATION

$$H_f = (4 f L / D) (V^2 / 2g)$$



Discover the truth at www.deloitte.ca/careers

Deloitte.

© Deloitte & Touche LLP and affiliated entities.



Click on the ad to read more

FRICTION FACTOR FOR A SMOOTH PIPE

$$f = 16 / \text{Re} \quad \text{if } \text{Re} < 2000$$

$$f = 0.079 / \text{Re}^{0.25} \quad \text{if } \text{Re} > 4000$$

MOMENTUM EQUATION

$$F = m (V_2 \cos\theta - V_1)$$

$$\text{DRAG FORCE} = C_d \times (1/2) \times \rho \cdot A \cdot V^2$$

FLUID POWER

$$E = \rho Q g h \times \eta \quad \text{for a turbine}$$

$$E = \rho Q g h / \eta \quad \text{for a pump}$$